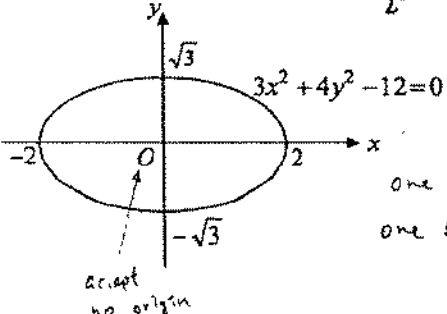


Solution	Marks	Remarks
<p>1. <math>(1+x)^n + (1+2x)^n</math></p> <p><math>= 1 + {}_n C_1 x + {}_n C_2 x^2 + \dots + 1 + {}_n C_1 (2x) + {}_n C_2 (2x)^2 + \dots</math></p> <p>Coefficient of <math>x^2 = ({}_n C_2 + 4 {}_n C_2) x^2</math> pp-1</p> <p><math>= 5 {}_n C_2</math></p> <p><math>5 {}_n C_2 = 75</math></p> <p><math>{}_n C_2 = 15</math></p> <p><math>\frac{n(n-1)}{2} = 15</math></p> <p><math>n^2 - n - 30 = 0</math></p> <p><math>n = 6</math> or <math>-5</math> (rejected)</p> <p><math>n = 6</math></p> <p><math>1 + nx + \frac{n(n-1)}{2} x^2</math></p> <p><math>1 + 2nx + 2n(n-1) x^2</math></p> <p>accept</p>	<p>either</p> <p>1A+1A</p> <p>↓</p> <p>both</p> <p>1M</p> <p>1A</p> <hr/> <p>4</p>	<p>For <math>{}_n C_2 = \frac{n(n-1)}{2}</math> ✓</p> <p>(can be omitted)</p>
<p>2. <math>y = (x-1)^4 + 4</math></p> <p><math>\frac{dy}{dx} = 4(x-1)^3</math></p> <p>Slope of the line <math>y = 4x + 8</math> is 4.</p> <p><math>4(x-1)^3 = 4</math></p> <p><math>(x-1)^3 = 1</math></p> <p><math>x = 2</math></p> <p>Put <math>x = 2</math>, <math>y = (2-1)^4 + 4</math></p> <p><math>= 5</math></p> <p>Equation of tangent is</p> <p><math>\frac{y-5}{x-2} = 4</math></p> <p><math>y = 4x - 3</math></p>	<p>1A</p> <p>1M</p> <p>1M</p> <p>1A</p> <hr/> <p>4</p>	<p>For setting <math>\frac{dy}{dx} = 4</math></p> <p>For finding <math>x, y</math> and equation of tangent</p>

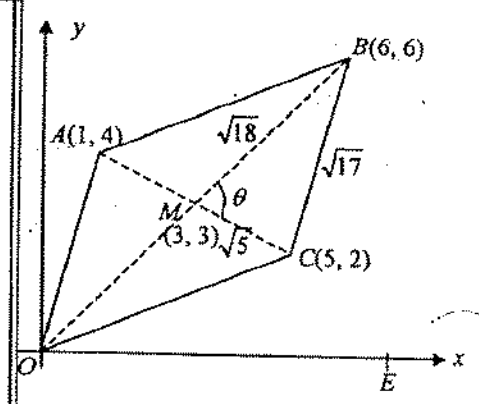
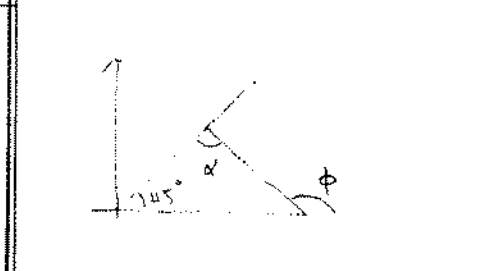
Solution	Marks	Remarks
<p>3. <math>x \sin y = 2002</math></p> <p><math>\sin y + x \cos y \frac{dy}{dx} = 0</math></p> <div style="border: 1px solid black; padding: 5px; display: inline-block; margin: 10px;"> <p>OR <math>\sin y \frac{dx}{dy} + x \cos y = 0</math></p> <p style="text-align: center;">1A</p> </div> <p><math>\frac{dy}{dx} = \frac{-\tan y}{x}</math></p>	<p>1M+1A+1A</p> <p>1A</p>	<p>1M for product rule,</p> <p>1A for <math>\frac{d}{dx} \sin y = \cos y \frac{dy}{dx}</math>,</p> <p>1A for <math>\frac{d}{dx} (2002) = 0</math></p> <p>Accept <math>\frac{dy}{dx} = \frac{-\sin y}{x \cos y}</math></p>
<p>Alternative solution (1)</p> <p><math>\sin y = \frac{2002}{x}</math></p> <p><math>\cos y \frac{dy}{dx} = \frac{-2002}{x^2}</math></p> <p><math>\frac{dy}{dx} = \frac{-2002}{x^2 \cos y} = \frac{-2002 \cdot \frac{\sin y}{2002} \cdot \frac{1}{x}}{\cos y} = \frac{-\tan y}{x}</math></p>	<p>1A</p> <p>1M+1A</p> <p>1A</p>	<p>1M for chain rule</p> <p>1A for RHS</p>
<p>Alternative solution (2)</p> <p><math>x = \frac{2002}{\sin y}</math></p> <p><math>\frac{dx}{dy} = -2002 \csc y \cot y = \frac{-2002 \cos y}{\sin^2 y}</math></p> <p><math>\frac{dy}{dx} = \frac{-\sin y \tan y}{2002}</math></p>	<p>1A</p> <p>1M+1A</p> <p>1A</p>	<p>1M for finding <math>\frac{dx}{dy}</math></p> <p>1A for RHS</p>
<hr/> <p>4</p> <hr/>		
<p>4. Let <math>x = \sin \theta</math>.</p> <p><math>dx = \cos \theta d\theta</math></p> <p><math>\int_0^{\frac{1}{2}} \frac{1}{\sqrt{1-x^2}} dx = \int_0^{\frac{\pi}{6}} \frac{1}{\sqrt{1-\sin^2 \theta}} \cos \theta d\theta</math></p> <p><math>= \int_0^{\frac{\pi}{6}} d\theta</math></p> <p><math>= [\theta]_0^{\frac{\pi}{6}}</math></p> <p><math>= \frac{\pi}{6}</math></p>	<p>1A</p> <p>1A+1M</p> <p>1A</p> <p>4</p>	<p>1A for limits, 1M for integrand</p> <p>Omit <math>dx, d\theta</math> in <u>most</u> cases (pp-1)</p>

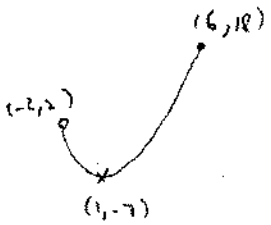
Solution	Marks	Remarks
<p>5. (a) <math> x-4  = 2\sqrt{(x-1)^2 + y^2}</math></p> $x^2 - 8x + 16 = 4(x-1)^2 + 4y^2$ $= 4x^2 - 8x + 4 + 4y^2$ $3x^2 + 4y^2 - 12 = 0$ <p>(b)</p>  <p><math>\frac{x^2}{2^2} + \frac{y^2}{3} = 1</math></p> <p>one for x one for y</p>	<p>1M+1A ↓ either all one</p> <p>1</p> <p>1A+1A</p> <hr/> <p>5</p>	<p>1M for distance formula Accept omitting absolute sign</p> <p>1A for shape Axes not labeled (pp-1)</p>
<p>6.</p> <div style="border: 1px dashed black; padding: 5px; display: inline-block;"> <math display="block">\begin{cases} y = \sin x \\ y = \cos x \end{cases}</math> <math display="block">\sin x = \cos x</math> </div> <p><math>x = \frac{\pi}{4}</math> or <math>45^\circ</math> (accept)</p> <p>Area = <math>\int_0^{\frac{\pi}{4}} (\cos x - \sin x) dx</math></p> <p><math>= [\sin x + \cos x]_0^{\frac{\pi}{4}}</math></p> <p><math>= \frac{\sqrt{2}}{2} + \frac{\sqrt{2}}{2} - 1</math></p> <p><math>= \sqrt{2} - 1</math></p>	<p>1M</p> <p>1M+1A</p> <p>1M</p> <hr/> <p>1A</p> <hr/> <p>5</p>	<p>(can be omitted)</p> <p>1M for <math>= \int_a^b (y_2 - y_1) dx</math></p> <p>for <math>\int \cos x dx = \sin x</math> and <math>\int \sin x dx = -\cos x</math></p>

Solution	Marks	Remarks
7. (a) $ x-1  > 2$ $x-1 > 2$ or $x-1 < -2$ $x > 3$ or $x < -1$	1A 1A	
<u>Alternative solution (1)</u> $ x-1  > 2$ $(x-1)^2 > 4$ $x^2 - 2x - 3 > 0$ $(x+1)(x-3) > 0$ $x > 3$ or $x < -1$	1A     1A	
<u>Alternative solution (2)</u> Consider the cases (1) $x \geq 1$ , (2) $x < 1$ . Case 1: $x \geq 1$ The inequality becomes $x-1 > 2$ $x > 3$ Since $x \geq 1$ , $x > 3$ . Case 2: $x < 1$ The inequality becomes $-x+1 > 2$ $x < -1$ Since $x < 1$ , $x < -1$ . Combining the 2 cases, $x > 3$ or $x < -1$ .	and 1A          1A	Accept including “=” sign
(b) $  y -1  > 2$ Using the result in (a), $ y  > 3$ or $ y  < -1$ (no solution)  $y > 3$ or $y < -3$	1M+1M   1A	1M for using (a), 1M for 2nd term having no solution
<u>Alternative solution (1)</u> $  y -1  > 2$ $ y -1 > 2$ or $ y -1 < -2$ $ y  > 3$ or $ y  < -1$ (no solution) $y > 3$ or $y < -3$	1A  1M 1A	For 2nd term having no solution
<u>Alternative solution (2)</u> Consider the cases (1) $ y  > 1$ , (2) $ y  < 1$ . Case 1: $ y  > 1$ ( $y > 1$ or $y < -1$ ) The inequality becomes $ y -1 > 2$ $ y  > 3$ $y > 3$ or $y < -3$ Since $ y  > 1$ , $y > 3$ or $y < -3$ . Case 2: $ y  < 1$ ( $-1 < y < 1$ ) The inequality becomes $- y +1 > 2$ $ y  < -1$ (no solution) Combining the 2 cases, $y > 3$ or $y < -3$ .	and 1A          1M 1A	
	5	

Solution	Marks	Remarks
<p>8. <math display="block">\frac{\tan x - \sin^2 x}{\tan x + \sin^2 x} = \frac{\frac{\sin x}{\cos x} - \sin^2 x}{\frac{\sin x}{\cos x} + \sin^2 x}</math></p> $= \frac{\sin x - \sin^2 x \cos x}{\sin x + \sin^2 x \cos x}$ $= \frac{1 - \sin x \cos x}{1 + \sin x \cos x}$ $= \frac{1 - \frac{1}{2} \sin 2x}{1 + \frac{1}{2} \sin 2x}$ $= \frac{2 - \sin 2x}{2 + \sin 2x} = \frac{4 - (2 + \sin 2x)}{2 + \sin 2x} \leftarrow$ $= \frac{4}{2 + \sin 2x} - 1$	<p>1A</p> <p>1M</p> <p>1</p>	<p>For <math>\sin x \cos x = \frac{1}{2} \sin 2x</math></p>
<p>Alternative solution</p> $\frac{4}{2 + \sin 2x} - 1$ $= \frac{4}{2 + 2 \sin x \cos x} - 1$ $= \frac{2}{1 + \sin x \cos x} - 1$ $= \frac{1 - \sin x \cos x}{1 + \sin x \cos x}$ $= \frac{\tan x (1 - \sin x \cos x)}{\tan x (1 + \sin x \cos x)}$ $= \frac{\tan x - \sin^2 x}{\tan x + \sin^2 x}$	<p>1M</p> <p>1A</p> <p>1</p>	<p>For <math>\sin 2x = 2 \sin x \cos x</math></p>
<p><math>\frac{\tan x - \sin^2 x}{\tan x + \sin^2 x}</math> is the least when <math>(2 + \sin 2x)</math> is the greatest, i.e. when <math>\sin 2x = 1</math>. <math>x = \frac{\pi}{4}</math></p> <p><math>\therefore</math> Least value <math>= \frac{4}{2+1} - 1</math></p> $= \frac{1}{3}$	<p>1M</p> <p>1A</p> <p>5</p>	<p>(can be omitted)</p>

Solution	Marks	Remarks
<p>9. <math>z^2 + z + 1 = 0</math>  <math>z = \frac{-1 \pm \sqrt{1-4}}{2}</math>  <math>= \frac{-1 \pm \sqrt{3}}{2} i</math></p> <p><math>\alpha, \beta</math> are <math>\cos \frac{2\pi}{3} + i \sin \frac{2\pi}{3}</math>, <math>\cos(-\frac{2\pi}{3}) + i \sin(-\frac{2\pi}{3})</math>.</p> <p><math>\alpha^6 + \beta^6 = (\cos \frac{2\pi}{3} + i \sin \frac{2\pi}{3})^6 + [\cos(-\frac{2\pi}{3}) + i \sin(-\frac{2\pi}{3})]^6</math>  <math>= \cos 4\pi + i \sin 4\pi + \cos(-4\pi) + i \sin(-4\pi)</math>  <math>= 2 \cos 4\pi</math>  <math>= 2</math></p>	<p>IM</p> <p>1A+1A</p> <p>IM</p> <p>1A</p>	<p>Accept degrees, Accept <math>\text{cis } \frac{4\pi}{3}</math></p> <p>For De Moivre Theorem</p>
<p><u>Alternative solution</u></p> <p><math>z^2 + z + 1 = 0</math>  <math>(z-1)(z^2 + z + 1) = 0</math>  <math>z^3 - 1 = 0</math>                  As <math>\alpha, \beta</math> are the roots of <math>z^3 - 1 = 0</math>,  <math>\alpha^3 = \beta^3 = 1</math>  <math>\alpha^6 + \beta^6 = (\alpha^3)^2 + (\beta^3)^2</math>  <math>= 1^2 + 1^2</math>  <math>= 2</math></p>	<p>IM</p>	

Solution	Marks	Remarks
10. (a) $\vec{OB} = \vec{OA} + \vec{AB}$ $= \vec{OA} + \vec{OC}$ $= (\vec{i} + 4\vec{j}) + (5\vec{i} + 2\vec{j})$ $= 6\vec{i} + 6\vec{j}$ $\vec{AC} = \vec{OC} - \vec{OA}$ $= (5\vec{i} + 2\vec{j}) - (\vec{i} + 4\vec{j})$ $= 4\vec{i} - 2\vec{j}$	1M 1A 1A	For finding $\vec{OB}$ or $\vec{AC}$
(b) $\vec{OB} \cdot \vec{AC} =  \vec{OB}   \vec{AC}  \cos \theta$ $(6\vec{i} + 6\vec{j}) \cdot (4\vec{i} - 2\vec{j}) = \sqrt{6^2 + 6^2} \sqrt{4^2 + (-2)^2} \cos \theta$ $24 - 12 = \sqrt{72} \sqrt{20} \cos \theta$ $\cos \theta = \frac{1}{\sqrt{10}}$ $\theta = 72^\circ$ (correct to the nearest degree)	1M 1M 1A	For LHS Omit vector sign or dot product sign in most cases (pp-1)
<u>Alternative solution (1)</u> $m_{OB} = 1$ $m_{AC} = -\frac{1}{2}$ $\tan \theta = \left  \frac{m_1 - m_2}{1 + m_1 m_2} \right $ $= \frac{1 - (-\frac{1}{2})}{1 + 1(-\frac{1}{2})}$ $= 3$ $\theta = 72^\circ$ (correct to the nearest degree)	} 1M 1M 1A	accept absolute value
<u>Alternative solution (2)</u> $BC = \sqrt{(6-5)^2 + (6-2)^2} = \sqrt{17}$ $CM = \sqrt{(5-3)^2 + (2-3)^2} = \sqrt{5}$ $MB = \sqrt{(6-3)^2 + (6-3)^2} = \sqrt{18}$ $\cos \theta = \frac{5 + 18 - 17}{2\sqrt{5}\sqrt{18}}$ $\theta = 72^\circ$ (correct to the nearest degree)	} 1M 1M 1A	
<u>Alternative solution (3)</u> Slope of $OB = 1$ $\therefore \angle BOE = \tan^{-1}(1) = 45^\circ$ Slope of $AC = \frac{4-2}{1-5} = -\frac{1}{2}$ $\therefore \angle = \tan^{-1}(-\frac{1}{2}) = 153.4^\circ$ $\theta = 180^\circ - (\angle BOE + \angle)$ $= 180^\circ - (45^\circ + 153.4^\circ)$ $= 72^\circ$ (correct to the nearest degree)	1M 1M 1A	
	6	

Solution	Marks	Remarks
<p>11. (a) <math>\begin{cases} y = x^2 - 2x - 6 \\ y = 2x + 6 \end{cases}</math>  <math>x^2 - 2x - 6 = 2x + 6</math>  <math>x^2 - 4x - 12 = 0</math>  <math>x = -2</math> or <math>6</math>                      When <math>x = -2</math>, <math>y = 2</math>                      When <math>x = 6</math>, <math>y = 18</math>  <math>\therefore</math> the coordinates of <math>A</math> and <math>B</math> are <math>(-2, 2)</math> and <math>(6, 18)</math> respectively.  <math>f(x) = x^2 - 2x - 6</math>  <math>= (x-1)^2 - 1 - 6 = (x-1)^2 - 7</math>  <math>\therefore</math> the coordinates of <math>C</math> are <math>(1, -7)</math>.</p> <p>(b) The range of values of <math>x</math> such that <math>f(x) \leq g(x)</math> is <math>-2 \leq x \leq 6</math>.</p> <p>From Figure 3, <math>f(x) = k</math> has only one real root when <math>2 &lt; k \leq 18</math> OR <math>k = -7</math>.</p>	<p>1M</p> <p>1A</p> <p>1M</p> <p>1A</p> <p>1A</p> <hr/> <p><math>\frac{1A+1A}{7}</math></p>	

$$x^2 - 2x - 6 = 0$$

$$(x-1)^2 = 7$$

$$x = 1 \pm \sqrt{7}$$



Solution	Marks	Remarks
12. (a) For $n = 1$ , LHS = $2(2) = 4$ $\text{RHS} = 1(2^{1+1}) = 4 = \text{LHS}$ $\therefore$ the statement is true for $n = 1$ . Assume $2(2) + 3(2)^2 + \dots + (k+1)(2^k) = k(2^{k+1})$ for any positive integer $k$ . Then $2(2) + 3(2)^2 + 4(2)^3 + \dots + (k+1)(2^k) + (k+2)(2^{k+1})$ $= k(2^{k+1}) + (k+2)(2^{k+1})$ $= 2^{k+1}(k+k+2)$ $= (k+1)2^{k+2}$	1  1  1  1	
The statement is also true for $n = k+1$ if it is true for $n = k$ . By the principle of mathematical induction, the statement is true for all positive integers $n$ .	1	Not awarded if any one of the above marks was withheld.
(b) $1(2) + 2(2^2) + 3(2^3) + \dots + 98(2^{98})$ $= 2[1 + 2(2) + 3(2^2) + \dots + 98(2^{97})]$ $= 2 + 2[2(2) + 3(2^2) + \dots + 98(2^{97})]$ $= 2 + 2(97)(2^{98})$ $= 2 + 97(2^{99})$	} 1M  1M 1	For using (a)
<u>Alternative solution (1)</u> Put $n = 97$ : $2(2) + 3(2^2) + 4(2^3) + \dots + 98(2^{97}) = 97(2^{98})$ Add 1 to both sides: $1 + 2(2) + 3(2^2) + \dots + 98(2^{97}) = 97(2^{98}) + 1$ Multiply both sides by 2: $2 + 2(2^2) + 3(2^3) + \dots + 98(2^{98}) = 97(2^{99}) + 2$	1M  1M 1	For using (a)
<u>Alternative solution (2)</u> $1(2) + 2(2^2) + 3(2^3) + \dots + 98(2^{98})$ $= (1+1)(2) + (2+1)(2^2) + (3+1)(2^3) + \dots$ $\quad + (98+1)(2^{98}) - (2 + 2^2 + \dots + 2^{98})$ $= 2(2) + 3(2^2) + 4(2^3) + \dots + (99)(2^{98})$ $\quad - (2 + 2^2 + 2^3 + \dots + 2^{98})$ $= 98(2^{98+1}) - \frac{2(2^{98}-1)}{2-1}$ $= 98(2^{99}) - 2^{99} + 2$ $= 97(2^{99}) + 2$	1M  $\downarrow$ 1M  1	For using (a) $\downarrow$
	8	

$1(2) + 2(2^2) + \dots + k2^k = (k-1)2^{k+1} + 2$   
 $n=1 \Rightarrow \text{L.H.S.} = 2, \text{R.H.S.} = 2$   
 Assume  $1(2) + 2(2^2) + \dots + k2^k = (k-1)2^{k+1} + 2$   
 $1(2) + 2(2^2) + \dots + k2^k + (k+1)2^{k+1}$   
 $= (k-1)2^{k+1} + 2 + (k+1)2^{k+1}$   
 $= k2^{k+2} + 2$

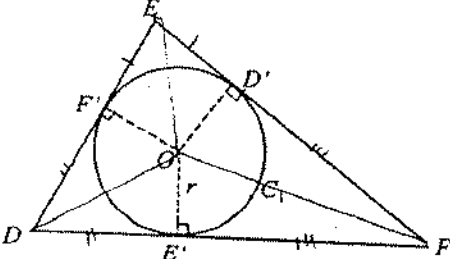
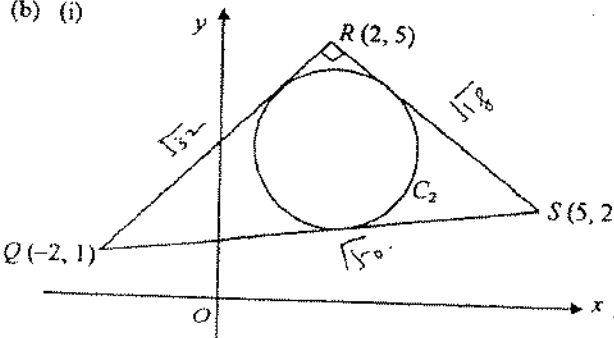


Solution	Marks	Remarks
<p><u>Alternative solution for finding <math> \overrightarrow{BA}  \overrightarrow{BE} </math></u></p> $\begin{aligned} \overrightarrow{BA} \cdot \overrightarrow{BE} &= (\overrightarrow{OA} - \overrightarrow{OB}) \cdot (\overrightarrow{OE} - \overrightarrow{OB}) \\ &= (\vec{a} - \vec{b}) \cdot \left(\frac{1}{7}\vec{a} + \frac{6}{7}\vec{b} - \vec{b}\right) \\ &= \frac{1}{7}(\vec{a} - \vec{b}) \cdot (\vec{a} - \vec{b}) \\ &= \frac{1}{7}(\vec{a} \cdot \vec{a} - 2\vec{a} \cdot \vec{b} + \vec{b} \cdot \vec{b}) \\ &= \frac{1}{7}[3^2 - 2(3) + 2^2] \\ &= 1 \\ \therefore \overrightarrow{BA} \cdot \overrightarrow{BF} &= 1 \end{aligned}$	<p>1M 1A</p>	
<p><u>Alternative solution</u></p> <p>(c) Let <math>\overrightarrow{OF} = k\overrightarrow{OE}</math>. (<math>k</math> is a real no.)</p> $\begin{aligned} \overrightarrow{BF} &= \overrightarrow{OF} - \overrightarrow{OB} = k\left(\frac{1}{7}\vec{a} + \frac{6}{7}\vec{b}\right) \\ &= k\overrightarrow{OE} - \overrightarrow{OB} \\ &= k\left(\frac{1}{7}\vec{a} + \frac{6}{7}\vec{b}\right) - \vec{b} \end{aligned}$ $\begin{aligned} \overrightarrow{BA} \cdot \overrightarrow{BF} &= (\vec{a} - \vec{b}) \cdot \left[\frac{k}{7}\vec{a} + \left(\frac{6k}{7} - 1\right)\vec{b}\right] \\ &= \frac{k}{7}\vec{a} \cdot \vec{a} + \left(\frac{6k}{7} - 1\right)\vec{a} \cdot \vec{b} - \frac{k}{7}\vec{a} \cdot \vec{b} - \left(\frac{6k}{7} - 1\right)\vec{b} \cdot \vec{b} \\ &= \frac{k}{7}(9) + \left(\frac{6k}{7} - 1\right)(3) - \frac{k}{7}(3) - \left(\frac{6k}{7} - 1\right)(4) \\ &= 1 \\ \therefore \overrightarrow{BA} \cdot \overrightarrow{BF} & \text{ is constant and the student is correct.} \end{aligned}$	<p>1A 1M 1M! 1A 1</p>	
	<p>5</p>	<p>Omit vector sign or dot product sign in most cases (pp-1)</p>

$$\begin{aligned} \overrightarrow{BA} \cdot \overrightarrow{BF} &= (\vec{a} - \vec{b}) \cdot (\overrightarrow{OF} - \overrightarrow{OB}) \\ &= (\vec{a} - \vec{b}) \cdot \overrightarrow{OF} - (\vec{a} - \vec{b}) \cdot \vec{b} \\ &= 0 - \vec{a} \cdot \vec{b} + \vec{b} \cdot \vec{b} \\ &= -3 + 2^2 \\ &= 1 \end{aligned}$$

Solution	Marks	Remarks
14. (a)		
<p>(i) <math>PB = PC = \sqrt{x^2 + 4}</math>  <math>PA = (3 - x)</math>  <math>r = PA + PB + PC</math>  <math>= 2\sqrt{x^2 + 4} + (3 - x)</math>  <math>\frac{dr}{dx} = 2\left(\frac{1}{2}\right) \frac{2x}{\sqrt{x^2 + 4}} - 1</math>  <math>= \frac{2x}{\sqrt{x^2 + 4}} - 1</math></p>	<p>1A  1</p>	
<p>(ii) (1) <math>\frac{dr}{dx} \geq 0</math>  <math>\frac{2x}{\sqrt{x^2 + 4}} - 1 \geq 0</math>  <math>2x \geq \sqrt{x^2 + 4}</math>  <math>4x^2 \geq x^2 + 4</math>  <math>x \geq \frac{2}{\sqrt{3}}</math></p>	<p>IM  1A</p>	<p>Accept <math>\frac{dr}{dx} &gt; 0</math>  Accept <math>x &gt; \frac{2}{\sqrt{3}}</math></p>
<p><math>\therefore r</math> is increasing on <math>\left[\frac{2}{\sqrt{3}}, 3\right]</math> <math>x \geq \frac{2}{\sqrt{3}}</math>  (2) <math>\frac{dr}{dx} \leq 0</math> <math>x &lt; \frac{2}{\sqrt{3}}</math>  <math>x \leq \frac{2}{\sqrt{3}}</math>  <math>\therefore r</math> is decreasing on <math>\left[0, \frac{2}{\sqrt{3}}\right]</math> <math>x \leq \frac{2}{\sqrt{3}}</math>  <math>r</math> is the least at <math>x = \frac{2}{\sqrt{3}}</math>  Least value of <math>r = 2\sqrt{\left(\frac{2}{\sqrt{3}}\right)^2 + 4} + \left(3 - \frac{2}{\sqrt{3}}\right)</math>  <math>= 2\sqrt{3} + 3</math></p>	<p>1A  IM  1A</p>	<p>Accept <math>x &lt; \frac{2}{\sqrt{3}}</math></p>

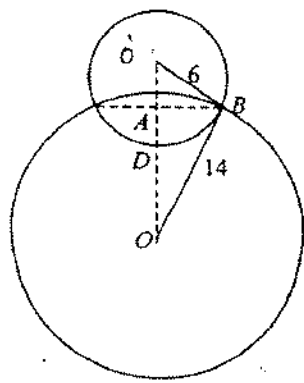
Solution	Marks	Remarks
<p><b>Alternative solution</b></p> <p>(ii) <math>\frac{dr}{dx} = \frac{2x}{\sqrt{x^2+4}} - 1 = 0</math></p> $x = \frac{2}{\sqrt{3}}$ $\frac{d^2r}{dx^2} = 2(x^2+4)^{-\frac{1}{2}} - x(x^2+4)^{-\frac{3}{2}}(2x)$ $= \frac{8}{(x^2+4)^{\frac{3}{2}}}$ $\frac{d^2r}{dx^2} \Big _{x=\frac{2}{\sqrt{3}}} = \frac{3\sqrt{3}}{8} > 0$ <p><math>\therefore r</math> attains a minimum at <math>x = \frac{2}{\sqrt{3}}</math>.</p> <p><math>r</math> is increasing on <math>x \geq \frac{2}{\sqrt{3}}</math>.</p> <p>and decreasing on <math>x \leq \frac{2}{\sqrt{3}}</math>.</p> <p>Least value of <math>r = 2\sqrt{\left(\frac{2}{\sqrt{3}}\right)^2 + 4} + \left(3 - \frac{2}{\sqrt{3}}\right)</math></p> $= 2\sqrt{3} + 3$	<p>1M</p> <p>1M</p> <p>1A</p> <p>1A</p> <p>1A</p>	<p>For checking</p> <p>Not awarded if checking was incomplete.</p>
<p>(iii) The greatest value of <math>r</math> occurs at the end-points.</p> <p>At <math>x=0</math>, <math>r = 2\sqrt{0+4} + (3-0) = 7</math></p> <p>At <math>x=3</math>, <math>r = 2\sqrt{3^2+4} + (3-3) = 2\sqrt{13}</math></p> <p><math>\therefore</math> the greatest value of <math>r</math> is <math>2\sqrt{13}</math>.</p>	<p>1M</p> <p>1A</p> <p>9</p>	<p>when <math>x = \frac{2}{\sqrt{3}}</math></p> <p><math>r_{\text{min}} = 1 + 2\sqrt{3}</math></p>
<p>(b) <math>r = 2\sqrt{x^2+4} + (1-x)</math></p> $\frac{dr}{dx} = \frac{2x}{\sqrt{x^2+4}} - 1$ <p>From (a), <math>r</math> is decreasing on <math>0 \leq x \leq 1</math>.</p> <p><math>r</math> is the least at <math>x=1</math>.</p> <p>Least value <math>= 2\sqrt{1+4} + (1-1)</math></p> $= 2\sqrt{5}$	<p>1A</p> <p>1M</p> <p>1A</p> <p>3</p>	

Solution	Marks	Remarks
<p>15. (a)</p>  <p> <math>A = \text{Area of } \triangle ODE + \text{area of } \triangle OEF + \text{area of } \triangle ODF</math> (<math>O</math> is centre of <math>C_1</math>)  <math>= \frac{1}{2}(DE)(r) + \frac{1}{2}(EF)(r) + \frac{1}{2}(DF)(r)</math>  <math>= \frac{1}{2}(DE + EF + FD)(r)</math>  <math>A = \frac{1}{2}pr</math> </p>	<p>2A 1M+1</p>	<p>1M for <math>p = DE + EF + FD</math></p>
<p><u>Alternative solution</u></p> <p> <math>A = \text{Area of } \triangle OD'E'F' + \text{area of } \triangle OE'F'D' + \text{area of } \triangle OF'DE'</math>  <math>= 2\left(\frac{1}{2}\right)(ED')(r) + 2\left(\frac{1}{2}\right)(FE')(r) + 2\left(\frac{1}{2}\right)(DF')(r)</math>  <math>= \frac{1}{2}(2ED' + 2FE' + 2DF')(r)</math>  <math>A = \frac{1}{2}pr</math> </p>	<p>2A 1M+1</p>	<p>1M for <math>p = 2(ED' + FE' + DF')</math></p>
<p>(b) (i)</p>  <p> <math>QR = \sqrt{(-2-2)^2 + (1-5)^2} = \sqrt{32}</math>  <math>RS = \sqrt{(2-5)^2 + (5-2)^2} = \sqrt{18}</math>  <math>SQ = \sqrt{(-2-5)^2 + (1-2)^2} = \sqrt{50}</math>  <math>p = \sqrt{32} + \sqrt{18} + \sqrt{50}</math>  <math>= 12\sqrt{2}</math>  <math>\text{Area of } \triangle QRS = \frac{1}{2}(QR)(RS)</math>  <math>= \frac{1}{2}(\sqrt{32})(\sqrt{18})</math>  <math>= 12</math> </p>	<p>4 1M</p>	

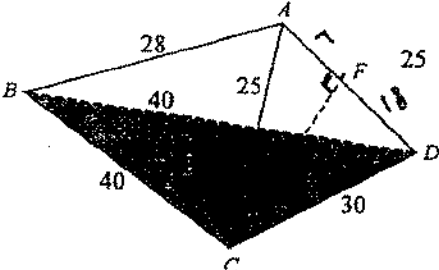
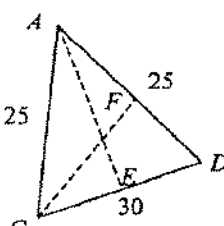
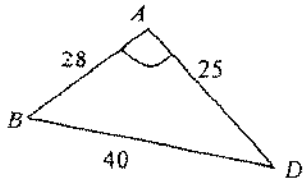
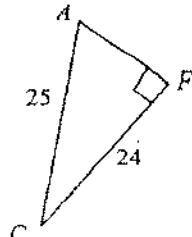
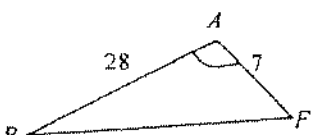
Solution	Marks	Remarks
<p><u>Alternative solution</u></p> $\text{Area of } \triangle QRS = \frac{1}{2} \begin{vmatrix} -2 & 1 \\ 5 & 2 \\ 2 & 5 \\ -2 & 1 \end{vmatrix} \times$ $= \frac{1}{2} (-4 + 25 + 2 - 5 - 4 + 10)$ $= 12$	<p>1M</p>	
<p>Using (a), <math>A = \frac{1}{2} pr</math></p> $12 = \frac{1}{2} (12\sqrt{2})r$ $r = \sqrt{2}$ <p>(ii) Let <math>(h, k)</math> be the centre of <math>C_2</math>. From (ii), slope of <math>QR = 1</math> and slope of <math>RS = -1</math>, so the angle bisector of <math>QR</math> and <math>RS</math> is a vertical line. As the centre of <math>C_2</math> lies on the angle bisector, so <math>h = 2</math>.</p> <p>Distance between R and the centre = <math>\sqrt{(\sqrt{2})^2 + (\sqrt{2})^2}</math> <math>= 2</math> 1M</p> <p><math>k = 5 - 2 = 3</math> 1M</p> <p><math>\therefore</math> the coordinates of the centre of <math>C_2</math> are <math>(2, 3)</math>. The equation of <math>C_2</math> is <math>(x-2)^2 + (y-3)^2 = 2</math>. 1A</p>	<p>1M</p> <p>1A</p> <p>1M</p> <p>1A</p>	<p>OR <math>x^2 + y^2 - 4x - 6y + 11 = 0</math></p>
<p><u>Alternative solution (1)</u></p> <p>Equation of <math>QR</math></p> $\frac{y-5}{x-2} = \frac{5-1}{2-(-2)}$ $x - y + 3 = 0$ <p>Let <math>(h, k)</math> be the centre of <math>C_2</math>.</p> $\left(\frac{h-k+3}{\sqrt{2}}\right) = \sqrt{2}$ $h - k + 1 = 0 \text{ ----- (1)}$ <p>Equation of <math>RS</math></p> $\frac{y-5}{x-2} = \frac{5-1}{2-5}$ $x + y - 7 = 0$ $-\left(\frac{h+k-7}{\sqrt{2}}\right) = \sqrt{2}$ $h + k - 5 = 0 \text{ ----- (2)}$ <p>Solve (1) and (2), <math>h = 2, k = 3</math>. <math>\therefore</math> the equation of <math>C_2</math> is <math>(x-2)^2 + (y-3)^2 = 2</math>. 1A</p>	<p>1M</p> <p>1M</p> <p>1A</p> <p>1M</p> <p>1A</p>	<p>For distance formula</p> <p>For either (1), (2) or (3)</p> <p>1M for eq<sup>n</sup> of <math>QR, RS</math> and <math>C_2</math></p> <p>1M</p> <p>For solving (1) and (2)</p>
<p>Equation of <math>QS</math>: <math>x - 7y + 9 = 0</math></p> $\left \frac{h-7k+9}{-\sqrt{50}}\right  = \sqrt{2}$ $h - 7k + 19 = 0 \text{ ----- (3)}$	<p>1A</p>	

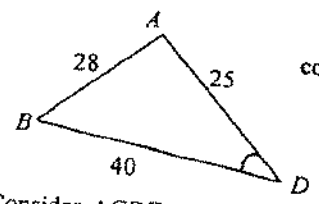
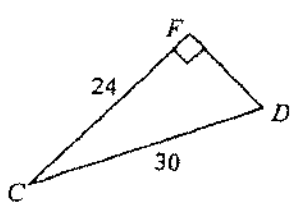
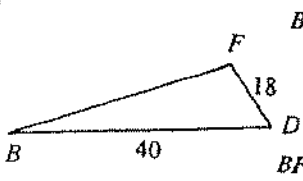
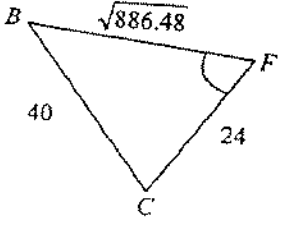
Solution	Marks	Remarks
<p><b>Alternative solution (2)</b></p> <p> <math>\frac{RT}{TQ} = \frac{\sqrt{2}}{3\sqrt{2}} = \frac{1}{3}</math>  <math>a = \frac{-2+6}{1+3} = 1, b = \frac{1+15}{1+3} = 4</math>  <math>\frac{RF}{FS} = \frac{\sqrt{2}}{2\sqrt{2}} = \frac{1}{2}</math>  <math>c = \frac{5+4}{1+2} = 3, d = \frac{2+10}{1+2} = 4</math>  <math>\frac{h+2}{2} = \frac{1+3}{2} \therefore h=2</math>  <math>\frac{k+5}{2} = \frac{4+4}{2} \therefore k=3</math>  <math>\therefore</math> the equation of <math>C_2</math> is <math>(x-2)^2 + (y-3)^2 = 2</math>.                 </p> <p style="text-align: center;"><math>x^2 + y^2 - 4x - 6y + 11 = 0</math></p>	<p>1M</p> <p>1M</p> <p>1A</p> <p>1M</p> <p>1A</p>	<p>For <math>a, b, c, d</math></p> <p>5</p> <p>3</p>

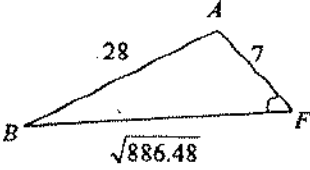


Solution	Marks	Remarks
16. (a) Volume = $\int_h^r \pi x^2 dy$ <i>correct</i> $= \pi \int_h^r (r^2 - y^2) dy$ $= \pi \left[ r^2 y - \frac{1}{3} y^3 \right]_h^r$ $= \pi \left[ r^3 - \frac{1}{3} r^3 - r^2 h + \frac{1}{3} h^3 \right]$ $= \frac{\pi}{3} (2r^3 - 3r^2 h + h^3)$	1M 1A 1A 1	For $V = \pi \int_a^b x^2 dy$ , For primitive function
(b) (i) Using the result in (a), substitute $r = 14, h = 13$ : Capacity of the pot $= \frac{4}{3} \pi (14)^3 - \frac{\pi}{3} [2(14)^3 - 3(14)^2 (13) + (13)^3]$ $= 3645 \pi$	1M 1A	
<u>Alternative solution</u> Capacity of the pot $= \frac{4}{3} \pi (14)^3 - \pi \int_{13}^{14} (196 - y^2) dy$ $= \frac{4}{3} \pi (14)^3 - \pi \left[ 196y - \frac{1}{3} y^3 \right]_{13}^{14}$ $= \frac{10976 \pi}{3} - \frac{41 \pi}{3}$ $= 3645 \pi$	1M 1A	OR $V = \pi \int_{-14}^{13} (196 - y^2) dy$ $\pi \int_0^{13} (196 - y^2) dy$ $= 1815 \frac{2}{3} \pi$ $\pi \int_{-14}^0 (196 - y^2) dy$ $= 1829 \frac{1}{3} \pi$
(ii)  Let C be the centre of the stopper. $OB = 14, BC = 6, OA = 13$ $AB = \sqrt{OB^2 - OA^2}$ $= \sqrt{14^2 - 13^2} = \sqrt{27}$ $AC = \sqrt{BC^2 - AB^2}$ $= \sqrt{6^2 - 27} = 3$ $AD = 6 - 3 = 3$	1M 1M 1A	<u>Alternative solution</u> Subs. $y = 13$ into $x^2 + y^2 = 196, x = \sqrt{27}$ Subs. $x = \sqrt{27}$ into $x^2 + y^2 = 36, y = 3$

Solution	Marks	Remarks
Capacity of the perfume bottle = Capacity of pot found in (i) – Volume of portion of the stopper lying inside the pot $= 3645\pi - \frac{\pi}{3}[2(6)^3 - 3(6)^2(3) + (3)^3]$ $= 3645\pi - 45\pi$ $= 3600\pi$	1M 1M <hr/> 1A <hr/> 8	For 2nd term

Solution	Marks	Remarks
<p>17. (a) <b>Marking Criteria:</b>                      Find <math>CF</math> 2M+1A                      Find <math>BF</math> 3M                      Find <math>\angle BFC</math> 1M+1A</p>		
		
<p>Consider <math>\triangle ACD</math>:                      Let <math>E</math> be the foot of perpendicular from <math>A</math> to <math>CD</math>.</p>  $\cos \angle ADE = \frac{DE}{AD} = \frac{15}{25} = \frac{3}{5}$ $CF = CD \sin \angle ADE$ $= 30 \left( \frac{\sqrt{5^2 - 3^2}}{5} \right) \text{ (accept round up to 24)}$ $= 24$	<p>1M 1M 1A</p>	<div style="border: 1px solid black; padding: 5px;"> <math>\angle ACD = \angle ADC = 53.13^\circ</math>  <math>\angle CAD = 73.74^\circ</math> </div>
<p><b>Alternative solution</b></p> $AE = \sqrt{25^2 - 15^2}$ $= 20$ $\frac{1}{2}(CD)(AE) = \frac{1}{2}(AD)(CF)$ $\frac{1}{2}(30)(20) = \frac{1}{2}(25)(CF)$ $CF = 24$	<p>1M 1M 1A</p>	
<p>Consider <math>\triangle ABD</math>:</p>  $\cos \angle BAD = \frac{28^2 + 25^2 - 40^2}{2(28)(25)}$ $= \frac{191}{1400}$	<p>1M</p>	<div style="border: 1px solid black; padding: 5px;"> <math>\angle BAD = 97.84^\circ</math>  <math>\angle ADB = 43.90^\circ</math>  <math>\angle ABD = 38.26^\circ</math> </div>
<p>Consider <math>\triangle ACF</math>:</p>  $AF^2 = AC^2 - CF^2$ $= 25^2 - 24^2 = 49$ $AF = 7$	<p>1M</p>	$625 - AF^2 = 30^2 - (25 - AF)^2$ $AF = 7$
<p>Consider <math>\triangle ABF</math>:</p>  $BF^2 = AB^2 + AF^2 - 2(AB)(AF) \cos \angle BAF$ $= 28^2 + 7^2 - 2(28)(7) \left( -\frac{191}{1400} \right)$ $BF = \sqrt{886.48} \approx 29.77$	<p>1M</p>	

Solution	Marks	Remarks
<p><u>Alternative solution</u> Consider <math>\triangle ABD</math> :</p>  $\cos \angle BDA = \frac{40^2 + 25^2 - 28^2}{2(40)(25)}$ $= \frac{1441}{2000}$ <p>Consider <math>\triangle CDF</math> :</p>  $DF^2 = CD^2 - CF^2$ $= 30^2 - 24^2$ $DF = 18$ <p>Consider <math>\triangle BDF</math> :</p>  $BF^2 = BD^2 + DF^2 - 2(BD)(DF) \cos \angle BDF$ $= 40^2 + 18^2 - 2(40)(18) \left( \frac{1441}{2000} \right)$ $BF = \sqrt{886.48} \approx 29.77$	<p>IM</p> <p>IM</p> <p>IM</p>	<p></p> <p></p> <p></p>
<p>Consider <math>\triangle BCF</math> :</p>  $\cos \angle BFC = \frac{BF^2 + CF^2 - BC^2}{2(BF)(CF)}$ $= \frac{886.48 + 24^2 - 40^2}{2(\sqrt{886.48})(24)}$ $= -0.096$ $\angle BFC = 96^\circ \text{ (correct to the nearest degree)}$	<p>IM</p> <p><u>1A</u> 8</p>	<p></p>

Solution	Marks	Remarks
<p>(b) Consider <math>\triangle ABF</math>:</p>  $BF^2 + FA^2 = 886.48 + 49$ $= 935.48$ $\neq AB^2$ $\therefore \angle AFB \neq 90^\circ$	<p>1M+1M+1A</p>	<p>1M for considering <math>\angle AFB</math> (OR <math>\angle BFD</math>)</p>
<p><u>Alternative solution (1)</u>  <math>\cos \angle AFB</math>  <math display="block">= \frac{7^2 + 886.48 - 28^2}{2(7)(\sqrt{886.48})}</math> <math display="block">= 0.363 \neq 0</math> <math display="block">\therefore \angle AFB \neq 90^\circ</math> <p style="text-align: center;"><math>\angle AFB = 268.72^\circ</math></p> </p>	<p>1M+1M+1A</p>	<p>1M for considering <math>\triangle AFB</math></p>
<p><u>Alternative solution (2)</u>                      From (a), <math>\cos \angle BAD = \frac{-191}{1400}</math>  <math>\angle BAD &gt; 90^\circ</math>, i.e. <math>\angle BAF &gt; 90^\circ</math>.  <math>\therefore \angle AFB &lt; 90^\circ</math></p>	<p>1M+1M+1A</p>	<p>1M for considering <math>\triangle AFB</math></p>
<p>From (a), <math>\angle BFC = 96^\circ</math>. Since <math>CF \perp AD</math> but <math>BF</math> is not perpendicular to <math>AD</math>, <math>\angle BFC</math> does not represent the angle between the two planes.                      The student is incorrect.</p>	<p>1A</p> <hr/> <p>4</p>	

Solution	Marks	Remarks
<p>18. (a) <math>z^2 = \cos 2\theta + i \sin 2\theta</math> (<math>\cos^2 \theta - \sin^2 \theta + 2i \sin \theta \cos \theta</math>)</p> <p><math>z^2 + 1 = (\cos 2\theta + 1) + i \sin 2\theta</math></p> <p><math> z^2 + 1 ^2 = (\cos 2\theta + 1)^2 + \sin^2 2\theta</math></p> <p><math>= \cos^2 2\theta + 2\cos 2\theta + 1 + \sin^2 2\theta</math></p> <p><math>= 2(1 + \cos 2\theta)</math></p> <p>Since <math>-\pi &lt; \theta \leq \pi</math>, <math>-2\pi &lt; 2\theta \leq 2\pi</math>.</p> <p><math>\cos 2\theta \leq 1</math></p> <p><math>\therefore</math> the greatest value of <math> z^2 + 1  = \sqrt{2(1+1)}</math></p> <p><math>= 2</math></p>	<p>1A</p> <p>1M</p> <p>1</p> <p>1M</p> <p>1A</p> <p>5</p>	<p><math>z^2 + 1 = (\cos^2 \theta - \sin^2 \theta) + 2i \sin \theta \cos \theta + 1 + i \sin 2\theta</math></p> <p><math>= 2(\cos^2 \theta + i \sin \theta \cos \theta + \cos \theta)</math></p> <p><math>= 2 \cos \theta (\cos \theta + i \sin \theta + 1)</math></p> <p><math> z^2 + 1  = 4 \cos^2 \theta  \cos \theta + i \sin \theta + 1 </math></p> <p><math>= 2(2 \cos^2 \theta)</math></p> <p><math>= 2(\cos 2\theta + 1)</math></p> <p><math> z^2 + 1  = 2 \cos \theta</math></p>
<p>(b) (i) <math>w = 3z</math> (OR <math>w = 3(\cos \theta + i \sin \theta)</math>)</p> <p><math> w^2 + 9  =  (3z)^2 + 9 </math></p> <p><math>= 9 z^2 + 1 </math></p> <p>From (a), <math> z^2 + 1  \leq 2</math>.</p> <p><math>\therefore</math> greatest value of <math> w^2 + 9  = 9(2)</math></p> <p><math>= 18</math></p>	<p>1A</p> <p>1M</p> <p>1</p>	<p>For using (a)</p>
<p>(ii) <math>w^4 - 81 = 100i(w^2 - 9)</math></p> <p><math>(w^2 + 9)(w^2 - 9) - 100i(w^2 - 9) = 0</math></p> <p><math>(w^2 - 9)(w^2 + 9 - 100i) = 0</math></p> <p><math>w^2 - 9 = 0</math> --- (1) or <math>w^2 + 9 - 100i = 0</math> --- (2)</p> <p>Consider (1): <math>w = \pm 3</math></p> <p>which satisfies the condition <math> w  = 3</math></p> <p>Consider (2): <math>w^2 + 9 = 100i</math></p> <p>From (i), <math> w^2 + 9  \leq 18</math> but <math> 100i  = 100</math>.</p> <p>So equation (2) has no solutions</p> <p><math>\therefore</math> the equation has only two roots.</p>	<p>1M</p> <p>1A</p> <p>1M</p> <p>1</p>	<p>For factorization</p>
<p><u>Alternative solution for explaining why (2) has no solution</u></p> <p><math>w^2 = -9 + 100i</math></p> <p>Let <math>w = a + bi</math>.</p> <p><math>(a^2 - b^2) + 2abi = -9 + 100i</math></p> <p><math>\begin{cases} a^2 - b^2 = -9 &amp; \text{--- (3)} \\ 2ab = 100 &amp; \text{--- (4)} \end{cases}</math></p> <p>Since <math> w  = 3</math>, <math>a^2 + b^2 = 9</math> --- (5)</p> <p>From (3) and (5), <math>a = 0</math>.</p> <p>Substitute <math>a = 0</math> into (4): LHS = 0 <math>\neq</math> RHS.</p> <p>So the equation has no solution.</p>	<p>1M</p> <p>1</p>	<p>For attempting to solve (3), (4), (5)</p>
	<p>7</p>	