

**只限教師參閱**

**FOR TEACHERS' USE ONLY**

**香港考試局**

**HONG KONG EXAMINATIONS AUTHORITY**

**2000年香港中學會考**

**HONG KONG CERTIFICATE OF EDUCATION EXAMINATION 2000**

**附加數學 試卷二**

**ADDITIONAL MATHEMATICS PAPER 2**

本評卷參考乃考試局專為今年本科考試而編寫，供閱卷員參考之用。閱卷員在完成閱卷工作後，若將本評卷參考提供其任教會考班的本科同事參閱，本局不表反對，但須切記，在任何情況下均不得容許本評卷參考落入學生手中。學生若索閱或求取此等文件，閱卷員/教師應嚴詞拒絕，因學生極可能將評卷參考視為標準答案，以致但知硬背死記，活剝生吞。這種落伍的學習態度，既不符現代教育原則，亦有違考試着重理解能力與運用技巧之旨。因此，本局籲請各閱卷員/教師通力合作，堅守上述原則。

This marking scheme has been prepared by the Hong Kong Examinations Authority for markers' reference. The Examinations Authority has no objection to markers sharing it, after the completion of marking, with colleagues who are teaching the subject. However, under no circumstances should it be given to students because they are likely to regard it as a set of model answers. Markers/teachers should therefore firmly resist students' requests for access to this document. Our examinations emphasise the testing of understanding, the practical application of knowledge and the use of processing skills. Hence the use of model answers, or anything else which encourages rote memorisation, should be considered outmoded and pedagogically unsound. The Examinations Authority is counting on the co-operation of markers/teachers in this regard.

考試結束後，各科評卷參考將存放於教師中心，供教師參閱。

After the examinations, marking schemes will be available for reference at the teachers' centre.

©香港考試局 保留版權  
Hong Kong Examinations Authority  
All Rights Reserved 2000



2000-CE-A MATH 2-1

**只限教師參閱**

**FOR TEACHERS' USE ONLY**



# 只限教師參閱 FOR TEACHERS' USE ONLY

## GENERAL INSTRUCTIONS TO MARKERS

1. It is very important that all markers should adhere as closely as possible to the marking scheme. In many cases, however, candidates would use alternative methods not specified in the marking scheme. Markers should be patient in marking these alternative solutions. In general, a correct alternative solution merits all the marks allocated to that part, unless a particular method is specified in the question.
2. In the marking scheme, marks are classified as follows :  

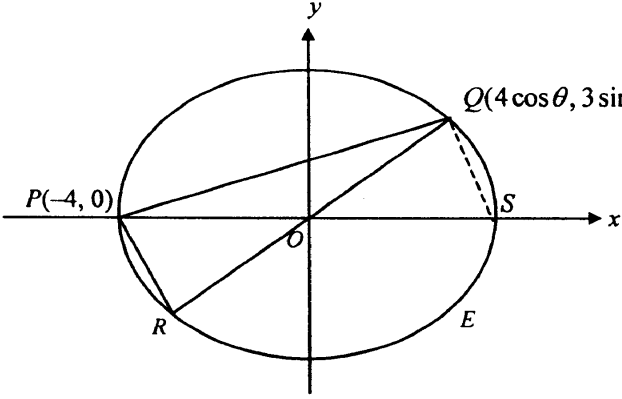
'M' marks – awarded for knowing a correct method of solution and attempting to apply it;

'A' marks – awarded for the accuracy of the answer;

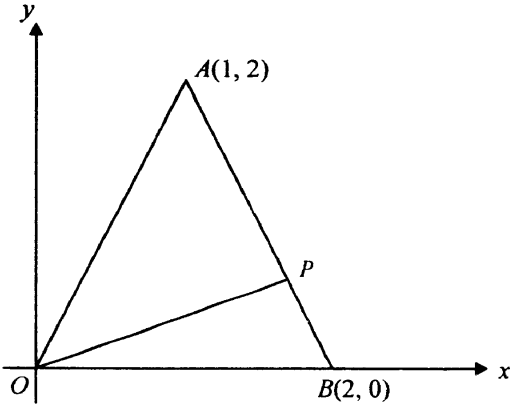
Marks without 'M' or 'A' – awarded for correctly completing a proof or arriving at an answer given in the question.
3. In marking candidates' work, the benefit of doubt should be given in the candidates' favour.
4. The symbol  $\textcircled{\text{pp-1}}$  should be used to denote marks deducted for poor presentation (p.p.). Note the following points:
  - (a) At most deduct 1 mark for p.p. in each question, up to a maximum of 3 marks for the whole paper.
  - (b) For similar p.p., deduct only 1 mark for the first time that it occurs, i.e. do not penalise candidates twice in the whole paper for the same p.p.
  - (c) In any case, do not deduct any marks for p.p. in those steps where candidates could not score any marks.
  - (d) Some cases in which marks should be deducted for p.p. are specified in the marking scheme. However, the lists are by no means exhaustive. Markers should exercise their professional judgement to give p.p.s in other situations.
5. The symbol  $\textcircled{\text{u-1}}$  should be used to denote marks deducted for wrong/no units in the final answers (if applicable).  
Note the following points:
  - (a) At most deduct 1 mark for wrong/no units for the whole paper.
  - (b) Do not deduct any marks for wrong/no units in case candidate's answer was already wrong.
6. Marks entered in the Page Total Box should be the net total score on that page.
7. In the Marking Scheme, steps which can be omitted are enclosed by dotted rectangles , whereas alternative answers are enclosed by solid rectangles .
8.
  - (a) Unless otherwise specified in the question, numerical answers not given in exact values should not be accepted.
  - (b) In case a certain degree of accuracy had been specified in the question, answers not accurate up to that degree should not be accepted. For answers with an excess degree of accuracy, deduct 1 mark for the first time if happened. In any case, do not deduct any marks for excess degree of accuracy in those steps where candidates could not score any marks.
9. Unless otherwise specified in the question, use of notations different from those in the marking scheme should not be penalised.
10. Unless the form of answer is specified in the question, alternative simplified forms of answers different from those in the marking scheme should be accepted if they were correct.

Solution	Marks	Remarks
<p>1. Let <math>u = 2x + 1</math>.  <math>du = 2dx</math>  <math>\int \sqrt{2x+1} dx</math>  <math>= \int u^{\frac{1}{2}} \left(\frac{1}{2} du\right)</math>  <math>= \frac{1}{2} \left[ \frac{2}{3} u^{\frac{3}{2}} \right] + c</math> <span style="border: 1px dashed black; padding: 2px;"><math>c</math> is a constant</span>  <math>= \frac{1}{3} (2x+1)^{\frac{3}{2}} + c</math></p>	<p>1A    1A  1A  1A</p>	<p>For a proper substitution    Omit <math>du</math> in most cases (pp-1)  Awarded even if '<math>c</math>' was omitted  Withhold this mark if '<math>c</math>' was omitted</p>
<p><u>Alternative solution (1)</u>  Let <math>u = \sqrt{2x+1}</math>.  <math>du = \frac{1}{\sqrt{2x+1}} dx</math>  <math>\int \sqrt{2x+1} dx</math>  <math>= \int u(u du)</math>  <math>= \frac{1}{3} u^3 + c</math> <span style="border: 1px dashed black; padding: 2px;"><math>c</math> is a constant</span>  <math>= \frac{1}{3} (2x+1)^{\frac{3}{2}} + c</math></p>	<p>1A   1A  1A  1A</p>	<p>       Withhold this mark if '<math>c</math>' was omitted</p>
<p><u>Alternative solution (2)</u>  <math>\int \sqrt{2x+1} dx</math>  <math>= \int \sqrt{2x+1} \left[ \frac{1}{2} d(2x+1) \right]</math>  <math>= \frac{1}{2} \left[ \frac{2}{3} (2x+1)^{\frac{3}{2}} \right] + c</math> <span style="border: 1px dashed black; padding: 2px;"><math>c</math> is a constant</span>  <math>= \frac{1}{3} (2x+1)^{\frac{3}{2}} + c</math></p>	<p>1A+1A  1A  1A</p>	<p>1A for <math>dx \rightarrow d(2x+1)</math>  (can be omitted)   (can be omitted)   Withhold this mark if '<math>c</math>' was omitted</p>
	<hr/> <p>4</p> <hr/>	

Solution	Marks	Remarks
2. $(1+2x)^7 = 1 + {}_7C_1(2x) + {}_7C_2(2x)^2 + \dots$	1A	
$= 1 + 14x + 84x^2 + \dots$	1M	For ${}_7C_1 = 7$ and ${}_7C_2 = 21$
$(2-x)^2 = 4 - 4x + x^2$	1A	
$(1+2x)^7(2-x)^2 = (1+14x+84x^2 + \dots)(4-4x+x^2)$		
$= 4 - 4x + x^2 + 14x(4) + 14x(-4x) + 84x^2(4) + \dots$	1M	
$= 4 + 52x + 281x^2 + \dots$	1A	Omit dots in all cases (pp-1)
	<u>5</u>	

Solution	Marks	Remarks
<p>3.</p> 		
<p>(a) The coordinates of <math>R</math> are <math>(-4 \cos \theta, -3 \sin \theta)</math>.</p>	1A+1A	
<p>(b) Area of <math>\triangle PQR = \frac{1}{2} \begin{vmatrix} -4 &amp; 0 \\ -4 \cos \theta &amp; -3 \sin \theta \\ 4 \cos \theta &amp; 3 \sin \theta \end{vmatrix}</math></p> $= \frac{1}{2} (12 \sin \theta - 12 \sin \theta \cos \theta + 12 \sin \theta \cos \theta + 12 \sin \theta)$ $= 12 \sin \theta$	1M  1A	Accept $-12 \sin \theta$
<p><b>Alternative solution</b></p> <p>Area of <math>\triangle PQR</math>  <math>=</math> Area of <math>\triangle OPQ</math> + Area of <math>\triangle OPR</math>  <math>= \frac{1}{2} (4) (3 \sin \theta) + \frac{1}{2} (4) (3 \sin \theta)</math>  <math>= 12 \sin \theta</math></p>	1M 1A	<p><b>OR</b></p> <p><math>=</math> area of <math>\triangle PQS</math>  <math>= \frac{1}{2} (8) (3 \sin \theta)</math></p>
<p><math>12 \sin \theta = 6</math></p> <p><math>\sin \theta = \frac{1}{2}</math></p> <p><math>\theta = \frac{\pi}{6}</math></p> <p><math>\therefore</math> the coordinates of <math>Q</math> are <math>(4 \cos \frac{\pi}{6}, 3 \sin \frac{\pi}{6})</math>,</p> <p>i.e. <math>(2\sqrt{3}, \frac{3}{2})</math>.</p>	1M          1A 6	

Solution	Marks	Remarks
4. For $n = 1$ , $LHS = 1^2 = 1$ .		
RHS = $(-1)^{1-1} \frac{1(1+1)}{2} = 1 = LHS$ .	1	
∴ the statement is true for $n = 1$ .		
Assume $1^2 - 2^2 + 3^2 - 4^2 + \dots + (-1)^{k-1} k^2 = (-1)^{k-1} \frac{k(k+1)}{2}$	1	
for some positive integer $k$ .		
Then $1^2 - 2^2 + 3^2 - 4^2 + \dots + (-1)^{k-1} k^2 + (-1)^k (k+1)^2$		
$= (-1)^{k-1} \frac{k(k+1)}{2} + (-1)^k (k+1)^2$	1	
$= (-1)^k \left[ -\frac{k(k+1)}{2} + (k+1)^2 \right]$	1M	OR $= (-1)^{k-1} \left[ \frac{k(k+1)}{2} - (k+1)^2 \right]$
$= (-1)^k \frac{(k+1)}{2} [-k + 2(k+1)]$		For $(-1)^{k-1} A + (-1)^k B$ $= (-1)^{k-1} (A - B)$
$= (-1)^k \frac{(k+1)(k+2)}{2}$	1	or $= (-1)^k (-A + B)$
The statement is also true for $n = k + 1$ if it is true for $n = k$ . By the principle of mathematical induction,		
the statement is true for all positive integers $n$ .	<u>1</u>	
	<u>6</u>	

Solution	Marks	Remarks
<p>5.</p>  <p>(a) The coordinates of <math>P</math> are <math>(\frac{2+r}{1+r}, \frac{2r}{1+r})</math>.</p> <p>(b) Slope of <math>OP = \frac{2r}{1+r} \div (\frac{2+r}{1+r})</math>  <math>= \frac{2r}{2+r}</math></p> <p>(c) <math>\tan \angle AOP = \frac{m_{OA} - m_{OP}}{1 + m_{OA}m_{OP}}</math>  <math>= \frac{2 - \frac{2r}{2+r}}{1 + 2(\frac{2r}{2+r})}</math>  <math>= \frac{2(2+r) - 2r}{2+r+4r}</math>  <math>= \frac{4}{5r+2}</math>  <math>\frac{4}{5r+2} = \tan 45^\circ</math>  <math>4 = 5r+2</math>  <math>r = \frac{2}{5}</math></p>	<p>1A+1A</p> <p>1</p> <p>1M</p> <p>1M</p> <p>1A</p>	<p>For <math>\tan \theta = \frac{m_2 - m_1}{1 + m_2m_1}</math> or <math>\frac{m_1 - m_2}{1 + m_1m_2}</math></p>
<p><b>Alternative solution (1)</b>  Let <math>\angle AOB = \theta</math>.  <math>\tan \theta = 2</math>  <math>\tan \angle POB = \frac{2r}{2+r}</math>  <math>\tan(\theta - 45^\circ) = \frac{2r}{2+r}</math>  <math>\frac{\tan \theta - \tan 45^\circ}{1 + \tan \theta \tan 45^\circ} = \frac{2r}{2+r}</math>  <math>\frac{2-1}{2+1} = \frac{2r}{2+r}</math>  <math>2+r = 6r</math>  <math>r = \frac{2}{5}</math></p>	<p>1M</p> <p>1M</p> <p>1A</p>	<p>OR <math>\tan \theta = \tan(45^\circ + \angle POB)</math>  <math>2 = \frac{\tan 45^\circ + \frac{2r}{2+r}}{1 - \tan 45^\circ(\frac{2r}{2+r})}</math></p>

Solution	Marks	Remarks
<p>Alternative solution (2)</p> <p>Area of <math>\triangle AOB = \frac{1}{2}(2)(2) = 2</math></p> <p>Area of <math>\triangle OBP = \frac{1}{2}(2)\left(\frac{2r}{2+r}\right) = \frac{2r}{2+r}</math></p> <p>Area of <math>\triangle OAP = \frac{1}{2}(OA)(OP)\sin 45^\circ</math></p> $= \frac{1}{2}(\sqrt{5})\sqrt{\frac{(2+r)^2 + (2r)^2}{(1+r)^2}} \sin 45^\circ$ $= \frac{\sqrt{10}}{4} \left( \frac{\sqrt{5r^2 + 4r + 4}}{1+r} \right)$ <p><math>\therefore \frac{\sqrt{10}}{4} \left( \frac{\sqrt{5r^2 + 4r + 4}}{1+r} \right) = 2 - \frac{2r}{1+r}</math></p> $\sqrt{5r^2 + 4r + 4} = \frac{8}{\sqrt{10}}$ $25r^2 + 20r - 12 = 0$ <p><math>r = \frac{2}{5}</math> or <math>-\frac{6}{5}</math> (rejected)</p> <p><math>\therefore r = \frac{2}{5}</math></p>	<p>1M</p> <p>1M</p> <p>1A</p>	<p>For area = <math>\frac{1}{2} ab \sin c</math></p>
	<p><u>6</u></p>	



Solution	Marks	Remarks
<p>6. (a) Slope of <math>y = -x + 1</math> is <math>-1</math>.                      At point <math>A</math>, <math>\frac{dy}{dx} = -1</math>.  <math>2x + 3 = -1</math>  <math>x = -2</math>                      Put <math>x = -2</math>, <math>y = -(-2) + 1</math>  <math>y = 3</math></p> <p><math>\therefore</math> the coordinates of <math>A</math> are <math>(-2, 3)</math>.</p> <p>(b) <math>y = \int (2x + 3) dx</math>  <math>= x^2 + 3x + c</math> <span style="border: 1px dashed black; padding: 2px;"><math>c</math> is a constant</span>                      Put <math>x = -2</math>, <math>y = 3</math> : <math>3 = (-2)^2 + 3(-2) + c</math>  <math>c = 5</math></p> <p><math>\therefore</math> the equation of the curve is <math>y = x^2 + 3x + 5</math>.</p>	<p>1M 1A 1A</p> <p>1M 1A 1M 1A</p>	<p></p> <p>Awarded even if <math>c</math> was omitted For finding <math>c</math> Withhold this mark if "y =" was omitted</p>
<p><b>Alternative solution</b></p> <p>6. <math>y = \int (2x + 3) dx</math>  <math>= x^2 + 3x + c</math> <span style="border: 1px dashed black; padding: 2px;"><math>c</math> is a constant</span></p> <p><math>\begin{cases} y = x^2 + 3x + c \\ y = -x + 1 \end{cases}</math>  <math>x^2 + 3x + c = -x + 1</math>  <math>x^2 + 4x + c - 1 = 0</math>  <math>\Delta = 16 - 4(c - 1) = 0</math>  <math>c = 5</math></p> <p><math>\therefore</math> the equation of the curve is <math>y = x^2 + 3x + 5</math>.</p> <p><math>x^2 + 4x + 5 - 1 = 0</math>  <math>x = -2</math>  <math>y = -x + 1 = 3</math></p> <p><math>\therefore</math> the coordinates of <math>A</math> are <math>(-2, 3)</math>.</p>	<p>1M 1A</p> <p>1M 1A</p> <p>1A 1A</p>	<p>Awarded even if <math>c</math> was omitted</p> <p>Withhold this mark if "y =" was omitted</p>
	<p><u>7</u></p>	

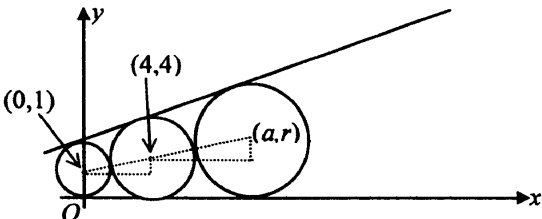
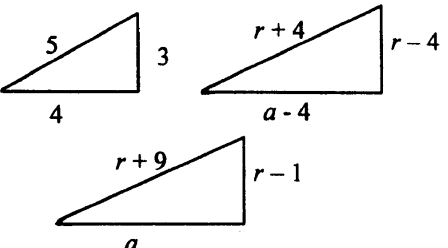
Solution	Marks	Remarks
<p>7. (a) <math>\cos x - \sqrt{3} \sin x</math>  <math>= 2\left(\frac{1}{2} \cos x - \frac{\sqrt{3}}{2} \sin x\right)</math>  <math>= 2\left(\cos \frac{\pi}{3} \cos x - \sin \frac{\pi}{3} \sin x\right)</math>  <math>= 2 \cos\left(x + \frac{\pi}{3}\right)</math> <span style="border: 1px solid black; padding: 2px;">OR = <math>2 \cos\left(x - \frac{5\pi}{3}\right)</math></span>  <math>\cos x - \sqrt{3} \sin x = 2</math>  <math>2 \cos\left(x + \frac{\pi}{3}\right) = 2</math>  <math>\cos\left(x + \frac{\pi}{3}\right) = 1</math>  <math>x + \frac{\pi}{3} = 2n\pi \pm 0</math> <span style="border: 1px dashed black; padding: 2px;"><math>n</math> is an integer</span>  <math>x = 2n\pi - \frac{\pi}{3}</math> (OR = <math>360n^\circ - 60^\circ</math>)  <math>= \frac{(6n-1)\pi}{3}</math></p>	<p>1A+1A  1M  1M  1A</p>	<div style="border: 1px solid black; padding: 5px; width: fit-content; margin-bottom: 10px;"> <math display="block">\begin{cases} r \cos \theta = 1 \\ r \sin \theta = \sqrt{3} \end{cases}</math> <math display="block">r = 2, \theta = \frac{\pi}{3}</math> </div> <p>For <math>2n\pi \pm \alpha</math>  <math>2n\pi - 60^\circ</math> etc. (<math>u-1</math>)</p>
<p><b>Alternative solution</b>  <math>\cos x - \sqrt{3} \sin x</math>  <math>= 2\left(\frac{1}{2} \cos x - \frac{\sqrt{3}}{2} \sin x\right)</math>  <math>= 2\left(\sin \frac{\pi}{6} \cos x - \cos \frac{\pi}{6} \sin x\right)</math>  <math>= 2 \sin\left(\frac{\pi}{6} - x\right)</math>  <math>\cos x - \sqrt{3} \sin x = 2</math>  <math>2 \sin\left(\frac{\pi}{6} - x\right) = 2</math>  <math>\sin\left(\frac{\pi}{6} - x\right) = 1</math>  <math>\frac{\pi}{6} - x = n\pi + (-1)^n \frac{\pi}{2}</math>  <math>x = \frac{\pi}{6} - n\pi - (-1)^n \frac{\pi}{2}</math></p>	<p>1A+1A  1M  1M  1A</p>	<p>For <math>n\pi + (-1)^n \alpha</math></p>
<p>(b) <span style="border: 1px dashed black; padding: 5px; display: inline-block;"> <math display="block">\begin{cases} y = \cos x \\ y = 2 + \sqrt{3} \sin x \end{cases}</math> <math display="block">\cos x = 2 + \sqrt{3} \sin x</math> <math display="block">\cos x - \sqrt{3} \sin x = 2</math> </span>                       From (a), <math>x = \frac{(6n-1)\pi}{3}</math>.</p>	<p>} 1M</p>	<p>For either one</p>



Solution	Marks	Remarks
8. (a) $\int \cos 3x \cos x \, dx = \int \frac{1}{2}(\cos 4x + \cos 2x) \, dx$ $= \frac{1}{8} \sin 4x + \frac{1}{4} \sin 2x + c$ [c is a constant]	1M+1A  1A	Withhold 1A for omitting c
<hr/> 3		
(b) $\frac{\sin 5x - \sin x}{\sin x} = \frac{2 \sin 2x \cos 3x}{\sin x}$ $= \frac{2(2 \sin x \cos x) \cos 3x}{\sin x}$ $= 4 \cos x \cos 3x$	1A  1	
<b>Alternative solution</b> $4 \sin x \cos x \cos 3x = 2 \sin 2x \cos 3x$ $= \sin 5x - \sin x$ $\therefore \frac{\sin 5x - \sin x}{\sin x} = 4 \cos x \cos 3x$	1A  1	QR = 2 sin x(cos 4x + cos 2x) QR = 2 cos x(sin 4x - sin 2x)
$\int \frac{\sin 5x}{\sin x} \, dx = \int (1 + 4 \cos 3x \cos x) \, dx$ $= x + 4\left(\frac{\sin 4x}{8} + \frac{\sin 2x}{4}\right) + c$ [c is a constant] $= x + \frac{1}{2} \sin 4x + \sin 2x + c$	1M  1A	
<b>Alternative solution</b> $\int \frac{\sin 5x}{\sin x} \, dx = \int \frac{\sin 3x \cos 2x + \sin 2x \cos 3x}{\sin x} \, dx$ $= \int \frac{(3 \sin x - 4 \sin^3 x) \cos 2x + 2 \sin x \cos x \cos 3x}{\sin x} \, dx$ $= \int [(3 - 4 \sin^2 x) \cos 2x + 2 \cos x \cos 3x] \, dx$ $= \int [3 \cos 2x - 2(1 - \cos 2x) \cos 2x] \, dx + 2 \int \cos x \cos 3x \, dx$ $= \int \cos 2x \, dx + \int (1 + \cos 4x) \, dx + 2 \int \cos x \cos 3x \, dx$ $= \frac{1}{2} \sin 2x + x + \frac{1}{4} \sin 4x + 2\left(\frac{1}{8} \sin 4x + \frac{1}{4} \sin 2x\right) + c$ $= x + \frac{1}{2} \sin 4x + \sin 2x + c$	1M  1A	
<hr/> 4		

Solution	Marks	Remarks
<p>(c) Put <math>x = \frac{\pi}{2} - \theta</math>:</p> $\int_{\frac{\pi}{6}}^{\frac{\pi}{4}} \frac{\sin 5x}{\sin x} dx = \int_{\frac{\pi}{3}}^{\frac{\pi}{4}} \frac{\sin 5(\frac{\pi}{2} - \theta)}{\sin(\frac{\pi}{2} - \theta)} (-d\theta)$ $= \int_{\frac{\pi}{4}}^{\frac{\pi}{3}} \frac{\cos 5\theta}{\cos \theta} d\theta$ $= \int_{\frac{\pi}{4}}^{\frac{\pi}{3}} \frac{\cos 5x}{\cos x} dx$	<p>1A</p> <p>1A+1A</p> <p>1</p> <p>4</p>	<p>1A for integrand, 1A for limit</p>
<p>(d) Area of shaded region</p> $= \int_{\frac{\pi}{4}}^{\frac{\pi}{3}} \left( \frac{\cos 5x}{\cos x} - \frac{\sin 5x}{\sin x} \right) dx$ $= \int_{\frac{\pi}{4}}^{\frac{\pi}{3}} \frac{\cos 5x}{\cos x} dx - \int_{\frac{\pi}{4}}^{\frac{\pi}{3}} \frac{\sin 5x}{\sin x} dx$ $= \int_{\frac{\pi}{4}}^{\frac{\pi}{3}} \frac{\sin 5x}{\sin x} dx - \int_{\frac{\pi}{4}}^{\frac{\pi}{3}} \frac{\sin 5x}{\sin x} dx \quad (\text{using (c)})$ $= \left[ x + \frac{1}{2} \sin 4x + \sin 2x \right]_{\frac{\pi}{6}}^{\frac{\pi}{4}} - \left[ x + \frac{1}{2} \sin 4x + \sin 2x \right]_{\frac{\pi}{3}}^{\frac{\pi}{4}}$ $= \left( \frac{\pi}{4} + 1 \right) - \left( \frac{\pi}{6} + \frac{\sqrt{3}}{4} + \frac{\sqrt{3}}{2} \right) - \left[ \left( \frac{\pi}{3} - \frac{\sqrt{3}}{4} + \frac{\sqrt{3}}{2} \right) - \left( \frac{\pi}{4} + 1 \right) \right]$ $= 2 - \sqrt{3}$	<p>1M+1A</p> <p>1A</p> <p>1M</p> <p>1A</p>	<p>1M for <math>A = \int_a^b (y_2 - y_1) dx</math></p> <p>For 1st term</p> <p>For using (b)</p>
<p><b>Alternative solution</b></p> <p>Area of shaded region</p> $= \int_{\frac{\pi}{4}}^{\frac{\pi}{3}} \left( \frac{\cos 5x}{\cos x} - \frac{\sin 5x}{\sin x} \right) dx$ $= \int_{\frac{\pi}{4}}^{\frac{\pi}{3}} \frac{\cos 5x \sin x - \sin 5x \cos x}{\cos x \sin x} dx$ $= \int_{\frac{\pi}{4}}^{\frac{\pi}{3}} \frac{-\sin 4x}{\sin x \cos x} dx$ $= \int_{\frac{\pi}{4}}^{\frac{\pi}{3}} \frac{-2(2 \sin x \cos x) \cos 2x}{\sin x \cos x} dx$ $= \int_{\frac{\pi}{4}}^{\frac{\pi}{3}} -4 \cos 2x dx$ $= [-2 \sin 2x]_{\frac{\pi}{4}}^{\frac{\pi}{3}}$ $= 2 - \sqrt{3}$	<p>1M+1A</p> <p>1A</p> <p>1M</p> <p>1A</p>	<p>Same as above</p>
	<p>5</p>	

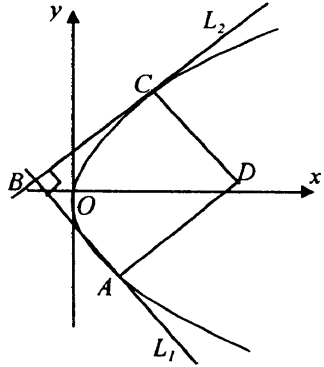
Solution	Marks	Remarks
9. (a) (i) Put $k = -1$ into $F$ , the equation becomes $x^2 + y^2 + (-4+4)x + (-3+1)y - (-8+8) = 0$ i.e. $x^2 + y^2 - 2y = 0$ . $\therefore C_1$ is a circle in $F$ .	} 1A+1	1A for $k = -1$
<b>Alternative solution</b> Comparing coefficients of $F$ and $C_1$ . $\begin{cases} 4k+4=0 \\ 3k+1=-2 \\ 8k+8=0 \end{cases}$ $k = -1$ satisfies the above 3 equations. $\therefore C_1$ is a circle in $F$ .	1A  1	
(ii) Put $y = 0$ into $x^2 + y^2 - 2y = 0$ : $x^2 = 0$ $x = 0$ i.e. there is only one intersection point with the $x$ -axis. $\therefore C_1$ touches the $x$ -axis.	1M  1	
<b>Alternative solution</b> Centre of $C_1 = (0, 1)$ . radius of $C_1 = 1$ Since the $y$ -coordinate of centre is equal to the radius, $C_1$ touches the $x$ -axis.	} 1A  1	
<hr style="width: 100px; margin: auto;"/>		
4		
(b) (i) Put $y = 0$ in $F$ : $x^2 + (4k+4)x - (8k+8) = 0$ Since the circle touches the $x$ -axis, $(4k+4)^2 + 4(8k+8) = 0$ $16k^2 + 64k + 48 = 0$ $16(k+1)(k+3) = 0$ $k = -1$ (rejected) or $k = -3$ , $\therefore$ The equation of $C_2$ is $x^2 + y^2 + [4(-3)+4]x + [3(-3)+1]y - [(-3) \times 8 + 8] = 0$ $x^2 + y^2 - 8x - 8y + 16 = 0$	1M  1M  1A  1A	For putting $y = 0$  For $\Delta = 0$   OR $(x-4)^2 + (y-4)^2 = 16$

Solution	Marks	Remarks
<p><b>Alternative solution</b>  <math>x^2 + y^2 + (4k+4)x + (3k+1)y - (8k+8) = 0</math>  <math>[x + (2k+2)]^2 + [y + (\frac{3k+1}{2})]^2 = (2k+2)^2 + (\frac{3k+1}{2})^2 - (8k+8)</math>  <math>= \frac{25k^2 + 70k + 49}{4}</math></p> <p>If <math>C_2</math> touches the x-axis,  <math> -(\frac{3k+1}{2})  = \sqrt{\frac{25k^2 + 70k + 49}{4}}</math>  <math>9k^2 + 6k + 1 = 25k^2 + 70k + 49</math>  <math>16k^2 + 64k + 48 = 0</math>  <math>k = -1</math> (rejected) or <math>k = -3</math>  <math>\therefore</math> The equation of <math>C_2</math> is <math>x^2 + y^2 - 8x - 8y + 16 = 0</math>.</p>	<p>1M</p> <p>1M</p> <p>1A</p> <p>1A</p>	<p>For finding centre and radius of <math>F</math></p> <p>For equating radius = y coord. of centre Accept omitting absolute sign</p>
<p>(ii) Centre of <math>C_1 = (0, 1)</math>, radius = 1.                  Centre of <math>C_2 = (4, 4)</math>, radius = 4.                  Distance between centres = <math>\sqrt{(4-0)^2 + (4-1)^2}</math>  <math>= 5</math>  <math>=</math> sum of radii of <math>C_1</math> and <math>C_2</math>  <math>\therefore C_1</math> and <math>C_2</math> touch externally.</p>	<p>1M</p> <p>1M</p> <p>1</p> <hr/> <p>7</p>	
<p>(c) Let radius of <math>C_3</math> be <math>r</math> and coordinates of its centre be <math>(a, r)</math>.</p>  <p>By similar triangles,  <math>\frac{r+4}{1+4} = \frac{r-4}{4-1}</math>  <math>3r+12 = 5r-20</math>  <math>r = 16</math>  <math>\frac{a-4}{4-0} = \frac{r+4}{4+1}</math>  <math>= \frac{16+4}{4+1}</math>  <math>a = 20</math>  <math>\therefore</math> the equation of <math>C_3</math> is <math>(x-20)^2 + (y-16)^2 = 256</math>.</p> <div style="border: 1px solid black; padding: 5px; display: inline-block;"> <p>OR <math>x^2 + y^2 - 40x - 32y + 400 = 0</math></p> </div>	<p>1M</p> <p>1M</p> <p>1A</p> <p>1A</p>	<p>For y-coord = radius</p>  <p>Awarded if either one was correct</p>

Solution	Marks	Remarks
<p><b>Alternative solution (1)</b>                      Equation of line through centres of <math>C_1</math>, <math>C_2</math> and <math>C_3</math>  <math display="block">\frac{y-1}{x-0} = \frac{4-1}{4-0}</math>  <math display="block">y = \frac{3}{4}x + 1</math>                      Let coordinates of centre of <math>C_3</math> be <math>(a, \frac{3}{4}a + 1)</math>,  <math display="block">\text{radius of } C_3 = \frac{3}{4}a + 1.</math>                      Distance between centres of <math>C_2</math> and <math>C_3</math> = sum of radii  <math display="block">\sqrt{(a-4)^2 + (\frac{3}{4}a + 1 - 4)^2} = \frac{3}{4}a + 1 + 4</math>  <math display="block">a^2 - 8a + 16 + \frac{9}{16}a^2 - \frac{9}{2}a + 9 = \frac{9}{16}a^2 + \frac{15}{2}a + 25</math>  <math display="block">a^2 - 20a = 0</math>  <math display="block">a = 0 \text{ (rejected) or } a = 20</math>  <math>\therefore</math> centre of <math>C_3</math> = (20, 16) and radius = 16.  <math>\therefore</math> the equation of <math>C_3</math> is <math>(x-20)^2 + (y-16)^2 = 256</math>.</p>	<p>1M  1M  1M  1A  1A</p>	<p>For y-coord. = radius  <math display="block">\sqrt{(\frac{4r-4}{3}-4)^2 + (r-4)^2} = r+4</math>  <math display="block">\vdots</math>  <math display="block">r^2 - 17r + 16 = 0</math>  <math display="block">r = 16</math></p>
<p><b>Alternative solution (2)</b>                      Equation of line through centres of <math>C_1</math>, <math>C_2</math> and <math>C_3</math>  <math display="block">y = \frac{3}{4}x + 1</math>  <math display="block">r = \frac{3}{4}a + 1 \quad \text{----- (1)}</math>                      Using Pythagoras' Theorem,  <math display="block">(a-4)^2 + (r-4)^2 = (r+4)^2</math>  <math display="block">a^2 - 8a + 16 = 16r \quad \text{----- (2)}</math>                      Substitute (1) into (2):  <math display="block">a^2 - 8a + 16 = 16(\frac{3}{4}a + 1)</math>  <math display="block">a^2 - 20a = 0</math>  <math display="block">a = 0 \text{ (rejected) or } a = 20</math>  <math>\therefore</math> The equation of <math>C_3</math> is <math>(x-20)^2 + (y-16)^2 = 256</math>.</p>	<p>1M  1M  1M  1A  1A</p>	<p>Same as above                       OR <math display="block">a^2 + (r-1)^2 = (r+9)^2</math>  <math display="block">a^2 = 20r + 80</math>  <math display="block">a^2 = 20(\frac{3}{4}a + 1) + 80</math>  <math display="block">a^2 - 15a - 100 = 0</math>  <math display="block">a = 20 \text{ or } -5 \text{ (rejected)}</math></p>
<p>5</p>		

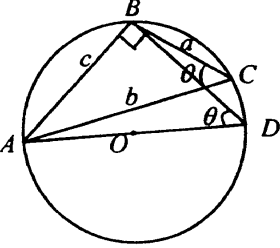
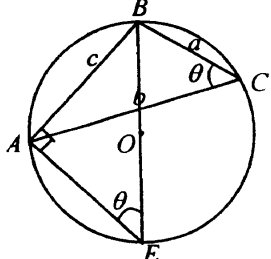
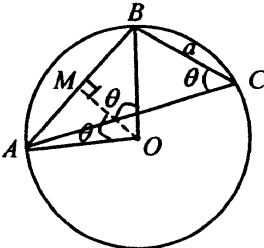


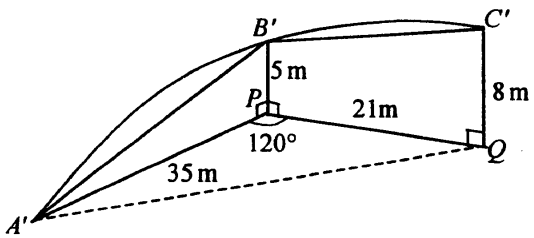


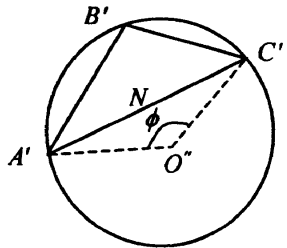
Solution	Marks	Remarks
<p>(b) (i) (Slope of <math>L_1</math>) (Slope of <math>L_2</math>) = -1</p> $\left(\frac{1}{t_1}\right)\left(\frac{1}{t_2}\right) = -1$ $t_1 t_2 = -1$ <p>(ii) Since <math>ABCD</math> is a rectangle, mid-point of <math>BD</math> coincides with mid-point of <math>AC</math>, i.e. point <math>M</math>.</p> $\frac{x+t_1 t_2}{2} = \frac{t_1^2+t_2^2}{2}$ $x = t_1^2+t_2^2-t_1 t_2$ $= t_1^2+t_2^2+1 \quad \boxed{\because t_1 t_2 = -1}$ <p>Since <math>BD</math> is parallel to the <math>x</math>-axis, the <math>y</math>-coordinate of <math>D = y</math>-coordinate of <math>B = t_1+t_2</math>.</p> <p><math>\therefore</math> the coordinates of <math>D</math> are <math>(t_1^2+t_2^2+1, t_1+t_2)</math>.</p>	<p>1A</p> <p>1A</p> <p>1M</p> <p>1</p> <p>1</p>	 <div style="border: 1px solid black; padding: 5px; width: fit-content; margin-top: 10px;"> <p>OR <math>\frac{y+t_1+t_2}{2} = t_1+t_2</math></p> <p><math>y = t_1+t_2</math></p> </div>
<p><b>Alternative solution</b></p> <p>Equation of <math>AD</math> is</p> $\frac{y-2t_1}{x-t_1^2} = -t_1$ $t_1 x + y = 2t_1 + t_1^3$ <p>Similarly, equation of <math>CD</math> is <math>t_2 x + y = 2t_2 + t_2^3</math>.</p> $\begin{cases} t_1 x + y = 2t_1 + t_1^3 & \text{---(3)} \\ t_2 x + y = 2t_2 + t_2^3 & \text{---(4)} \end{cases}$ <p>(3)-(4) : <math>(t_1-t_2)x = 2(t_1-t_2) + (t_1^3-t_2^3)</math></p> $x = 2 + (t_1^2+t_1 t_2+t_2^2)$ $= 2+t_1^2+t_2^2-1$ $= t_1^2+t_2^2+1$ $y = -t_1(t_1^2+t_2^2+1) + 2t_1+t_1^3$ $= -t_1 t_2^2+t_1$ $= t_1+t_2$ <p><math>\therefore</math> the coordinates of <math>D</math> are <math>(t_1^2+t_2^2+1, t_1+t_2)</math>.</p>	<p>1M</p> <p>1</p> <p>1</p>	
<p>(iii) Let <math>(x, y)</math> be the coordinates of <math>D</math>.</p> $\begin{cases} x = t_1^2+t_2^2+1 \\ y = t_1+t_2 \end{cases}$ $x = (t_1+t_2)^2 - 2t_1 t_2 + 1$ $= y^2 - 2(-1) + 1$ $x = y^2 + 3$ <p><math>\therefore</math> the equation of the locus is <math>x - y^2 - 3 = 0</math>.</p>	<p>1A</p> <p>1M+1M</p> <p>1A</p> <p>9</p>	<p>1M for using <math>t_1^2+t_2^2 = (t_1+t_2)^2 - 2t_1 t_2</math></p> <p>1M for eliminating <math>t_1, t_2</math></p> <p>Accept equivalent forms</p>

Solution	Marks	Remarks
11. (a) Volume = $\int_{-h}^0 \pi x^2 dy$ $= \int_{-h}^0 \pi(r^2 - y^2) dy$ $= \pi[r^2 y - \frac{1}{3} y^3]_{-h}^0$ $= \pi(r^2 h - \frac{1}{3} h^3)$ <span style="border: 1px dashed black; padding: 2px;">cubic units</span>	1M  1A  1A  1 <hr/> 4	1M for $\pi \int_a^b x^2 dy$  For $[r^2 y - \frac{1}{3} y^3]$
(b) Put $h=1, r = \sqrt{\frac{89}{3}}$ : Using (a), capacity of the mould = $\pi [\frac{89}{3}(1) - \frac{1}{3}(1)^3]$ $= \frac{88\pi}{3}$ <span style="border: 1px dashed black; padding: 2px;">cubic units</span>	1A  1 <hr/> 2	Accept omitting either one OR = $\pi \int_{-1}^0 (\frac{89}{3} - y^2) dy$
(c) (i) (1) Distance = $4 \sin \theta$ . (2) Put $r = 4, h = 4 \sin \theta$ . Using (a), amount of gold poured into the pot $= \pi[4^2(4 \sin \theta) - \frac{1}{3}(4 \sin \theta)^3]$ $= \pi(64 \sin \theta - \frac{64}{3} \sin^3 \theta)$	1A  1M  1A	
<div style="border: 1px solid black; padding: 5px;"> <p><b>Alternative solution</b></p> <p>Amount of gold</p> <math>= \frac{2}{3} \pi(4)^3 - \int_{-4}^{-4 \sin \theta} \pi(16 - y^2) dy</math>  <math>= \frac{128\pi}{3} - \pi[-64 \sin \theta + \frac{64}{3} \sin^3 \theta + 64 - \frac{64}{3}]</math>  <math>= \pi(64 \sin \theta - \frac{64}{3} \sin^3 \theta)</math> </div>	1M  1A	OR = $\int_{-4 \sin \theta}^0 \pi(16 - y^2) dy$

Solution	Marks	Remarks
<p>(ii) When the mould is completely filled,</p> $\pi(64 \sin \theta - \frac{64}{3} \sin^3 \theta) = \frac{88\pi}{3}$ $64 \sin^3 \theta - 192 \sin \theta + 88 = 0$ $8 \sin^3 \theta - 24 \sin \theta + 11 = 0 \text{ ----- (*)}$ <div style="border: 1px dashed black; padding: 5px; width: fit-content;"> <p>Put <math>\sin \theta = \frac{1}{2}</math>:</p> <math display="block">8 \sin^3 \theta - 24 \sin \theta + 11 = 0.</math> <p><math>\therefore \sin \theta = \frac{1}{2}</math> is a root of (*)</p> </div> $(2 \sin \theta - 1)(4 \sin^2 \theta + 2 \sin \theta - 11) = 0$ $\sin \theta = \frac{1}{2} \text{ or } \sin \theta = \frac{-2 \pm \sqrt{180}}{8} \text{ (rejected)}$ $\therefore \sin \theta = \frac{1}{2}$ $\theta = \frac{\pi}{6}$	<p>1M</p> <p>1</p> <p>1A</p> <p>1M+1A</p> <p>1A</p> <p><u>1A</u></p> <p><u>10</u></p>	<p>(can be omitted)</p> <p>1M for <math>(2 \sin \theta - 1)(a \sin^2 \theta + b \sin \theta + c) = 0</math></p> <p>Accept degrees</p>

Solution	Marks	Remarks
<p>12. (a)</p>  <p>(i) <math>\cos \theta = \frac{a^2 + b^2 - c^2}{2ab}</math></p> <p>(ii) Consider <math>\triangle ABD</math> :</p> <p><math>AD = 2r</math>  <math>\angle BDA = \angle BCA = \theta</math>  <math>\angle ABD = 90^\circ</math></p> <p><math>\therefore \sin \theta = \frac{c}{2r}</math></p> <p><math>r = \frac{c}{2 \sin \theta}</math></p>	<p>1A</p> <p>1A</p> <p>1A</p> <p>1</p>	 <div style="border: 1px solid black; padding: 5px; width: fit-content;"> <p>OR Consider <math>\triangle ABE</math>  <math>BE = 2r</math>  <math>\angle BEA = \theta</math>  <math>\angle BAE = 90^\circ</math></p> </div>
<p><b>Alternative solution (1)</b>                  Using the theorem</p> $\frac{a}{\sin A} = \frac{b}{\sin B} = \frac{c}{\sin C} = 2r,$ $\frac{c}{\sin \theta} = 2r$ $r = \frac{c}{2 \sin \theta}$	<p>2A</p> <p>1</p>	<p>For either one</p>
<p><b>Alternative solution (2)</b></p>  <p><math>\angle AOB = 2\angle ACB</math>  <math>= 2\theta</math></p> <p>Consider <math>\triangle AOM</math> (<math>M</math> is the mid-point of <math>AB</math>) :</p> $\sin \theta = \frac{AM}{AO}$ $\sin \theta = \frac{\frac{1}{2}c}{r}$ $r = \frac{c}{2 \sin \theta}$	<p>1A</p> <p>1A</p> <p>1</p>	

Solution	Marks	Remarks
<p>(iii) <math>\sin^2\theta + \cos^2\theta = 1</math></p> $\left(\frac{c}{2r}\right)^2 + \left(\frac{a^2 + b^2 - c^2}{2ab}\right)^2 = 1$ $\frac{c^2}{4r^2} = 1 - \frac{(a^2 + b^2 - c^2)^2}{4a^2b^2}$ $r^2 = \frac{a^2b^2c^2}{4a^2b^2 - (a^2 + b^2 - c^2)^2}$ $r = \frac{abc}{\sqrt{4a^2b^2 - (a^2 + b^2 - c^2)^2}}$	<p>1M+1A</p> <p>1</p>	
<p><b>Alternative solution</b></p> $\sin^2\theta = 1 - \cos^2\theta$ $= 1 - \left(\frac{a^2 + b^2 - c^2}{2ab}\right)^2$ $= \frac{4a^2b^2 - (a^2 + b^2 - c^2)^2}{4a^2b^2}$ $\sin\theta = \frac{\sqrt{4a^2b^2 - (a^2 + b^2 - c^2)^2}}{2ab}$ $\therefore r = \frac{c}{2\sin\theta}$ $= \frac{c}{2(\sqrt{4a^2b^2 - (a^2 + b^2 - c^2)^2} / 2ab)}$ $= \frac{abc}{\sqrt{4a^2b^2 - (a^2 + b^2 - c^2)^2}}$	<p>1M+1A</p> <p>1</p>	
	<p><u>7</u></p>	
<p>(b)</p>  <p>(i) Consider <math>\Delta A'B'C'</math>: <math>A'B' = \sqrt{(A'P)^2 + (PB')^2}</math></p> $= \sqrt{35^2 + 5^2}$ $= \sqrt{1250} \quad (\approx 35.36)$ $B'C' = \sqrt{(PQ)^2 + (QC' - PB')^2}$ $= \sqrt{21^2 + (8 - 5)^2}$ $= \sqrt{450} \quad (\approx 21.21)$	<p>1A</p> <p>1A</p>	

Solution	Marks	Remarks
$(A'Q)^2 = (A'P)^2 + (PQ)^2 - 2(A'P)(PQ)^2 \cos \angle A'PQ$ $= 35^2 + 21^2 - 2(35)(21) \cos 120^\circ$ $= 2401$ $A'C' = \sqrt{(A'Q)^2 + (QC')^2}$ $= \sqrt{2401 + 8^2}$ $= \sqrt{2465} \quad (\approx 49.65)$	1M	
<p>Using (a) (iii), put <math>a = \sqrt{450}</math>, <math>b = \sqrt{2465}</math>, <math>c = \sqrt{1250}</math>:</p> $r = \frac{\sqrt{1250} \sqrt{450} \sqrt{2465}}{\sqrt{4(450)(2465) - (450 + 2465 - 1250)^2}}$ <div style="border: 1px dashed black; padding: 2px; display: inline-block;"> <math>= 28.86</math> </div> <p><math>= 29</math> m (correct to 2 sig. figures)</p> <p><math>\therefore</math> the radius of arc <math>A'B'C'</math> is 29 m.</p>	1M  1A	Accept other combinations  Omit/wrong unit ( $u - 1$ )
<p>(ii)</p> 		
<p>Let <math>O'</math> be the centre of the circle passing through <math>A'</math>, <math>B'</math> and <math>C'</math>,</p> <p><math>\phi</math> be the angle subtended by arc <math>A'B'C'</math> at <math>O'</math>.</p> $\cos \angle A'B'C' = \frac{1250 + 450 - 2465}{2\sqrt{1250} \sqrt{450}}$ $= -0.51$	1M	<p>OR</p> $\frac{A'C'}{\sin \angle A'B'C'} = 2r$ $\sin \angle A'B'C' = \frac{\sqrt{2465}}{2(28.86)} \quad \text{----- 1M}$ $= 0.8602$
<p><math>\angle A'B'C' = 2.106</math> <span style="border: 1px solid black; padding: 2px;">QR 120.66°</span></p> <p><math>\phi = 2\pi - 2(\angle A'B'C')</math></p> $= 2\pi - 2(2.106)$ $= 2.07$ <span style="border: 1px solid black; padding: 2px;">QR 118.67°</span>	1M	

