

只限教師參閱

FOR TEACHERS' USE ONLY

香港考試局

HONG KONG EXAMINATIONS AUTHORITY

一九九八年香港中學會考

HONG KONG CERTIFICATE OF EDUCATION EXAMINATION, 1998

附加數學 試卷二

ADDITIONAL MATHEMATICS PAPER II

本評卷參考乃考試局專為今年本科考試而編寫，供閱卷員參考之用。閱卷員在完成閱卷工作後，若將本評卷參考提供其任教會考班的本科同事參閱，本局不表反對，但須切記，在任何情況下均不得容許本評卷參考落入學生手中。學生若索閱或求取此等文件，閱卷員/教師應嚴詞拒絕，因學生極可能將評卷參考視為標準答案，以致但知硬背死記，活剝生吞。這種落伍的學習態度，既不符現代教育原則，亦有違考試着重理解能力與運用技巧之旨。因此，本局籲請各閱卷員/教師通力合作，堅守上述原則。

This marking scheme has been prepared by the Hong Kong Examinations Authority for markers' reference. The Examinations Authority has no objection to markers sharing it, after the completion of marking, with colleagues who are teaching the subject. However, under no circumstances should it be given to students because they are likely to regard it as a set of model answers. Markers/teachers should therefore firmly resist students' requests for access to this document. Our examinations emphasise the testing of understanding, the practical application of knowledge and the use of processing skills. Hence the use of model answers, or anything else which encourages rote memorisation, should be considered outmoded and pedagogically unsound. The Examinations Authority is counting on the co-operation of markers/teachers in this regard.

考試結束後，各科評卷參考將存放於教師中心，供教師參閱。

After the examinations, marking schemes will be available for reference at the Teachers' Centres.

© 香港考試局 保留版權
Hong Kong Examinations Authority
All Rights Reserved 1998



98-CE-A MATHS II-1

只限教師參閱



FOR TEACHERS' USE ONLY

GENERAL INSTRUCTIONS TO MARKERS

1. It is very important that all markers should adhere as closely as possible to the marking scheme. In many cases, however, candidates would use alternative methods not specified in the marking scheme. Markers should be patient in marking these alternative solutions. In general, a correct alternative solution merits all the marks allocated to that part, unless a particular method is specified in the question.
2. In the marking scheme, marks are classified as follows :

'M' marks – awarded for knowing a correct method of solution and attempting to apply it;

'A' marks – awarded for the accuracy of the answer;

Marks without 'M' or 'A' – awarded for correctly completing a proof or arriving at an answer given in the question.
3. In marking candidates' work, the benefit of doubt should be given in the candidates' favour.
4. The symbol $\textcircled{\text{pp-1}}$ should be used to denote marks deducted for poor presentation (p.p.). Note the following points:
 - (a) At most deduct 1 mark for p.p. in each question, up to a maximum of 3 marks for the whole paper.
 - (b) For similar p.p., deduct only 1 mark for the first time that it occurs, i.e. do not penalise candidates twice in the whole paper for the same p.p.
 - (c) In any case, do not deduct any marks for p.p. in those steps where candidates could not score any marks.
 - (d) Some cases in which marks should be deducted for p.p. are specified in the marking scheme. However, the lists are by no means exhaustive. Markers should exercise their professional judgement to give p.p.s in other situations.
5. The symbol $\textcircled{\text{u-1}}$ should be used to denote marks deducted for wrong/no units in the final answers (if applicable). Note the following points:
 - (a) At most deduct 1 mark for wrong/no units for the whole paper.
 - (b) Do not deduct any marks for wrong/no units in case candidate's answer was already wrong.
6. Marks entered in the Page Total Box should be the net total score on that page.
7. In the Marking Scheme, steps which can be omitted are enclosed by dotted rectangles  , whereas alternative answers are enclosed by solid rectangles  .
8. Unless otherwise specified in the question, numerical answers not given in exact values should not be accepted.
9. Unless otherwise specified in the question, use of notations different from those in the marking scheme should not be penalised.
10. Unless the form of answer is specified in the question, alternative simplified forms of answers different from those in the marking scheme should be accepted if they were correct.

Solution	Marks	Remarks
<p>1. General term = ${}_6C_r (x)^{6-r} \left(\frac{-2}{x}\right)^r$ $= {}_6C_r (-2)^r x^{6-2r}$ $6 - 2r = 2$ $r = 2$ \therefore coefficient of $x^2 = {}_6C_2 (-2)^2$ $= 60$</p>	<p>2A 1M 1A</p>	
<p>Alternative solution</p> $\left(x - \frac{2}{x}\right)^6 = \boxed{x^6 + {}_6C_1 x^5 \left(-\frac{2}{x}\right) + {}_6C_2 x^4 \left(-\frac{2}{x}\right)^2 + \dots}$ <p>Coefficient of $x^2 = {}_6C_2 (-2)^2$ $= 60$</p>	<p>1A 1A 1M 1A</p>	<p>For ${}_6C_2 x^4 \left(-\frac{2}{x}\right)^2$ For other terms (can be omitted) Omit dots (pp-1) For choosing the correct term</p>
<hr/> <p>4</p> <hr/>		
<p>2. (a) The centre is (2, -5).</p> $\text{Distance} = \frac{ 2 - 7(-5) + 3 }{\sqrt{1^2 + (-7)^2}}$ $= 4\sqrt{2}$ <p>(b) If L is a tangent to C, $4\sqrt{2} = \sqrt{a}$ $a = 32$.</p>	<p>1M 1A 1M 1A</p>	<p>Accept omitting absolute sign Accept equivalent forms</p>
<p>Alternative solution Substitute $x = 7y - 3$ into C. $(7y - 3 - 2)^2 + (y + 5)^2 = a$ $50y^2 - 60y + (50 - a) = 0$ $\Delta = (-60)^2 - 4(50)(50 - a) = 0$ $a = 32$.</p>	<p>1M 1A</p>	<p>OR $50x^2 - 120x + (1640 - 49a) = 0$ $\Delta = (-120)^2 - 4(50)(1640 - 49a) = 0$</p>
<hr/> <p>4</p> <hr/>		

Solution	Marks	Remarks
<p>3. For $n=1$, LHS = $1 \times 2 = 2$.</p> <p style="padding-left: 40px;">RHS = $2^1 \times 1 = 2 =$ LHS.</p> <p>\therefore the statement is true for $n=1$.</p> <p>Assume $1 \times 2 + 2 \times 3 + 2^2 \times 4 + \dots + 2^{k-1}(k+1) = 2^k(k)$</p> <div style="border: 1px dashed black; padding: 5px; width: fit-content; margin-left: 100px;">for some +ve integer k.</div> <p>Then $1 \times 2 + 2 \times 3 + 2^2 \times 4 + \dots + 2^{k-1}(k+1) + 2^k(k+2)$</p> <p style="padding-left: 40px;">$= 2^k(k) + 2^k(k+2)$</p> <p style="padding-left: 40px;">$= 2^k(k+k+2)$</p> <p style="padding-left: 40px;">$= 2^{k+1}(k+1)$</p> <div style="border: 1px dashed black; padding: 5px; width: fit-content; margin-left: 100px;">The statement is also true for $n=k+1$ if it is true for $n=k$.</div> <p style="padding-left: 40px;">By the principle of mathematical induction,</p> <p style="padding-left: 40px;">the statement is true for all positive integers n.</p>	<p style="text-align: center;">1</p> <p style="text-align: center;">1</p> <p style="text-align: center;">1</p> <p style="text-align: center;">1</p> <p style="text-align: center;">1</p> <hr style="width: 50%; margin-left: auto; margin-right: auto;"/> <p style="text-align: center;">5</p>	
<p>4. $\frac{dy}{dx} = \cos^2 x$</p> <p>$y = \int \cos^2 x \, dx$</p> <p style="padding-left: 40px;">$= \int \frac{1}{2}(1 + \cos 2x) \, dx$</p> <p style="padding-left: 40px;">$= \frac{x}{2} + \frac{\sin 2x}{4} + c$</p> <div style="border: 1px dashed black; padding: 5px; width: fit-content; margin-left: 100px;">c is a constant.</div> <p>Put $x = \frac{\pi}{2}$, $y = \pi$. $\pi = \frac{\pi}{4} + \frac{\sin \pi}{4} + c$</p> <p style="padding-left: 40px;">$c = \frac{3\pi}{4}$.</p> <p>\therefore the equation of the curve is $y = \frac{x}{2} + \frac{\sin 2x}{4} + \frac{3\pi}{4}$.</p>	<p style="text-align: center;">1A</p> <p style="text-align: center;">1A</p> <p style="text-align: center;">1A</p> <p style="text-align: center;">1M</p> <p style="text-align: center;">1A</p> <hr style="width: 50%; margin-left: auto; margin-right: auto;"/> <p style="text-align: center;">5</p>	<p>Withhold this mark if "y =" is omitted Omit dx (pp-1)</p> <p>Awarded even if c is omitted</p> <p>For finding c</p>

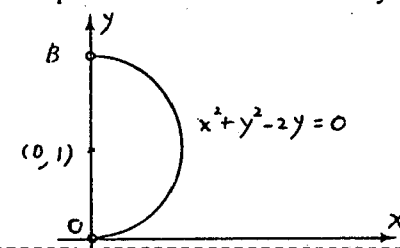
Solution	Marks	Remarks
<p>5. (a) The equation is $(2x + y - 3) + k(x - 3y + 1) = 0$. ($k$ is real)</p> <p>(b) (i) Substitute $(0, 0)$ into the equation in (a). $-3 + k(1) = 0$ $k = 3$ \therefore the equation of L is $2x + y - 3 + 3(x - 3y + 1) = 0$ $5x - 8y = 0$.</p> <p>(ii) Slope of $L = \frac{5}{8}$. Slope of $L_1 = -2$. Let θ be the acute angle between L and L_1. $\tan \theta = \left \frac{\frac{5}{8} - (-2)}{1 + \left(\frac{5}{8}\right)(-2)} \right$ $= \left -\frac{21}{2} \right$ $\theta = 85^\circ$ (correct to the nearest degree)</p>	<p>1A</p> <p>1M</p> <p>1A</p> <p>} 1A</p> <p>1M</p> <p>1A</p>	<p>OR $(2 + k)x + (1 - 3k)y - (3 - k) = 0$</p> <p>For either one of them</p> <p>Accept omitting absolute sign</p>
<p><u>Alternative solution (1)</u></p> <p>(a) $(x - 3y + 1) + \lambda(2x + y - 3) = 0$ (λ is real)</p> <p>(b) (i) Substitute $(0, 0)$ into the equation in (a). $1 + \lambda(-3) = 0$ $\lambda = \frac{1}{3}$ The equation of L is $(x - 3y + 1) + \frac{1}{3}(2x + y - 3) = 0$ $5x - 8y = 0$. (ii) Same as above</p>	<p>1A</p> <p>1M</p> <p>1A</p>	<p>OR $(1 + 2\lambda)x - (3 - \lambda)y + (1 - 3\lambda) = 0$</p>
<p><u>Alternative solution (2)</u></p> <p>(a) $\begin{cases} 2x + y - 3 = 0 \\ x - 3y + 1 = 0 \end{cases}$ Solving the 2 equations, $x = \frac{8}{7}, y = \frac{5}{7}$. \therefore The coordinates of P are $(\frac{8}{7}, \frac{5}{7})$. The equation of the family of straight lines through P is $\frac{y - \frac{5}{7}}{\frac{8}{7} - x} = m$ (m is real) $7mx - 7y + 5 - 8m = 0$.</p>	<p>1A</p>	

Solution	Marks	Remarks
(b) (i) Substitute (0, 0) into the equation in (a). $0 - 0 + 5 - 8m = 0$ $m = \frac{5}{8}$ \therefore the equation of L is $7\left(\frac{5}{8}\right)x - 7y + 5 - 8\left(\frac{5}{8}\right) = 0$ $5x - 8y = 0$. (ii) Same as above	1M 1A <hr/> 6	
6. $du = \cos \theta d\theta$ $\int_0^{\frac{\pi}{2}} \cos^5 \theta \sin^2 \theta d\theta = \int_0^{\frac{\pi}{2}} (1 - \sin^2 \theta)^2 \sin^2 \theta \cos \theta d\theta$ $= \int_0^1 (1 - u^2)^2 u^2 du$ $= \int_0^1 (u^2 - 2u^4 + u^6) du$ $= \left[\frac{u^3}{3} - \frac{2u^5}{5} + \frac{u^7}{7} \right]_0^1$ $= \frac{1}{3} - \frac{2}{5} + \frac{1}{7}$ $= \frac{8}{105}$	1A 1A 1A+1A <hr/> 1A <hr/> 6	For the integrand Omit du (pp-1) For the integrand 1A for the primitive function, 1A for limits

Solution	Marks	Remarks
<p>7. $\sin(3x + \frac{\pi}{4}) \cos(3x - \frac{\pi}{4})$</p> $= \frac{1}{2} \{ \sin [(3x + \frac{\pi}{4}) + (3x - \frac{\pi}{4})] + \sin [(3x + \frac{\pi}{4}) - (3x - \frac{\pi}{4})] \}$ $= \frac{1}{2} (\sin 6x + \sin \frac{\pi}{2})$ $= \frac{1}{2} (1 + \sin 6x)$	<p>1A</p> <p>1A</p> <p>1</p>	
<p>Alternative solution</p> $\sin(3x + \frac{\pi}{4}) \cos(3x - \frac{\pi}{4})$ $= (\sin 3x \cos \frac{\pi}{4} + \sin \frac{\pi}{4} \cos 3x) (\cos 3x \cos \frac{\pi}{4} + \sin 3x \sin \frac{\pi}{4})$ $= \frac{\sqrt{2}}{2} (\cos 3x + \sin 3x) \frac{\sqrt{2}}{2} (\cos 3x + \sin 3x)$ $= \frac{1}{2} (\cos^2 3x + 2 \sin 3x \cos 3x + \sin^2 3x)$ $= \frac{1}{2} (1 + \sin 6x)$	<p>1A</p> <p>1A</p> <p>1</p>	
$\sin(3x + \frac{\pi}{4}) \cos(3x - \frac{\pi}{4}) = \frac{3}{4}$ $\frac{1}{2} (1 + \sin 6x) = \frac{3}{4}$ $\sin 6x = \frac{1}{2}$ $6x = n\pi + (-1)^n \frac{\pi}{6} \quad \boxed{n \text{ is an integer}}$ $x = \frac{n\pi}{6} + (-1)^n \frac{\pi}{36} \quad (\text{OR } x = 30n^\circ + (-1)^n 5^\circ)$	<p>1A</p> <p>1M</p> <p>1A</p> <p>6</p>	<p>For $6x = n\pi + (-1)^n \alpha$</p> <p>$\frac{n\pi}{6} + (-1)^n 5^\circ$ etc. ($u - 1$)</p>
<p>8. (a) $S_1 = \int_1^2 (3x - 2 - x^2) dx$</p> $= \left[\frac{3x^2}{2} - 2x - \frac{x^3}{3} \right]_1^2$ $= (6 - 4 - \frac{8}{3}) - (\frac{3}{2} - 2 - \frac{1}{3})$ $= \frac{1}{6}$	<p>1M+1A</p> <p>1A</p> <p>1A</p>	<p>1M for area = $\int_a^b (y_1 - y_2) dx$,</p> <p>1A for limits</p> <p>Omit dx(pp-1)</p> <p>For primitive function only</p>
<p>Alternative solution</p> $S_1 = \int_1^4 (y^{\frac{1}{2}} - \frac{y+2}{3}) dy$ $= \left[\frac{2}{3} y^{\frac{3}{2}} - \frac{1}{6} y^2 - \frac{2}{3} y \right]_1^4$ $= \frac{1}{6}$	<p>1M+1A</p> <p>1A</p> <p>1A</p>	<p>1M for area = $\int_a^b (x_1 - x_2) dy$,</p> <p>1A for limits</p> <p>Omit dy (pp-1)</p> <p>For primitive function only</p>
<p>(b) Expressions (II) and (III) represent the total area $S_1 + S_2$.</p>	<p>1A+1A</p> <p>6</p>	<p>Deduct 1 mark for each wrong answer, up to zero</p>

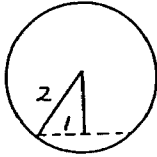
Solution	Marks	Remarks
9. (a) (i) Let $x = -y$.	1A	
$dx = -dy$		
$\int_{-a}^0 f(x)dx = \int_a^0 f(-y)(-dy)$		
$= \int_0^a f(-y)dy = \int_0^a f(-x)dx$	1	
(ii) $\int_{-a}^a f(x)dx = \int_{-a}^0 f(x)dx + \int_0^a f(x)dx$	1A	
$= \int_0^a f(-x)dx + \int_0^a f(x)dx \text{ (using (i))}$	1A	For the 1st term
$= \int_0^a f(x)dx + \int_0^a f(x)dx \because f(x) = f(-x))$		
$= 2 \int_0^a f(x)dx$	$\frac{1}{5}$	
(b) $dt = \frac{\sqrt{3}}{3} \sec^2 \theta d\theta$		
$\int_0^1 \frac{dt}{1+3t^2} = \int_0^{\frac{\pi}{3}} \frac{\sqrt{3}}{3} \frac{\sec^2 \theta d\theta}{(1+\tan^2 \theta)}$	1A+1A	1A for integrand, 1A for limits
$= \frac{\sqrt{3}}{3} \int_0^{\frac{\pi}{3}} d\theta$		
$= \frac{\sqrt{3}\pi}{9}$	$\frac{1}{3}$	
(c) (i) (1) $I_1 + 4I_2 = \int_0^1 \frac{1-t^2}{1+3t^2} dt + 4 \int_0^1 \frac{t^2}{1+3t^2} dt$		
$= \int_0^1 dt$		
$= 1$	1	
(2) $I_1 + I_2 = \int_0^1 \frac{1}{1+3t^2} dt$		
$= \frac{\sqrt{3}\pi}{9} \text{ (by result of (b))}$	1A	
(ii) $\begin{cases} I_1 + 4I_2 = 1 & \text{----- (1)} \\ I_1 + I_2 = \frac{\sqrt{3}\pi}{9} & \text{----- (2)} \end{cases}$		
(1) - (2) $3I_2 = 1 - \frac{\sqrt{3}\pi}{9}$	1M	For eliminating I_1
$I_2 = \frac{1}{3} \left(1 - \frac{\sqrt{3}\pi}{9} \right)$	1A	

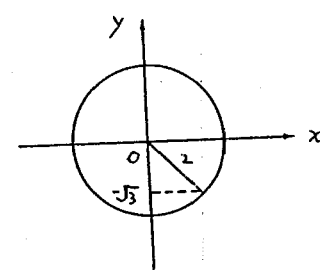
Solution	Marks	Remarks
<p>Alternative solution</p> $I_2 = \int_0^1 \frac{t^2}{1+3t^2} dt$ $= \int_0^1 \frac{1}{3} \left(\frac{1+3t^2-1}{1+3t^2} \right) dt$ $= \frac{1}{3} \int_0^1 dt - \frac{1}{3} \int_0^1 \frac{1}{1+3t^2} dt$ $= \frac{1}{3} - \frac{1}{3} \left(\frac{\sqrt{3}\pi}{9} \right) = \frac{1}{3} - \frac{\sqrt{3}\pi}{27}$	<p>1M</p> <p>1A</p>	
<hr style="width: 50%; margin: auto;"/> <p style="text-align: center;">4</p> <hr style="width: 50%; margin: auto;"/>		
<p>(d) $\int_{-1}^1 \frac{1+t^2}{1+3t^2} dt = 2 \int_0^1 \frac{1+t^2}{1+3t^2} dt$</p> <div style="border: 1px dashed black; padding: 5px; display: inline-block; margin: 10px 0;"> $\therefore \frac{1+t^2}{1+3t^2} = \frac{1+(-t)^2}{1+3(-t)^2} \text{ for all } t$ </div> $= 2 \int_0^1 \frac{1}{1+3t^2} dt + 2 \int_0^1 \frac{t^2}{1+3t^2} dt$ $= 2 \left(\frac{\sqrt{3}\pi}{9} \right) + 2 \left(\frac{1}{3} \right) \left(1 - \frac{\sqrt{3}\pi}{9} \right)$ $= \frac{2}{3} + \frac{4\sqrt{3}\pi}{27}$	<p>1M</p> <p>1M+1A</p> <p>1A</p>	<p>For using (a) (ii)</p>
<p>Alternative solution</p> $\int_{-1}^1 \frac{1+t^2}{1+3t^2} dt = \int_{-1}^1 \left(1 - \frac{2t^2}{1+3t^2} \right) dt$ $= \int_{-1}^1 dt - 2 \int_{-1}^1 \frac{t^2}{1+3t^2} dt$ $= 2 - 4 \int_0^1 \frac{t^2}{1+3t^2} dt$ <div style="border: 1px dashed black; padding: 5px; display: inline-block; margin: 10px 0;"> $\therefore \frac{t^2}{1+3t^2} = \frac{(-t)^2}{1+3(-t)^2} \text{ for all } t$ </div> $= 2 - 4 \left(\frac{1}{3} \right) \left(1 - \frac{\sqrt{3}\pi}{9} \right)$ $= \frac{2}{3} + \frac{4\sqrt{3}\pi}{27}$	<p>1M</p> <p>1M+1A</p> <p>1A</p>	<p>1M for using (a) (ii)</p>
<hr style="width: 50%; margin: auto;"/> <p style="text-align: center;">4</p> <hr style="width: 50%; margin: auto;"/>		

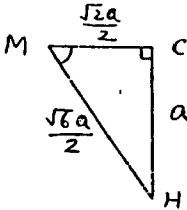
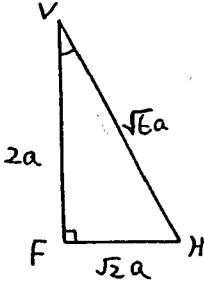
Solution	Marks	Remarks
<p>10. (a) Coordinates of A are $(2p, 0)$. Coordinates of B are $(0, 2)$. Since $BC : CA = 1 : p^2$,</p> $x_0 = \frac{2p+0}{1+p^2} = \frac{2p}{1+p^2}$ $y_0 = \frac{2p^2+0}{1+p^2} = \frac{2p^2}{1+p^2}$	<p>1A</p> <p>1M+1A</p> <hr/> <p>1A</p> <hr/> <p>4</p>	<p>1M for division formula</p>
<p>(b) $\frac{y_0}{x_0} = \frac{2p^2/p^2+1}{2p/p^2+1} = p$</p> <p>Put $p = \frac{y_0}{x_0}$,</p> $x_0 = \frac{2(\frac{y_0}{x_0})}{(\frac{y_0}{x_0})^2+1}$ <div style="border: 1px solid black; padding: 5px; display: inline-block;"> <p>OR $y_0 = \frac{2(\frac{y_0}{x_0})^2}{(\frac{y_0}{x_0})^2+1}$</p> </div>	<p>1</p> <p>2M</p>	<p>OR $x_0 + (\frac{y_0}{x_0})y_0 - 2(\frac{y_0}{x_0}) = 0$</p>
<p>$x_0^2 + y_0^2 - 2y_0 = 0$</p> <p>\therefore the equation of the locus of D is $x^2 + y^2 - 2y = 0$.</p> 	<p>1A</p> <p>2A</p> <hr/> <p>1A</p> <hr/> <p>7</p>	<p>Accept including O and B (Circle : 1A only) For labelling the centre (pp-1) for not labelling the axes</p>
<p>(c) $\text{Area } S = \frac{1}{2}(2)(x_0)$</p> <p>Area of $\triangle OBC$ is greatest when $x_0 = 1$.</p> $\therefore \frac{2p}{p^2+1} = 1$ $(p-1)^2 = 0$ $p = 1$ <p>\therefore the coordinates of A are $(2, 0)$.</p>	<p>1A</p> <p>1M</p> <p>1M</p> <p>1A</p> <p>1A</p>	
<p>Alternative solution</p> $\text{Area } S = \frac{1}{2}(2)(x_0)$ $= \frac{2p}{p^2+1}$ $\frac{dS}{dp} = \frac{2(p^2+1) - 2p(2p)}{(p^2+1)^2}$ $= \frac{2(1-p^2)}{(p^2+1)^2}$ $\frac{dS}{dp} = 0 \text{ when } p = 1.$ <p>As $\frac{dS}{dp} > 0$ when $p < 1$ and $\frac{dS}{dp} < 0$ when $p > 1$,</p> <p>$\therefore S$ is greatest at $p = 1$.</p> <p>\therefore the coordinates of A are $(2, 0)$.</p>	<p>1A</p> <p>1M</p> <p>1A</p> <p>1M</p> <p>1A</p>	<p>OR differentiating x_0</p> <p>For checking</p> <p>Withhold this mark if checking was omitted.</p>
	<p>5</p>	

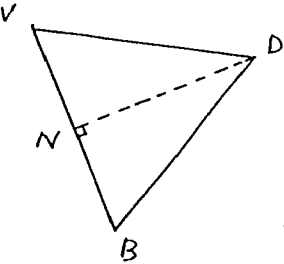
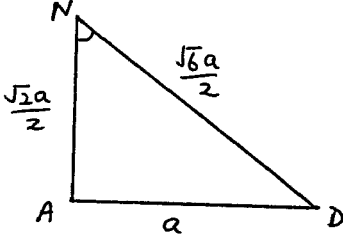
Solution	Marks	Remarks
11. (a) (i) Since S lies on E , $\frac{a^2}{4} + \frac{b^2}{3} = 1$ $3a^2 + 4b^2 = 12$	1	
(ii) $\frac{x^2}{4} + \frac{y^2}{3} = 1$ Differentiating w.r.t. x , $\frac{x}{2} + \frac{2y}{3} \frac{dy}{dx} = 0$ $\frac{dy}{dx} = \frac{-3x}{4y}$ $m_1 = -\frac{3a}{4b}$ $m_2 = -\frac{1}{m_1} = \frac{4b}{3a}$	1M 1A 1A	
Alternative solution Using the formula $\frac{xx_1}{4} + \frac{yy_1}{3} = 1$, equation of tangent to E at S is $\frac{a}{4}x + \frac{b}{3}y = 1$ $3ax + 4by = 12$ $m_1 = -\frac{3a}{4b}$ $m_2 = -\frac{1}{m_1} = \frac{4b}{3a}$	1A 1A 1A	
<u>4</u>		
(b) (i) Substituting $y = mx + \frac{c}{m}$ into P , $(mx + \frac{c}{m})^2 = 4cx$ $m^2x^2 - 2cx + \frac{c^2}{m^2} = 0$ $\Delta = (2c)^2 - 4m^2(\frac{c^2}{m^2})$ $= 0$ $\therefore y = mx + \frac{c}{m}$ is a tangent to P .	1M 1M 1	OR $x = \frac{y^2}{4c}$ $y = m(\frac{y^2}{4c}) + \frac{c}{m}$ $m^2y^2 - 4mcy + 4c^2 = 0$ $\Delta = (4mc)^2 - 4m^2(4c^2)$ $= 0$
(ii) If $y = mx + \frac{c}{m}$ passes through S , $b = ma + \frac{c}{m}$ $am^2 - bm + c = 0 \quad \text{---- (*)}$	1	

Solution	Marks	Remarks
(iii) (1) m_1, m_2 are the roots of the equation (*)		
$\therefore m_1 + m_2 = \frac{b}{a}$	1A	
$m_1 m_2 = \frac{c}{a}$	1A	
From (a) (ii), $m_1 = -\frac{3a}{4b}, m_2 = \frac{4b}{3a}$.		
$\frac{-3a}{4b} + \frac{4b}{3a} = \frac{b}{a}$	1M	
$\frac{-9a^2 + 16b^2}{12ab} = \frac{b}{a}$		
$-9a^2 + 16b^2 = 12b^2$		
$9a^2 = 4b^2$	1	
Since L_1 and L_2 are perpendicular,		
$m_1 m_2 = \frac{c}{a} = -1$		
$\therefore c = -a$	1	
(2) $\begin{cases} 3a^2 + 4b^2 = 12 \\ 9a^2 = 4b^2 \end{cases}$		
$3a^2 + 4\left(\frac{9a^2}{4}\right) = 12$	1M	For eliminating b
$12a^2 = 12$		
$a = -1$ ($\because a < 0$)	1A	
$\therefore c = -a = 1$		
\therefore the equation of P is $y^2 = 4x$.	<u>1A</u>	
	<u>12</u>	

Solution	Marks	Remarks
12. (a) Volume = $\int_{-k}^k \pi x^2 dy$ $= \int_{-k}^k 4\pi(1 - \frac{y^2}{a^2}) dy$ $= 4\pi \left[y - \frac{y^3}{3a^2} \right]_{-k}^k$ $= 4\pi \left[k - \frac{k^3}{3a^2} + k - \frac{k^3}{3a^2} \right]$ $= 8k \left(1 - \frac{k^2}{3a^2} \right) \pi$	1M 1A 1A 1 4	For $V = \pi \int_a^b x^2 dy$ Omit $dy(pp-1)$ OR $= 2 \int_0^k 4\pi(1 - \frac{y^2}{a^2}) dy$ For primitive function only
(b) (i) Put $x = 1, y = k$ into $\frac{x^2}{4} + \frac{y^2}{a^2} = 1$. $\frac{1}{4} + \frac{k^2}{a^2} = 1$ $k^2 = \frac{3a^2}{4}$ $k = \frac{\sqrt{3}a}{2}$	1A 1A	OR Put $x = -1, y = k$. $k = \pm \frac{\sqrt{3}a}{2} (pp-1)$
Height of $S_1 = 2k$ $= \sqrt{3}a$	1	
(ii) Put $k = \frac{\sqrt{3}a}{2}$, Volume of $S_1 = 8 \left(\frac{\sqrt{3}a}{2} \right) \left[1 - \frac{1}{3a^2} \left(\frac{\sqrt{3}a}{2} \right)^2 \right] \pi$ $= 3\sqrt{3}a\pi$.	1M 1A 5	
(c) (i) Height of S_2 $= 2 + \sqrt{2^2 - 1^2}$ $= 2 + \sqrt{3}$ \therefore height of toy $\sqrt{3}a + 2 + \sqrt{3} = 2 + (a+1)\sqrt{3}$	1A 1	
(ii) The ellipse becomes a circle of radius 2 when $a = 2$. Using (b) (ii) and put $a = 2$, Volume of portion of the sphere from $y = -\sqrt{3}$ to $y = \sqrt{3}$ $= 3\sqrt{3}(2)\pi$ $= 6\sqrt{3}\pi$	1M+1A	

Solution	Marks	Remarks
$\text{Volume of } S_2 = \frac{1}{2} \left(\frac{4}{3} \pi (2)^3 \right) + \frac{1}{2} (6\sqrt{3})\pi$ $= \frac{16\pi}{3} + 3\sqrt{3}\pi$	<p>1M</p> <p>1A</p>	$\text{OR } = \frac{4}{3} \pi (2)^3 - \frac{1}{2} \left[\frac{4}{3} \pi (2)^3 - 6\sqrt{3}\pi \right]$
<p><u>Alternative solution (1)</u></p> <p>Volume of S_2</p> $= \pi \int_{-\sqrt{3}}^2 x^2 dy, \text{ where } x^2 + y^2 = 4$ $= \pi \int_{-\sqrt{3}}^2 (4 - y^2) dy$ $= \pi \left[4y - \frac{y^3}{3} \right]_{-\sqrt{3}}^2$ $= \pi \left(8 - \frac{8}{3} + 4\sqrt{3} - \sqrt{3} \right)$ $= \pi \left(\frac{16}{3} + 3\sqrt{3} \right)$	<p>1M+1A</p> <p>1A</p> <p>1A</p>	<p>1M for $V = \int_a^b \pi x^2 dy$</p> <p>1A for $x^2 + y^2 = 4$</p> 
<p><u>Alternative solution (2)</u></p> <p>Volume of S_2</p> $= \frac{2}{3} \pi (2)^3 + \pi \int_{-\sqrt{3}}^0 x^2 dy, \text{ where } x^2 + y^2 = 4$ $= \frac{16\pi}{3} + \pi \int_{-\sqrt{3}}^0 (4 - y^2) dy$ $= \frac{16\pi}{3} + \pi \left[4y - \frac{y^3}{3} \right]_{-\sqrt{3}}^0$ $= \frac{16\pi}{3} + \pi (4\sqrt{3} - \sqrt{3})$ $= \frac{16\pi}{3} + 3\sqrt{3}\pi$	<p>1M+1A</p> <p>1A</p> <p>1A</p>	<p>1M for $V = \int_a^b \pi x^2 dy$</p> <p>1A for $x^2 + y^2 = 4$</p>
<p>Volume of toy = Volume of S_1 + Volume of S_2</p> $= 3\sqrt{3}a\pi + \left(\frac{16\pi}{3} + 3\sqrt{3} \right) \pi$ $= \frac{16\pi}{3} + 3\sqrt{3} (a+1)\pi$	<p>1A</p> <p>7</p>	

Solution	Marks	Remarks
13. (a) (i) $CM = \frac{1}{2}\sqrt{a^2 + a^2}$ $= \frac{\sqrt{2}}{2}a$ (OR $\frac{a}{\sqrt{2}}$)	1A	
(ii) The angle between the 2 lines is $\angle CMH$.	1A	(can be omitted)
$\tan \angle CMH = \frac{CH}{CM}$ $= \frac{a}{\frac{\sqrt{2}a}{2}}$ $= \sqrt{2}$ $\angle CMH = 55^\circ \text{ (correct to the nearest degree)}$	1M 1A 4	
(b) (i) $\sin \angle FVH = \frac{FH}{VH}$ $= \frac{\sqrt{2}a}{\sqrt{(2a)^2 + (\sqrt{2}a)^2}}$ $= \frac{\sqrt{3}}{3}$ Perpendicular distance from F to $BVDH$ $= VF \sin \angle FVH$ $= 2a\left(\frac{\sqrt{3}}{3}\right)$ $= \frac{2\sqrt{3}a}{3}$ (OR $= \frac{2a}{\sqrt{3}}$)	1 1M 1A	
<p>Alternative solution</p> <p>Consider area of $\triangle VFH$. Let h be the perpendicular distance.</p> $\frac{1}{2}(VF)(FH) = \frac{1}{2}(VH)h$ $\frac{1}{2}(2a)(\sqrt{2}a) = \frac{1}{2}(\sqrt{6}a)(h)$ $h = \frac{2\sqrt{3}}{3}a$	1M 1A	

Solution	Marks	Remarks
<p>(ii) (1) $BN = \frac{1}{2}BV$</p> $= \frac{\sqrt{2}a}{2}$ $DN = \sqrt{BD^2 - BN^2}$ $= \sqrt{(\sqrt{2}a)^2 - \left(\frac{\sqrt{2}a}{2}\right)^2}$ $= \frac{\sqrt{6}a}{2}$	<p>1A</p> <p>1M</p> <p>1A</p>	
<p>Alternative solution</p> $BD = VD = VB = \sqrt{2}a$ $\therefore \angle VBD = 60^\circ$ $DN = \sqrt{2}a \sin 60^\circ$ $= \frac{\sqrt{6}a}{2}$	<p>1A</p> <p>1M</p> <p>1A</p>	
<p>(2) The angle between the 2 faces is $\angle AND$</p> $AN = a \sin 45^\circ = \frac{\sqrt{2}a}{2}$ $\cos \angle AND = \frac{(AN)^2 + (ND)^2 - (AD)^2}{2(AN)(ND)}$ $= \frac{\left(\frac{\sqrt{2}a}{2}\right)^2 + \left(\frac{\sqrt{6}a}{2}\right)^2 - a^2}{2\left(\frac{\sqrt{2}a}{2}\right)\left(\frac{\sqrt{6}a}{2}\right)}$ $= \frac{1}{\sqrt{3}}$ $\angle AND = 55^\circ \text{ (correct to the nearest degree)}$	<p>1A</p> <p>1A</p> <p>1M</p> <p>1A</p>	<p>(can be omitted)</p>  <p>OR $\angle AND = \angle CMH$</p>
<p>Alternative solution</p> <p>(2) The angle between the 2 faces is $\angle AND$</p> $\angle NAD = 90^\circ$ $\sin \angle AND = \frac{AD}{ND}$ $= \frac{a}{\frac{\sqrt{6}a}{2}}$ $= \frac{\sqrt{6}}{3}$ $\angle AND = 55^\circ \text{ (correct to the nearest degree)}$	<p>1A</p> <p>1A</p> <p>1M</p> <p>1A</p>	

Solution	Marks	Remarks
<p>(iii) As the faces BHD and BVD lie on the same plane and the faces $ABGF$ and BVA lie on the same plane, the angle between the two faces equals to the angle between the faces BVA and BVD, i.e. $\angle AND$.</p> <p>So the student is correct.</p>	<p>} 2</p>	<p>'Correct' without explanation – no mark</p>
<p><u>Alternative solution</u></p> <p>As BV is a line of intersection of the two faces, and AN and DN are both perpendicular to BV, so the angle between the two faces is $\angle AND$.</p> <p>So the student is correct.</p>	<p>} 2</p>	
	<p>12</p>	