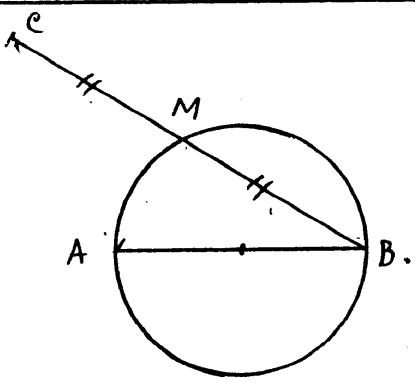
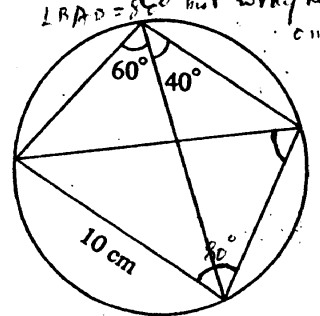
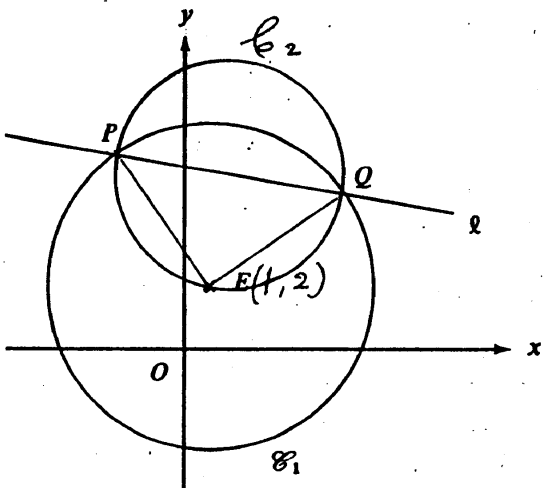


Solution	Marks	Remarks
<p>1. (a) Increase percentage = $(\frac{1000}{8000} \times 100)\%$ $= 12.5\%$</p> <p>(b) His savings = $\\$9000 \times \frac{3}{10}$ $= \\$2700$</p>	<p>1A</p> <hr style="width: 50%; margin: auto;"/> <p>$\frac{1A}{2}$</p> <hr style="width: 50%; margin: auto;"/> <p>1A</p> <hr style="width: 50%; margin: auto;"/> <p>$\frac{1A}{2}$</p>	<p>for $\frac{1000}{8000}$</p> <p>Accept 12.5</p>
<p>2. (a) $x + 1 > \frac{1}{5}(3x + 2)$ $5x - 3x > 2 - 5$ $2x > -3$ $x > -\frac{3}{2}$</p> <p>(b) Furthermore, if $-4 \leq x \leq 4$, then the range of x is $-\frac{3}{2} < x \leq 4$.</p>	<p>1M</p> <hr style="width: 50%; margin: auto;"/> <p>$\frac{1A}{2}$</p> <hr style="width: 50%; margin: auto;"/> <p>2A</p> <hr style="width: 50%; margin: auto;"/> <p>$\frac{2}{2}$</p>	<p><u>OR</u></p> <p>$x - \frac{3}{5}x > \frac{2}{5} - 1$ 1M</p> <p>$\frac{2}{5}x > -\frac{3}{5}$</p> <p>$x > -\frac{3}{2}$ 1A</p> <p>-1 if '=' incorrect Accept graphical representation</p>
<p>3. (a) Since $(x + 1)$ is a factor of $x^4 + x^3 - 8x + k$, $(-1)^4 + (-1)^3 - 8(-1) + k = 0$ <i>omit pp1</i> $k = -8$</p> <p>(b) $x^4 + x^3 - 8x - 8 = (x + 1)(x^3 - 8)$ $= (x + 1)(x - 2)(x^2 + 2x + 4)$</p> <p><u>OR</u> $(2)^4 + (2)^3 - 8(2) - 8 = 0$ $\rightarrow x - 2$ is another factor $\therefore x^4 + x^3 - 8x - 8 = (x + 1)(x - 2)(x^2 + 2x + 4)$ <i>pp1</i></p>	<p>1M</p> <hr style="width: 50%; margin: auto;"/> <p>$\frac{1A}{2}$</p> <hr style="width: 50%; margin: auto;"/> <p>1M+1A</p> <p>1A+1A</p> <hr style="width: 50%; margin: auto;"/> <p>$\frac{4}{4}$</p> <hr style="width: 50%; margin: auto;"/> <p>1A+2A</p> <hr style="width: 50%; margin: auto;"/> <p>1M+2A</p>	<p>1M for $(x+1) \times$ cubic exp.</p> <p>1A for $x^3 - 8 = (x-2)(x^2+2x+4)$</p> <p>1A for $x^2 - 8 = 0$</p> <p>1M for $(x+1)(x-2) \times$ quadratic exp.</p>

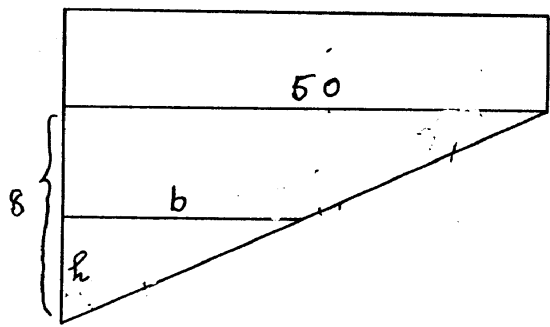
Solution	Marks	Remarks
<p>4. (a) </p> <p>(b) Consider $\triangle ABM$ and $\triangle ACM$ (OR joining AM, AC)</p> <p>Since AB is a diameter, $\angle AMB = 90^\circ$ (OR $\angle AMB = \angle AMC$) $\angle AMB = \angle AMC$ As AM is common and $BM = MC$, the two triangles are congruent. (SAS)</p> <p>$\therefore \angle BAM = \angle CAM$, i.e. AM bisects $\angle BAC$.</p>	<p>1A</p> <hr/> <p>1A 2</p> <p>1</p> <p>1</p> <p>1</p> <hr/> <p>1 4</p>	<p>For circle with A,B,M</p> <p>Indication of $BM = MC$</p> <p>In this part, candidates are expected to give brief reasons.</p> <p>State $\triangle AMB \cong \triangle AMC$ (with reasons) conclude AM bisects $\angle BAC$</p> <p>state $\triangle AMB \cong \triangle AMC$ (with reasons) (marks) conclude AM bisects $\angle BAC$</p>
<p>5. (a) $\begin{cases} x + 2y = 5 & \dots\dots\dots(i) \\ 5x - 4y = 4 & \dots\dots\dots(ii) \end{cases}$</p> <p>$2 \times (i) + (ii) \Rightarrow 7x = 14$ $x = 2$</p> <p>Putting $x = 2$ in (i), $2y = 3$ $y = \frac{3}{2}$</p> <p>\therefore the solution is $\begin{cases} x = 2 \\ y = \frac{3}{2} \end{cases}$</p> <p>(b) By (a), $\frac{a}{c} = 2$ and $\frac{b}{c} = \frac{3}{2}$ $a : b : c = 4 : 3 : 2$ (or equivalent ratios)</p>	<p>1M</p> <p>1A</p> <p>1A</p> <hr/> <p>3</p> <p>2A 2M</p> <hr/> <p>2A 1A 3</p>	<p>For elim. or subs.</p>
<p>6. (a) $\angle ABD (= \angle ACD) = 60^\circ$</p> <p>Since ABCD is a cyclic quadrilateral, $\angle BAD + \angle BCD = 180^\circ$ $\therefore \angle BAD = 180^\circ - (60 + 40)^\circ = 80^\circ$</p> <p>(b) By the sine rule, $\frac{10}{\sin 60^\circ} = \frac{BD}{\sin 80^\circ}$ $BD = \frac{10 \sin 80^\circ}{\sin 60^\circ} = 11.37 \text{ cm (corr. to 2 d.p.)}$</p>	<p>1A</p> <hr/> <p>1A 3</p> <p>1M+1A</p> <hr/> <p>1A 3</p>	<p>\angle angle shown in diagram</p> <p>OR $\angle BDA = 40^\circ$</p> <p>only $\angle BAD = 80^\circ$ no name / $\angle BAD = 80^\circ$ but wrong name</p> 

Solution	Marks	Remarks
<p>7. $3\tan\theta = 2\cos\theta$</p> $3 \frac{\sin\theta}{\cos\theta} = 2\cos\theta$ $3\sin\theta = 2\cos^2\theta$ $3\sin\theta = 2(1 - \sin^2\theta)$ $\therefore 2\sin^2\theta + 3\sin\theta - 2 = 0 \dots\dots\dots$ $(2\sin\theta - 1)(\sin\theta + 2) = 0$ $\sin\theta = \frac{1}{2} \text{ or } -2 \text{ (rejected)}$ <p>The solutions are $\theta = 30^\circ$ or 150° ($\frac{\pi}{6}$ or $\frac{5\pi}{6}$) [as $\cos 30^\circ$ and $\cos 150^\circ \neq 0$].</p>	<p>1M</p> <p>1M</p> <p>1A</p> <p>1A</p> <p>1A</p> <p>1A+1A</p> <hr style="width: 50%; margin: 0 auto;"/> <p>7</p>	<p>Accept '$\sin\theta = \frac{1}{2}$' or '$\sin\theta = \frac{1}{2}$ or -2'</p> <p>Deduct 1 for each extraneous solution.</p>

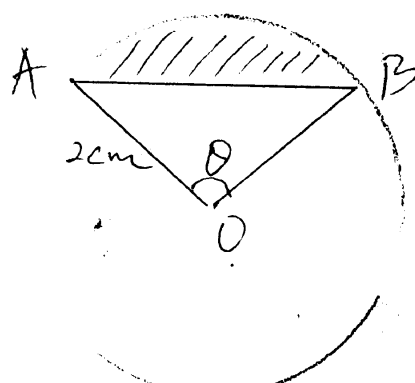
Solution	Marks	Remarks
8. (a) $E = (1, 2)$	<u>1A</u> 1	$E = (1, 2)$ pp-1
(b) From $x + 7y - 40 = 0$, we have $x = 40 - 7y$ (or $y = \frac{40 - x}{7}$)		
Putting in \mathcal{C}_1 , $(40-7y)^2 + y^2 - 2(40-7y) - 4y - 20 = 0$	1M	
$50y^2 - 550y + 1500 = 0$	1A	
$y^2 - 11y + 30 = 0$ (or $x^2 - 3x - 10 = 0$)		
$(y - 5)(y - 6) = 0$		
$y = 5$ or 6 (or $x = 5$ or -2)	1A	$y=5$ and $y=6$ pp-1
$x = 5$ or -2		
$\therefore P = (-2, 6), Q = (5, 5)$	1A	Accept $P = (5, 5)$ $Q = (-2, 6)$
	<u>4</u>	
(c) \mathcal{C}_2 is given by $\frac{y-6}{x+2} \cdot \frac{y-5}{x-5} = -1$	1M+1A	OR Ctr. of $\mathcal{C}_2 = (\frac{3}{2}, \frac{11}{2})$ } 1A
i.e. $x^2 + y^2 - 3x - 11y + 20 = 0$	1A	radius = $\frac{5\sqrt{2}}{2}$ (=3.54) } 1A
		Eq. of \mathcal{C}_2 : $(x-\frac{3}{2})^2 + (y-\frac{11}{2})^2 = \frac{50}{4}$ }
	Answer	1M+1A
	<u>3</u>	
(d) Putting $(x, y) = (1, 2)$ in L.H.S. of \mathcal{C}_2	1M	OR Slope of PE x slope of
$1^2 + 2^2 - 3(1) - 11(2) + 20 = 0$	1A	QE = -1
$\therefore \mathcal{C}_2$ passes through E		
(As PQ is a diameter of \mathcal{C}_2), $\angle PEQ = 90^\circ$	1M)	OR Let $P = (-2, 6), Q = (5, 5)$
(Since $PE = QE$ (radii of \mathcal{C}_1))))	Slope of PQ = $-\frac{1}{7}$
$\angle EPQ = \frac{90^\circ}{2} = 45^\circ$))	Slope of PE = $-\frac{4}{3}$
	1A)	$\tan \angle EPQ = \frac{-\frac{1}{7} - (-\frac{4}{3})}{1 + \frac{1}{7} \times \frac{4}{3}}$ 1M
		= 1
		$\angle EPQ = 45^\circ$ 1A
		OR
	$171.87^\circ - 126.87^\circ$ 1M	
	= 45° 1A	
	<u>4</u>	

Solution	Marks	Remarks
9. (a) $\frac{k}{1} = \frac{1}{k}$ $k^2 = \frac{1}{2}$ $k = \frac{1}{\sqrt{2}} \text{ (or } \frac{\sqrt{2}}{2} \text{) (as } k > 0 \text{)}$	1M 1A <hr style="width: 50%; margin: 0 auto;"/> 2	Do not accept $\pm \frac{1}{\sqrt{2}}$ but follow through
(b) $T(n) = \left(\frac{1}{\sqrt{2}}\right)^{n-1}$ [or $\frac{1}{(\sqrt{2})^{n-1}}$, $2^{-\frac{n-1}{2}}$, etc.]	1M+1A <hr style="width: 50%; margin: 0 auto;"/> 2	$\frac{1}{\sqrt{2}}^{n-1}$ p.p.
(c) Sum to infinity = $\frac{1}{1 - \frac{1}{\sqrt{2}}}$ $= \frac{\sqrt{2}}{\sqrt{2} - 1}$ $= \frac{\sqrt{2}(\sqrt{2} + 1)}{(\sqrt{2} - 1)(\sqrt{2} + 1)}$ $= 2 + \sqrt{2} \dots\dots\dots$	1M+1A 1M 1A <hr style="width: 50%; margin: 0 auto;"/> 4	
(d) No. of terms in the product = $\frac{2n - 1 - 1}{2} + 1 = n$ $T(1) \times T(3) \times T(5) \times \dots \times T(2n-1)$ $= 1 \times \frac{1}{2} \times \frac{1}{4} \dots \times \left(\frac{1}{\sqrt{2}}\right)^{2n-2}$ [or $1 \times \frac{1}{(\sqrt{2})^2} \times \frac{1}{(\sqrt{2})^4} \times \dots \times \frac{1}{(\sqrt{2})^{2n-2}}$] $= 1 \times \frac{1}{2} \times \frac{1}{2^2} \times \dots \times \frac{1}{2^{n-1}}$ $= \frac{1}{2^{1+2+\dots+(n-1)}} \dots\dots\dots$ $= \frac{1}{\frac{n(n-1)}{2}}$ [or $2^{\frac{-n(n-1)}{2}}$, etc.]	1A 1M 1M+1A <hr style="width: 50%; margin: 0 auto;"/> 4	1M for summing index as A.P.

Solution	Marks	Remarks
<p>10. (a) $AB' = 10\cos 45^\circ$ $= 5\sqrt{2}\text{m}$ (or $\frac{10}{\sqrt{2}}$), (7.07107)</p> <p>$AC' = 10\cos 30^\circ$ $= 5\sqrt{3}\text{m}$ (8.66025)</p>	<p>1A</p> <hr style="width: 50%; margin: auto;"/> <p>1A</p> <hr style="width: 50%; margin: auto;"/> <p>1A</p> <hr style="width: 50%; margin: auto;"/> <p>1A</p> <hr style="width: 50%; margin: auto;"/>	<p>Any figure roundable to 7.07</p> <p><i>No unit -1 mark for wide paper</i></p> <p><i>u-1</i></p>
<p>(b) $BC = \sqrt{10^2 + 10^2}$ $= 10\sqrt{2}\text{m}$ (14.14214)</p> <p>$BB' = 10\sin 45^\circ$ $= 5\sqrt{2}\text{m}$ (7.07107)</p> <p>$CC' = 10\sin 30^\circ$ $= 5\text{m}$</p>	<p>1A</p> <hr style="width: 50%; margin: auto;"/> <p>1A</p> <hr style="width: 50%; margin: auto;"/> <p>1A</p> <hr style="width: 50%; margin: auto;"/>	
<p>(c) Let D be the foot of the perpendicular from C to BB'. $BD = (5\sqrt{2} - 5)\text{m}$ (=2.07107)</p> <p>$B'C' = CD$ $= \sqrt{(10\sqrt{2})^2 - (5\sqrt{2} - 5)^2}$ $= \sqrt{125 + 50\sqrt{2}}\text{m}$ (= 13.9897)</p>	<p>1M</p> <p>1M</p> <p>1A</p> <hr style="width: 50%; margin: auto;"/> <p>3</p> <hr style="width: 50%; margin: auto;"/>	<p>Accept figures roundable to 13.9 - 14.0</p>
<p>(d) By the cosine rule, $\cos B'AC' = \frac{50 + 75 - (125 + 50\sqrt{2})}{2 \times 5\sqrt{2} \times 5\sqrt{3}}$ (= $-\frac{1}{\sqrt{3}}$, -0.57735)</p> <p>$\angle B'AC' = 125^\circ$ (125.264)</p> <p>Area of the shadow = $\frac{1}{2} \times 5\sqrt{2} \times 5\sqrt{3} \sin 125.264^\circ$ $= 25\text{m}^2$</p>	<p>1M</p> <p>1A</p> <hr style="width: 50%; margin: auto;"/> <p>1A</p> <hr style="width: 50%; margin: auto;"/> <p>4</p> <hr style="width: 50%; margin: auto;"/>	<p>$124^\circ - 125^\circ$</p> <p>For $\Delta = \frac{1}{2} ab \sin C$</p> <p>25.0 - 25.4</p>

Solution	Marks	Remarks
<p>11. (a) Area of cross-section = $\frac{50}{2} (2 + 10) = 300\text{m}^2$ Vol. of water = $20 \times 300 = 6000\text{m}^3$</p>	<p>20x 1M+1A</p>	<p>1M for Vol. = Area of cross-section x width</p> <p>OR $\frac{20 \times 50 \times 2}{2000} + \frac{1}{2}(10 \times 8) \times 20$</p>
<p>(b) (i) When the depth of water at the deeper end is 8m, the cross-section of water is a triangle of area $\frac{8 \times 50}{2} = 200\text{m}^2$. Vol. of water left = $200 \times 20 = 4000\text{m}^3$.</p>	<p>2A</p>	<p>OR Drop in water level = 2m Water pumped out = $2 \times 50 \times 20 = 2000\text{m}^3$ 1A Water left = 4000m^3 1A</p>
<p>(ii) Vol. of water pumped out in 8 hours = $(0.125)^2 \pi \times 3600 \times 8 \times 3$ = $1350\pi \text{ m}^3$ = 4241m^3 (correct to the nearest m^3) (4241.15)</p>	<p>1M+1A 1A</p>	<p>1M for area of cross-section</p>
<p>(iii) Vol. of water left after 8 hrs = $6000 - 4241 = 1759\text{m}^3$</p>	<p>1M</p>	
<p>When the depths of water are 8m and h m, the corresponding cross-sections of water are two similar triangles with bases 50m and b m. $\frac{b}{h} = \frac{50}{8}$ or $b = \frac{50}{8} h$</p>	<p>1A</p>	
<p>$\therefore \frac{1}{2} b \times h \times 20 = 1759$</p>	<p>1M</p>	
<p>$\frac{20}{2} \times \frac{50}{8} h^2 = 1759$</p>	<p>1M</p>	<p>$(\frac{h}{8})^2 = \frac{1759}{4000}$</p>
<p>$h = 5.305 = 5.3$ (correct to 1 d.p.)</p>	<p>1A <u>10</u></p>	
		

Solution	Marks	Remarks																											
12. (a) (i) Area of $\Delta OAB = \frac{1}{2}(2)(2)\sin\theta = 2\sin\theta \text{ cm}^2$ ^{u^{-1}} (ii) The area is greatest when $\theta = \frac{\pi}{2} \approx 1.57$	1A <hr/> 1A <hr/> 2	90° not acceptable																											
(b) Area of sector OAB = $\frac{1}{2}(2)^2\theta = 2\theta \text{ (cm}^2\text{)}$ ^{↑ optional.} $2\theta - 2\sin\theta = 2$ $\therefore \theta - \sin\theta - 1 = 0$	1A 1M <hr/> 1A <hr/> 3																												
(c) $f(0) = 0 - 0 - 1 < 0$ $f(3) = 3 - \sin 3 - 1 (=1.859) > 0$ $\therefore 0 < \alpha < 3$ ^{if wrong, 1A is not given.} if omitted, no 1A) 1M <hr/> 1A <hr/> 2	For sub. $f(0)$, $f(3)$ Accept graphical method																											
(d) <table border="1" style="margin: 10px auto; border-collapse: collapse;"> <thead> <tr> <th style="padding: 5px;">Interval</th> <th style="padding: 5px;">Mid-value θ</th> <th style="padding: 5px;">$f(\theta)$</th> </tr> </thead> <tbody> <tr> <td style="padding: 5px;">$0 < \alpha < 3$</td> <td style="padding: 5px;">1.5</td> <td style="padding: 5px;">-</td> </tr> <tr> <td style="padding: 5px;">$1.5 < \alpha < 3$</td> <td style="padding: 5px;">2.25</td> <td style="padding: 5px;">+</td> </tr> <tr> <td style="padding: 5px;">$1.5 < \alpha < 2.25$</td> <td style="padding: 5px;">1.875 (1.88)</td> <td style="padding: 5px;">-</td> </tr> <tr> <td style="padding: 5px;">$1.875 < \alpha < 2.25$</td> <td style="padding: 5px;">2.063 (2.06)</td> <td style="padding: 5px;">+</td> </tr> <tr> <td style="padding: 5px;">$1.875 < \alpha < 2.063$</td> <td style="padding: 5px;">1.969 (1.97)</td> <td style="padding: 5px;">+</td> </tr> <tr> <td style="padding: 5px;">$1.875 < \alpha < 1.969$</td> <td style="padding: 5px;">1.922 (1.92)</td> <td style="padding: 5px;">-</td> </tr> <tr> <td style="padding: 5px;">$1.922 < \alpha < 1.969$</td> <td style="padding: 5px;">1.946 (1.95)</td> <td style="padding: 5px;">+</td> </tr> <tr> <td style="padding: 5px;">$1.922 < \alpha < 1.946$</td> <td></td> <td></td> </tr> </tbody> </table>	Interval		Mid-value θ	$f(\theta)$	$0 < \alpha < 3$	1.5	-	$1.5 < \alpha < 3$	2.25	+	$1.5 < \alpha < 2.25$	1.875 (1.88)	-	$1.875 < \alpha < 2.25$	2.063 (2.06)	+	$1.875 < \alpha < 2.063$	1.969 (1.97)	+	$1.875 < \alpha < 1.969$	1.922 (1.92)	-	$1.922 < \alpha < 1.969$	1.946 (1.95)	+	$1.922 < \alpha < 1.946$			1M+1A 1M 1A
Interval	Mid-value θ	$f(\theta)$																											
$0 < \alpha < 3$	1.5	-																											
$1.5 < \alpha < 3$	2.25	+																											
$1.5 < \alpha < 2.25$	1.875 (1.88)	-																											
$1.875 < \alpha < 2.25$	2.063 (2.06)	+																											
$1.875 < \alpha < 2.063$	1.969 (1.97)	+																											
$1.875 < \alpha < 1.969$	1.922 (1.92)	-																											
$1.922 < \alpha < 1.969$	1.946 (1.95)	+																											
$1.922 < \alpha < 1.946$																													
We see that α lies between 1.922 and 1.946. $\therefore \alpha = 1.9$ (correct to 1 d.p.)	<hr/> 1A <hr/> 5																												



Solution	Marks	Remarks
<p>13. (a) Since $p + q = 1$,</p> <p style="padding-left: 20px;">putting $p = 3q$</p> <p style="padding-left: 40px;">$4q = 1$</p> <p style="padding-left: 40px;">$q = \frac{1}{4}$</p>	1A	optional
	<u>1A</u>	<i>only $q = \frac{1}{4}$ 2A.</i>
	<u>2</u>	
<p>(b) (i) The probability that the first ball drawn is black is $\frac{n}{10}$.</p> <p>After a black ball has been drawn, the probability of drawing a second black ball is $\frac{n-1}{9}$.</p> <p>\therefore the probability that both balls are black</p> $= \frac{n}{10} \times \frac{n-1}{9}$ $= \frac{n(n-1)}{90}$	1A	
	1A	
	1M	<i>$\frac{n}{10} \times \frac{n-1}{9}$ 1A+1A+1M</i>
	1M	<i>$\frac{n}{10} \times \frac{n-1}{10}$ 1A+1M</i>
	1A	<i>wrong.</i>
<p>(ii) $\frac{n(n-1)}{90} > \frac{1}{3}$</p> <p>$3n^2 - 3n - 90 > 0$</p> <p>$n^2 - n - 30 > 0$</p> <p>$(n-6)(n+5) > 0$</p> <p>$\therefore n > 6$ or $n < -5$</p> <p>As n is integral and positive, $n = 7, 8, 9$ or 10.</p>	1M	
	1A	
	1A	Accept $n > 6$ with cond. $n < -5$
	<u>1A</u>	<i>by testing $n = 7, 8, 9, 10$ 3A</i>
	<u>7</u>	<i>all correct</i>
<p>(c) The probability that the first ball drawn is red and the second is also red = $\frac{1}{2} \times \frac{4}{6}$ ($= \frac{1}{3}$).</p> <p>The probability that the first is green and the second is red = $\frac{1}{2} \times \frac{3}{6}$ ($= \frac{1}{4}$).</p> <p>\therefore the probability that the ball drawn from N is red = $\frac{1}{3} + \frac{1}{4} = \frac{7}{12}$.</p>	1A	
	1A	
	1A	
	<u>1A</u>	
	<u>3</u>	
<i>no explicit only expression</i>		

Solution	Marks	Remarks
<p>14. (a)</p>	<p>1A + 1A + 1A</p> <p>1A</p> <hr/> <p>4</p>	<p>1A for each line</p> <p>±1 horizontal/ vertical unit at (100, 0), (0, 100); (20, 0), (60, 80); (0, 20), (100, 20)</p> <p>Region</p>
<p>(b) (i) $z = 100 - x - y$</p> <p>(ii) Cost of mixture = $6x + 5y + 4z$ $= 6x + 5y + 4(100 - x - y)$ $= 2x + y + 400$ dollars</p> <p>(iii) $400x + 600y + 400z \geq 44\ 000$ $800x + 200y + 400z \geq 48\ 000$ Putting $z = 100 - x - y$, $y \geq 20$ $2x - y \geq 40$</p> <p>Further, (as $z \geq 0$, $100 - x - y \geq 0$) $x + y \leq 100$</p> <p>(iv) Drawing the line $2x + y = 0$ in the figure, <small>why line at</small> the least cost is attained when $x = 30$, $y = 20$.</p> <p>$\therefore x = 30$, $y = 20$, $z = 50$</p>	<p>1A</p> <p>1A</p> <p>1A</p> <p>1A</p> <p>1A</p> <p>1A</p> <p>1M</p> <p>1A</p> <hr/> <p>8</p>	<p>or least optimal pt.</p> <p>Any line. Costs at (30, 20), (80, 20), $(\frac{140}{3}, \frac{160}{3})$ are 480, 580 and 546.7 (Any point)</p>