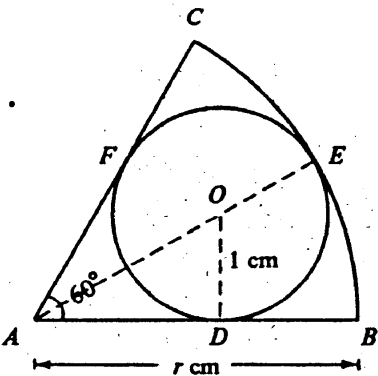


RESTRICTED 内部文件

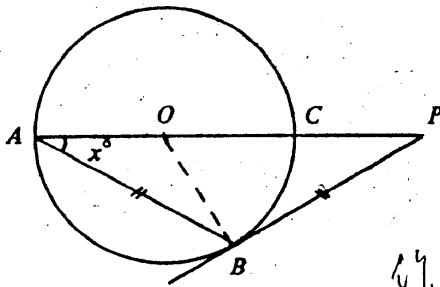
SOLUTION	MARKS	REMARKS
<p>1. (a) $x^2 - 2x + 1 = (x - 1)^2$</p> <p>(b) $x^2 - 2x + 1 - 4y^2 = (x - 1)^2 - 4y^2$</p> <p style="margin-left: 40px;">$= (x - 1 - 2y)(x - 1 + 2y) \dots$</p> <p style="margin-left: 40px;">$= (x - 2y - 1)(x + 2y - 1)$</p> <p style="margin-left: 40px;"><i>(2) (x-1-2y)(x-1+2y)</i></p>	<p>2A</p> <p>1M</p> <p>1M+1A</p> <hr style="width: 50%; margin: 0 auto;"/> <p>5</p>	<p>or $(x-1)(x-1)$</p> <p>for $()^2 - 4y^2$</p> <p>1M for diff. of 2 sq's. No marks for $x^2-4y^2=(x-2y)(x+2y)$</p>
<p>2. Let $f(x) = 2x^3 + ax^2 + bx - 2$</p> <p>Putting $x = 2$,</p> <p style="margin-left: 40px;">$f(2) = 4a + 2b + 14$</p> <p>As $x - 2$ divides $f(x)$, $4a + 2b + 14 = 0$.</p> <p>Similarly</p> <p style="margin-left: 40px;">$f(-1) = a - b - 4$</p> <p style="margin-left: 40px;">$= 0$</p> <p>Solving the equations, $6a + 6 = 0$</p> <p>$a = -1, b = -5$</p>	<p>1A</p> <p>1M</p> <p>1A</p> <hr style="width: 50%; margin: 0 auto;"/> <p>1A+1A</p> <hr style="width: 50%; margin: 0 auto;"/> <p>5</p>	<p>for $f(2) = 0$</p> <p>or $f(-1) = 0$</p>
<p>(Syll A)</p> <p>3. (a) $\sqrt{\frac{3^{5k+2}}{27^k}} = \sqrt{\frac{3^{5k+2}}{(3^3)^k}}$</p> <p style="margin-left: 40px;">$= 3^{k+1} \dots \dots \dots$</p> <p>(b) $\frac{\log a^3 b^2 - \log a b^2}{\log \sqrt{a}} = \frac{\log \frac{a^3 b^2}{a b^2}}{\log \sqrt{a}} \dots \dots \dots$</p> <p style="margin-left: 40px;">$= \frac{\log a^2}{\log \sqrt{a}}$</p> <p style="margin-left: 40px;">$= \frac{2 \log a}{\frac{1}{2} \log a} \dots \dots \dots$</p> <p style="margin-left: 40px;">$= 4$</p>	<p>1A</p> <p>1A</p> <p>1A</p> <p>1A</p> <hr style="width: 50%; margin: 0 auto;"/> <p>1A</p> <hr style="width: 50%; margin: 0 auto;"/> <p>5</p>	<p>or</p> <p>$= \frac{\log a^3 + \log b^2 - \log a - \log b^2}{\log \sqrt{a}}$</p> <p style="text-align: right;">1A</p> <p>$= \frac{3 \log a - \log a}{\frac{1}{2} \log a}$</p> <p style="text-align: right;">1A</p>
<p>(Syll B)</p> <p>3. $3^{2x} + 3^x - 2 = 0$</p> <p>$(3^x)^2 + 3^x - 2 = 0 \dots \dots \dots$</p> <p>$(3^x - 1)(3^x + 2) = 0$</p> <p>$3^x = 1$ or $3^x = -2$</p> <p>(Rejecting $3^x = -2$)</p> <p>$x = 0$</p>	<p>1M</p> <p>1A</p> <p>1A</p> <p>1A</p> <hr style="width: 50%; margin: 0 auto;"/> <p>1A</p> <hr style="width: 50%; margin: 0 auto;"/> <p>5</p>	<p>$(3^x)^2$</p> <p>)</p> <p>) Accept $3^x = 1$</p> <p>)</p>

RESTRICTED 内部文件

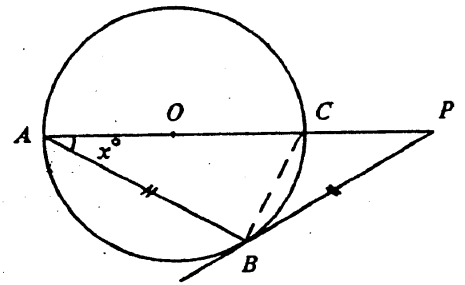
SOLUTION	MARKS	REMARKS
<p>4. $\sin^2\theta = \frac{3}{2} \cos\theta$</p> <p>$1 - \cos^2\theta = \frac{3}{2} \cos\theta$</p> <p>$2\cos^2\theta + 3\cos\theta - 2 = 0$</p> <p>$(2\cos\theta - 1)(\cos\theta + 2) = 0$</p> <p>$2\cos\theta = 1$ or $\cos\theta = -2$</p> <p>Rejecting $\cos\theta = -2$, we have</p> <p>$\cos\theta = \frac{1}{2}$</p> <p>$\theta = 60^\circ$ or 300° (or $\frac{\pi}{3}$, $\frac{5\pi}{3}$)</p>	<p>1A</p> <p>1A</p> <p>1A</p> <p>1A</p> <p>1A+1A</p> <hr style="width: 50%; margin-left: 0;"/> <p style="text-align: center;">6</p>	<p>)</p> <p>) Accept $2\cos\theta = 1$</p> <p>)</p> <p>-1 for each ex-traneous solution</p>
<p>5. $kx^2 - 4x + 2k = 0$</p> <p>$\alpha + \beta = \frac{4}{k}$</p> <p>$\alpha\beta = 2$</p> <p>(a) $\alpha^2 + \beta^2 = (\alpha + \beta)^2 - 2\alpha\beta$</p> <p>$= (\frac{4}{k})^2 - (2)(2)$</p> <p>$= \frac{16}{k^2} - 4$</p> <p>(b) $\frac{\alpha}{\beta} + \frac{\beta}{\alpha} = \frac{\alpha^2 + \beta^2}{\alpha\beta}$</p> <p>$= (\frac{16}{k^2} - 4) \cdot \frac{1}{2}$</p> <p>$= \frac{8}{k^2} - 2$</p>	<p>$\alpha + \beta = (-\frac{d}{k}) \pm \sqrt{(\frac{d}{k})^2 - 2(2)}$</p> <p>$= \frac{16 - 4k^2}{k^2}$</p> <p>1A</p> <p>1A</p> <p>1M</p> <p>1A</p> <p>1M</p> <p>1M</p> <hr style="width: 50%; margin-left: 0;"/> <p style="text-align: center;">6</p>	<p>or $\frac{16-4k^2}{k^2}$</p> <p>or equivalent.</p>
<p>6. By symmetry, $\angle BAE = 30^\circ$</p> <p>AS $OD \perp AB$,</p> <p>$\sin 30^\circ = \frac{1}{AO}$</p> <p>$\therefore AO = 2$</p> <p>$AE = AO + OE$</p> <p>$= 2 + 1$</p> <p>$= 3$</p> <p>$AB = AE$</p> <p>$\therefore r = 3$</p>	<p>1A</p> <p>1A</p> <p>1A</p> <p>1M</p> <p>1A</p> <hr style="width: 50%; margin-left: 0;"/> <p style="text-align: center;">6</p>	

SOLUTION	MARKS	REMARKS
----------	-------	---------

7.



作線 1分



Join OB.

As OA and OB are radii of the same circle,

$\angle OBA = \angle PAB = x^\circ$

Since PB is a tangent,

$\angle OBP = 90^\circ$

Given that BA = BP

$\angle BPA = \angle PAB = x^\circ$

$x + x + x + 90 = 180$

共有 $3x = 90$ 得2分
 $x = 30$

Alternatively:

1A Join BC.

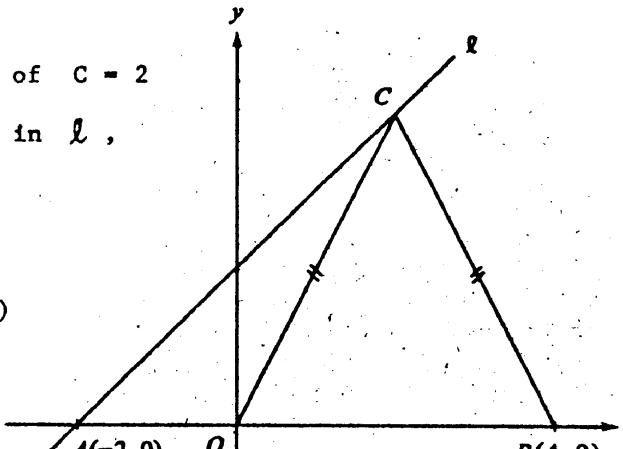
1A As PB is a tangent,
 $\angle CBP = \angle PAB = x^\circ$.

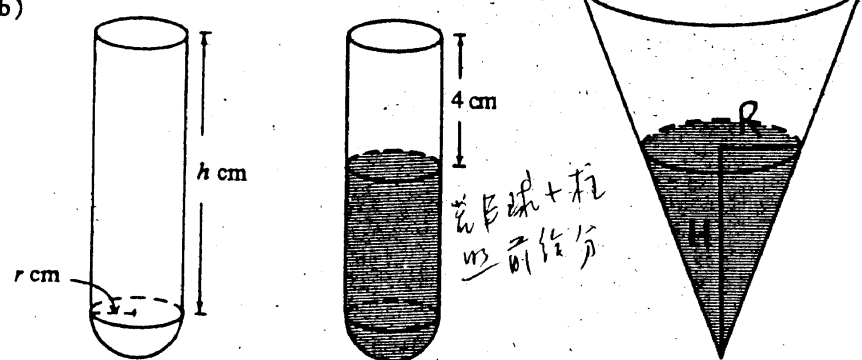
1A Since AC is a diameter, $\angle ABC = 90^\circ$ etc.

1A

1A

1A
6

SOLUTION	MARKS	REMARKS
<p>8. (a) Equation of l is $y - 0 = (1)[x - (-2)]$ (2) i.e. $y = x + 2$ (or $x - y + 2 = 0$)</p>	<p>1A 1A 2</p>	
<p>(b) As $CO = CB$, C lies on the perpendicular bisector of OB. (3) x-coordinate of $C = 2$ Substituting in l, $y = 2 + 2 = 4$ $\therefore C = (2, 4)$</p> 	<p>1M 1A 1A 3</p>	<p><u>Alternatively:</u> Let $C = (x, y)$ $\sqrt{x^2+y^2} = \sqrt{(x-4)^2+y^2}$ 1M $8x = 16$ $x = 2 \dots\dots 1A$</p>
<p>(c) Let the equation of the circle be (4) $x^2 + y^2 + ax + by + c = 0$. Substituting $(x, y) = (0, 0)$ or $(4, 0)$ or $(2, 4)$, $c = 0$ $16 + 4a = 0$ $4 + 16 + 2a + 4b = 0$ $a = -4$ $b = -3$ \therefore the equation of the circle is $x^2 + y^2 - 4x - 3y = 0$.</p> <p><i>Method</i> $(x-h)^2 + (y-k)^2 = r^2$ 1M Centre $(1, 1.5)$ Radius 1.5 eq. of circle</p>	<p>1M 1A 1A 1A 4</p>	<p><u>Alternatively:</u> The centre of the circle lies on the perpendicular bisector of OB (or OC, BC) 1M Let it be $(2, y)$ $(2-0)^2 + (y-0)^2 = (2-2)^2 + (y-4)^2$ $y = 3/2$ The centre is $(2, \frac{3}{2})$ 1A Radius of circle $= \sqrt{4 + \frac{9}{4}} = \frac{5}{2} \dots\dots 1A$ \therefore eqn. of circle is $(x-2)^2 + (y-\frac{3}{2})^2 = \frac{25}{4}$ 1A or $x^2 + y^2 - 4x - 3y = 0$</p>
<p>(d) Substituting $y = x + 2$ in the equation of the circle, (3) $x^2 + (x + 2)^2 - 4x - 3(x + 2) = 0$ $2x^2 - 3x - 2 = 0$ $(2x + 1)(x - 2) = 0$ $x = 2$ or $-\frac{1}{2}$ Putting $x = -\frac{1}{2}$ $y = \frac{3}{2}$ $\therefore D = (-\frac{1}{2}, \frac{3}{2})$</p> <p><i>若 $x = -\frac{1}{2}$ 仍合是</i> <i>若 $x = 2$ 仍合是</i> <i>若 $x = -\frac{1}{2}$ 仍合是</i></p>	<p>1M 1A 1A 3</p>	

SOLUTION	MARKS	REMARKS
<p>9. (a) (i) Capacity of hemispherical part</p> <p>(3) + (3)</p> $= \left(\frac{1}{2}\right)\left(\frac{4}{3}\right)\pi r^3$ <p style="margin-left: 100px;">若能写出有 r^3 之方根 则可得 1M.</p> $= \left(\frac{1}{6}\right)(108\pi)$ $r^3 = 27$ $r = 3 \dots\dots\dots$ <p>Capacity of cylindrical part</p> $= \pi r^2 h$ $= 9\pi h \dots\dots\dots$ <p style="margin-left: 100px;">若 r 有错, 仍给此 1M</p> $9\pi h = \left(\frac{5}{6}\right)(108\pi)$ $h = 10$ <p>(ii) Volume of space = $\pi(3^2)(4)$</p> <p>(3) Volume of water = $108\pi - (\pi)(3^2)(4)$</p> $= 72\pi \text{ cm}^3$ <p style="margin-left: 100px;">108π - 1M 若 r 有错 若不以 π 乘 不给</p>	<p>1M+1A</p> <p>1A</p> <p>1M</p> <p>1A</p> <p>1A</p> <p>1M+1M</p> <p style="border-top: 1px solid black;">1A</p> <p style="border-top: 1px solid black;">9</p>	<p>1M for setting up eqn in r^3. 1A for correct eqn.</p> <p>若写 $r = \dots$ cm 若给是</p> <p><u>Alternatively:</u> Volume $= \pi(3)^2(10-4) + \frac{108\pi}{6}$ \dots 1M+1M $= 72\pi \text{ cm}^3 \dots\dots\dots 1A$</p>
<p>(b)</p> <p>(3)</p>  <p>Let radius and depth of water be R and H.</p> $\frac{1}{3}\pi R^2 H = (72\pi)$ <p style="margin-left: 100px;">若能写出有 $R^2 H$ 之方根 则可得 1M 分</p> $R^2 H = 216$ <p>Capacity of vessel = $\frac{1}{3}\pi(2R)^2(2H)$</p> $= \frac{8}{3}\pi R^2 H$ $= \frac{8}{3}\pi \cdot (216)$ $= 576\pi \text{ cm}^3 \dots\dots\dots$	<p>1M</p> <p>1M</p> <p style="border-top: 1px solid black;">1A</p> <p style="border-top: 1px solid black;">3</p>	<p>若不写此 -1 if unit not given</p>
<p><u>Alternatively:</u></p> <p>Since height of vessel = 2 X height of water Capacity of vessel = $2^3 \times 72\pi$ $= 576\pi \text{ cm}^3 \dots\dots\dots$</p>	<p>2M</p> <p>1A</p> <p style="border-top: 1px solid black;">3</p>	<p>-1 if unit not given</p>

SOLUTION

MARKS

REMARKS

10. (a) Since the triangle is equilateral, $\angle A_1 = 60^\circ$,

(2)

$$T_1 = \frac{1}{2} (3)(3)(\sin 60^\circ)$$

$$= \frac{9\sqrt{3}}{4}$$

1M

1A

2

(b) (i) Since $A_2B_1 = 2$, $B_1B_2 = 1$ and $\angle B_1 = 60^\circ$,

(2)

$$\angle B_1B_2A_2 = 90^\circ$$

$$\therefore A_2B_2 = \sqrt{3} \dots\dots\dots$$

1M

1A

Alternatively:
By cosine rule,

$$(A_2B_2)^2 = 2^2 + 1^2 - 2(2)(1)\cos 60^\circ$$

$$= 3$$

$$\therefore A_2B_2 = \sqrt{3}$$

(ii) $\Delta A_2B_2C_2$ and $\Delta A_1B_1C_1$ are similar. The ratio of their sides is $\sqrt{3} : 3$.

(2)

$$\therefore T_2 = \frac{9\sqrt{3}}{4} \left(\frac{\sqrt{3}}{3}\right)^2$$

$$= \frac{3\sqrt{3}}{4} \dots\dots\dots$$

接受 $\frac{\sqrt{3}}{4}$

1M

1A

4

(c) (i) The common ratio = $\frac{1}{3}$ (1M, 若以未表示之 之和)

1M

(ii) $T_n = \frac{9\sqrt{3}}{4} \left(\frac{1}{3}\right)^{n-1}$

此比 $\frac{1}{3}$ (2)

1M

(iii) $T_1 + T_2 + \dots + T_n = \frac{9\sqrt{3}}{4} \cdot \frac{1 - \left(\frac{1}{3}\right)^n}{1 - \frac{1}{3}}$

1M

$$= \frac{27\sqrt{3}(1 - \frac{1}{3^n})}{8}$$

1A

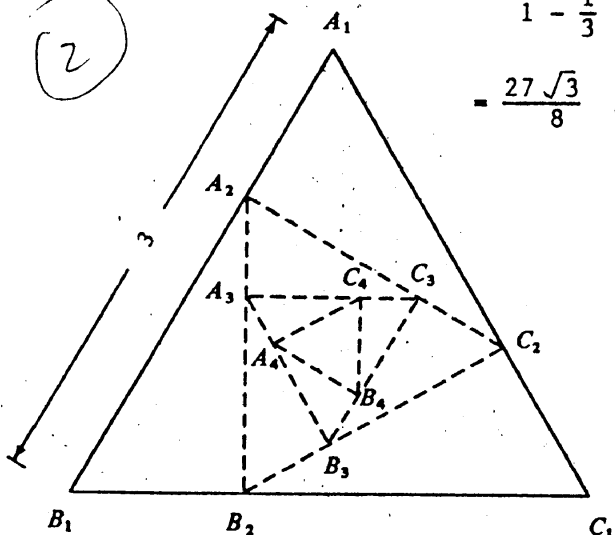
(iv) The sum to infinity = $\frac{\frac{9\sqrt{3}}{4}}{1 - \frac{1}{3}}$

1M

$$= \frac{27\sqrt{3}}{8} \dots\dots\dots$$

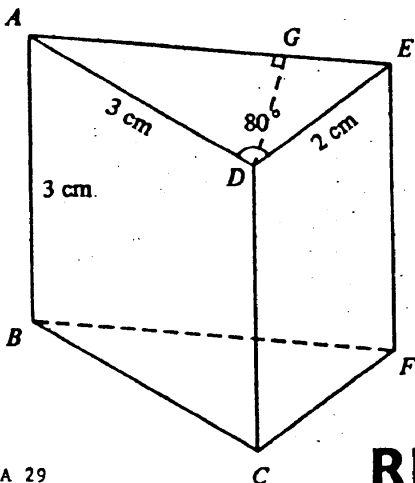
1A

6



RESTRICTED 内部文件

SOLUTION	MARKS	REMARKS
<p>11. (a) Consider $\triangle ADE$. By the cosine rule</p> <p>(3) $AE^2 = AD^2 + DE^2 - 2AD \cdot DE \cos \angle ADE$ (用余弦表示 $\triangle ADE$ 边)</p> <p style="margin-left: 40px;">$= 3^2 + 2^2 - 12\cos 80^\circ (= 10.91622)$</p> <p style="margin-left: 40px;">$AE = 3.304 \text{ cm (correct to 3 d.p.)}$</p>	<p>1M</p> <p>1A</p> <p><u>1A</u></p> <p><u>3</u></p>	<p>correct use of formula</p>
<p>(b) Consider $\triangle ADE$ again. By the sine rule,</p> <p>(3) $\frac{DE}{\sin \angle DAE} = \frac{AE}{\sin \angle ADE}$ (使用公式时与(a))</p> <p style="margin-left: 40px;">$\sin \angle DAE = \frac{DE \sin \angle ADE}{AE}$</p> <p style="margin-left: 80px;">$(= \frac{1.9696}{3.304} = 0.59613)$</p> <p style="margin-left: 40px;">$\angle DAE = 36.593^\circ$ (correct to 3 d.p.) (以分数表示, 不在此 1A 分)</p>	<p>2M</p> <p><u>1A</u></p> <p><u>3</u></p>	<p>or cos rule</p> <p>Accept 36.593-36.594</p>
<p>(c) $DG = AD \sin \angle DAE$</p> <p>(2) $(= 3 \sin 36.593^\circ)$ (不必以 cm 表示)</p> <p>$(= (3)(0.59613))$</p> <p>$= 1.788 \text{ cm (correct to 3 d.p.)}$</p>	<p>1M</p> <p><u>1A</u></p> <p><u>2</u></p>	<p>or $\sin \angle DAE = \frac{DG}{AD}$</p>
<p>(d) $BD^2 = AB^2 + AD^2$</p> <p>(2) $BD = \sqrt{18}$</p> <p>$= 4.243 \text{ cm (correct to 3 d.p.)}$</p>	<p>1M</p> <p><u>1A</u></p> <p><u>2</u></p>	
<p>(e) $\sin \angle DBG = \frac{DG}{BD}$</p> <p>(2) $(= \frac{1.788}{4.243} = 0.4214)$</p> <p>$\therefore \angle DBG = 24.923^\circ$ (correct to 3 d.p.)</p>	<p>1M</p> <p><u>1A</u></p> <p><u>2</u></p>	<p>Accept 24.920-24.940</p>



RESTRICTED 内部文件

SOLUTION	MARKS	REMARKS										
<p>12. (a) Given that $x \geq 0$</p> <p style="padding-left: 40px;">$y \geq 0$</p> <p>$4000x + 6000y \geq 24\ 000$</p> <p>Considering Products B and C,</p> <p style="margin-left: 20px;">② $20\ 000x + 5000y \geq 60\ 000$</p> <p style="margin-left: 40px;">$6000x + 3000y \geq 24\ 000$</p>	<p>1A</p> <hr style="width: 50%; margin: 0 auto;"/> <p>1A</p> <hr style="width: 50%; margin: 0 auto;"/> <p>2</p>	<p>Withhold 1A if '=' missing</p>										
<p>(b) The constraints in (a) can be written as</p> <p style="padding-left: 40px;">$x \geq 0$</p> <p style="padding-left: 40px;">$y \geq 0$</p> <p style="padding-left: 20px;">$2x + 3y \geq 12$</p> <p style="padding-left: 20px;">$4x + y \geq 12$</p> <p style="padding-left: 20px;">$2x + y \geq 8$</p> <p style="margin-left: 20px;">③</p> <p style="margin-left: 40px;">The lines corresponding to the last 3 inequalities are shown on the graph paper.</p> <p style="margin-left: 20px;">Shading the correct region.</p>	<p>1A+1A</p> <p>+1A</p> <p>3A</p> <hr style="width: 50%; margin: 0 auto;"/> <p>6</p>	<p>±1 unit at x,y axes</p> <p>-1 if shading not complete.</p> <p>-2 if only arrows used</p>										
<p>(c) Cost of materials used = $4000x + 3000y$ (dollars)</p> <p>Drawing the line $4000x + 3000y = 0$ (or equivalent)</p> <p style="margin-left: 40px;">(要其 slope 要正确) 不需要太准确</p> <p>The cost is least when $x = 3, y = 2$</p> <p>and the least cost is 18 000 (dollars)</p>	<p>1A</p> <p>1M</p> <p>1A</p> <p>1A</p> <hr style="width: 50%; margin: 0 auto;"/> <p>4</p>	<p>Candidates may also test all vertices of given region.</p> <p>Awarded only if region correct</p> <table style="width: 100%; border-collapse: collapse;"> <thead> <tr> <th style="border-bottom: 1px solid black;">Point</th> <th style="border-bottom: 1px solid black;">Cost</th> </tr> </thead> <tbody> <tr> <td>(6,0)</td> <td>24 000</td> </tr> <tr> <td>(3,2)</td> <td>18 000</td> </tr> <tr> <td>(2,4)</td> <td>20 000</td> </tr> <tr> <td>(0,12)</td> <td>36 000</td> </tr> </tbody> </table>	Point	Cost	(6,0)	24 000	(3,2)	18 000	(2,4)	20 000	(0,12)	36 000
Point	Cost											
(6,0)	24 000											
(3,2)	18 000											
(2,4)	20 000											
(0,12)	36 000											

用直线不接受
但不当作 region

不是 1/2 的 shading
不和 (PP-1)

不 Test
但 1/2 的 1M 分
不 Test 的 2
或 Test 的 2
不和 1M

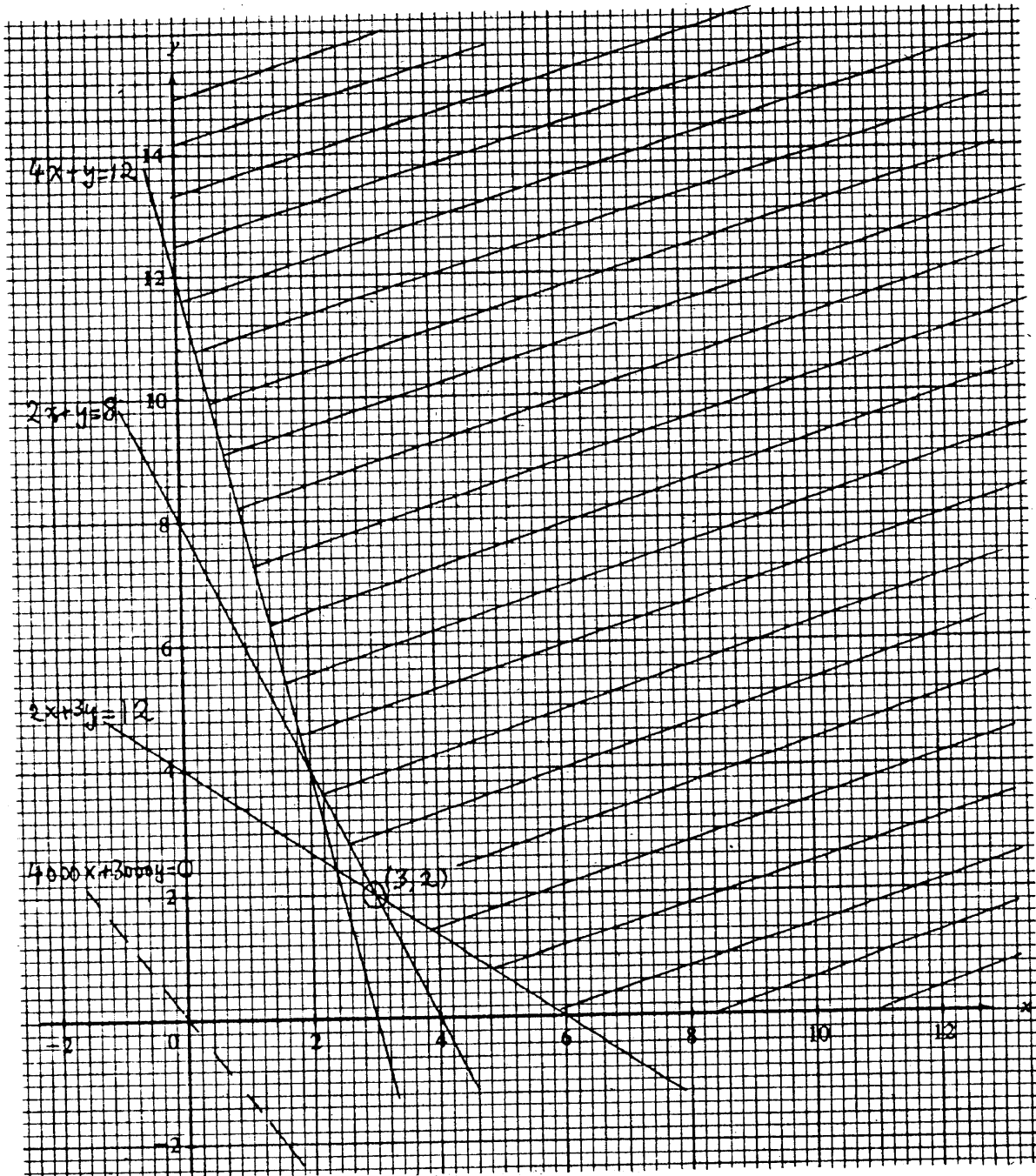
若 shading 相反 1/2 分
不和 (指 0)

1 单位, 不和

做 1/2 1A
{ 1/2 1/2 } checking 会 1/2 全对

要全代入

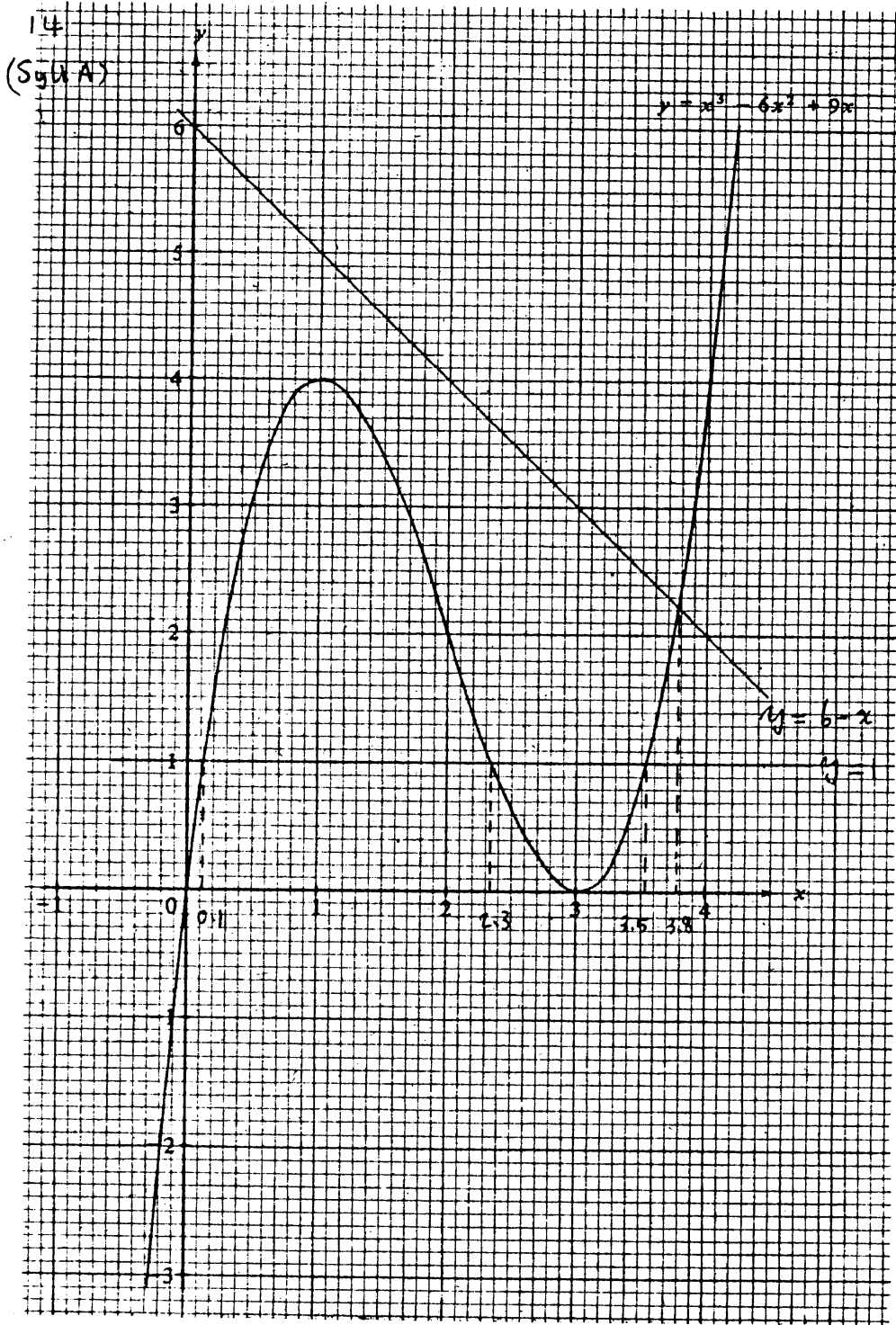
12.



RESTRICTED 内部文件

SOLUTION	MARKS	REMARKS
<p>13. (a) The probability that the black ball is not drawn = $\frac{5}{6}$ (or $1 - \frac{1}{6} = \frac{5}{6}$)</p> <p style="text-align: left;">②</p>	2A	Any value roundable to 0.83 P.P. if only answer is given. However, accept $P = 5/6$.
	<u>2</u>	
<p>(b) The probability that the black ball is drawn from P to Q in the 1st draw = $\frac{1}{6}$</p> <p style="text-align: left;">④</p> <p>After that, the probability that the black ball is not drawn from Q to R in the 2nd draw = $\frac{4}{5}$</p> <p>∴ the probability that the black ball is in Q</p> <p style="margin-left: 40px;"> $= \frac{1}{6} \times \frac{4}{5}$ $\frac{1}{6} + \frac{4}{5}$ 1+1 $= \frac{2}{15}$ (= $\frac{4}{30}$) $\frac{1}{6} \times \frac{4}{5} \times \dots$ 1+1 </p>	1A 1A	
	<u>2A</u> <u>4</u>	
<p>(c) The probability that the black ball is drawn from Q to R = $\frac{1}{5}$</p> <p style="text-align: left;">③</p> <p>∴ the probability that the black ball is in R</p> <p style="margin-left: 40px;"> $= \frac{1}{6} \times \frac{1}{5}$</p> <p style="margin-left: 40px;"> $= \frac{1}{30}$ = 0.03 $\frac{1}{6}$ 1A $\frac{1}{5}$ 1A </p>	1A 1A	<p><u>Alternatively:</u></p> <p>$1 - \frac{5}{6} - \frac{2}{15}$ (IM)</p> <p style="text-align: right;">2M</p>
	<u>1A</u> <u>3</u>	
<p>(d) The probability that a white ball is drawn from P to Q in the 1st draw = $\frac{3}{6}$ (= $\frac{1}{2}$)</p> <p style="text-align: left;">③</p> <p>After that, the probability that a white ball is drawn from Q to R in the 2nd draw = $\frac{1}{5}$</p> <p>∴ the probability that all balls in R are white = $\frac{1}{2} \times \frac{1}{5}$ 1+1</p> <p style="margin-left: 40px;"> $= \frac{1}{10}$</p> <p style="margin-left: 40px;"> $1 - (\frac{3}{6} \times \frac{4}{5} + \frac{3}{6} \times \frac{1}{5})$ 0.1 $\frac{1}{10}$ 3 </p>	1A 1A	<p>若不表示所求 概率者则</p> <p style="text-align: center;">(PP-1)</p> <p>若能表示理由 亦有正确答案 给全部分</p>
	<u>1A</u> <u>3</u>	

SOLUTION	MARKS	REMARKS								
<u>(Syllabus A)</u>										
14. (a) (i) $x^3 - 6x^2 + 9x - 1 = 0$ (3) $x^3 - 6x^2 + 9x = 1$ Drawing the line $y = 1$, the roots of the given equation were found to be 0.1, 2.3 and 3.5 (correct to 1 d.p.). (ii) $x^3 - 6x^2 + 10x - 6 = 0$ (3) $x^3 - 6x^2 + 9x = 6 - x$ Drawing the line $y = 6 - x$, the root was found to be 3.8 (correct to 1 d.p.) 前二答案 1分 第三 1分 不准 - 位小 数 不准 1分 3.7 2.1 1A	1M 1A+1A 1M 1A 1A <hr style="width: 50%; margin-left: 0;"/> 6	1 mark for 2 correct answers for correct L.S. for graph, ±/unit at (3,3), (4,2)								
(b) (3) <table border="1" style="display: inline-table; margin: 10px;"> <thead> <tr> <th style="width: 15%;">x</th> <th style="width: 85%;">$x^3 - 6x^2 + 10x - 6$</th> </tr> </thead> <tbody> <tr> <td>3.76</td> <td>- (= -0.068)</td> </tr> <tr> <td>3.77</td> <td>+ (= 0.005)</td> </tr> <tr> <td>3.765</td> <td>- (= -0.031)</td> </tr> </tbody> </table> - change sign's } 1 M.)))) ...)) 3.768 - 3.769 之 根 (图)	x	$x^3 - 6x^2 + 10x - 6$	3.76	- (= -0.068)	3.77	+ (= 0.005)	3.765	- (= -0.031)	1M 1A 1A <hr style="width: 50%; margin-left: 0;"/> 1A <hr style="width: 50%; margin-left: 0;"/> 3	Change of sign, -ve for 3.765-3.769 May use graphical method
x	$x^3 - 6x^2 + 10x - 6$									
3.76	- (= -0.068)									
3.77	+ (= 0.005)									
3.765	- (= -0.031)									
∴ $x = 3.77$ (correct to 2 d.p.)	<hr style="width: 50%; margin-left: 0;"/> 3									
(c) Consider $x^3 - 6x^2 + 9x = k$ ← 4 个 点 From the graph, if $0 < k < 4$, the line $y = k$ meets the curve $y = x^3 - 6x^2 + 9x$ at three distinct points. ∴ $x^3 - 6x^2 + 9x - k = 0$ has three distinct roots.	1M 1A+1A <hr style="width: 50%; margin-left: 0;"/> 3	-1 for ' $<$ ' if otherwise correct. may omit								



记
下
手
此
图
存
生
考
数

150
一
分
是
子

SOLUTION	MARKS	REMARKS
(Syllabus B)		
14. (a) Since $y \propto x$ and $z \propto \frac{1}{x}$, $y = k_1x$ and $z = \frac{k_2}{x}$ (for some real k_1, k_2).	1A+1A	Accept $y = kx, z = \frac{k}{x}$
$\therefore p = k_1x + \frac{k_2}{x}$		
Putting $x = 2, p = 7$, (or $x = 3, p = 8$)	1M	
$7 = 2k_1 + \frac{k_2}{2}$	1A	
i.e. $4k_1 + k_2 = 14$		
Putting $x = 3, p = 8$.		
$8 = 3k_1 + \frac{k_2}{3}$	1A	
or $9k_1 + k_2 = 24$		
Solving these two equations,		
$5k_1 = 10$		
$k_1 = 2$	1A	
$k_2 = 6$	1A	
$\therefore p = 2x + \frac{6}{x}$		
When $x = 4$, $p = 2(4) + \frac{6}{4}$		
$= \frac{19}{2}$	<u>1A</u> <u>8</u>	
(b) $2x + \frac{6}{x} < 13$	1M	
$2x^2 - 13x + 6 < 0$ (as $x > 0$)	1A	
$(2x - 1)(x - 6) < 0$		
$\therefore \frac{1}{2} < x < 6$	<u>2A</u> <u>4</u>	-1 for ' \leq '