

Solution	Marks	Remarks	
1. $mx = 2(m + c)$ $mx = 2m + 2c$ $mx - 2m = 2c$ $m(x - 2) = 2c$ $m = \frac{2c}{x - 2}$	1M 1M 1A -----(3)	for putting m on one side for factorization	
2. For $\frac{3-5x}{4} \geq 2-x$, we have $3-5x \geq 4(2-x)$ $3-5x \geq 8-4x$ $4x-5x \geq 8-3$ $-x \geq 5$ $x \leq -5$ For $x+8 > 0$, we have $x > -8$ So, the required solution is $x > -8$ and $x \leq -5$. Thus, the required solution is $-8 < x \leq -5$.	1M 1A 1A -----(3)	for putting x on one side do not accept graphical solution	
3. (a) $x^2 - (y-z)^2$ $= (x + (y-z))(x - (y-z))$ $= (x + y - z)(x - y + z)$ (b) $ab - ad - bc + cd$ $= a(b-d) - c(b-d)$ $= (a-c)(b-d)$	$b(a-c) - d(a-c)$	1A 1M 1A -----(3)	for taking out common factors
4. $4^{x+1} = 8$ $2^{2(x+1)} = 2^3$ $2^{2x+2} = 2^3$ $2x+2 = 3$ $2x = 1$ $x = \frac{1}{2}$	1M 1M 1A	for same base (2, 4 or 8 only) for equating the powers	
$4^{x+1} = 8$ $\log(4^{x+1}) = \log 8$ $(x+1)\log 4 = \log 8$ $x+1 = \frac{\log 8}{\log 4}$ $x+1 = \frac{3}{2}$ $x = \frac{1}{2}$	1M 1M 1A	for taking log for putting log on one side	
-----(3)			

Solution	Marks	Remarks
5. (a) The selling price of the handbag $= 400(1 + 20\%)(0.75)$ $= \$360$ <div style="border: 1px solid black; display: inline-block; padding: 2px; margin-left: 100px;">$400(1 + 20\%)(1 - 25\%)$</div> (b) Percentage loss $= \frac{400 - 360}{400} \times 100\%$ $= 10\%$	1A 1A 1M 1A -----(4)	u-1 for missing unit accept without 100%
6. Let x be the number of first-class tickets sold. Then, the number of economy-class tickets sold is $3x$. Therefore, we have $x + 3x = 600$ $4x = 600$ $x = 150$ The sum of money for the tickets sold $= (150)(850) + (3)(150)(500)$ $= \$352\,500$	1A 1A 1M 1A	can be absorbed u-1 for missing unit r.t. \$353 000
<div style="border: 1px solid black; padding: 5px;"> The number of first-class tickets sold $= (600) \left(\frac{1}{1+3} \right)$ $= 150$ </div> <div style="border: 1px solid black; padding: 5px; margin-top: 5px;"> The number of economy-class tickets sold $= 600 - 150$ $= 450$ </div> <div style="border: 1px solid black; padding: 5px; margin-top: 5px;"> The sum of money for the tickets sold $= (150)(850) + (450)(500)$ $= \\$352\,500$ </div>	1A 1A 1M 1A -----(4)	for either one and can be absorbed u-1 for missing unit r.t. \$353 000
7. (a) Common difference $= 5 - 2$ $= 3$ The 10th term $= 2 + (10 - 1)(3)$ $= 29$ (b) The sum of the first 10 terms $= \frac{10}{2}(2 + 29)$ $= 155$ <div style="border: 1px solid black; display: inline-block; padding: 2px; margin-left: 100px;">$\frac{10}{2}((2)(2) + (10 - 1)(3))$</div>	1A 1A 1M 1A	for $\frac{10}{2}(2 + (a))$
(a) Note that the arithmetic sequence is 2, 5, 8, 11, 14, 17, 20, 23, 26, 29, ... The 10th term = 29 (b) The sum of the first 10 terms $= 2 + 5 + 8 + 11 + 14 + 17 + 20 + 23 + 26 + 29$ $= 155$	1A 1A 1M 1A -----(4)	for $2 + \dots + (a)$

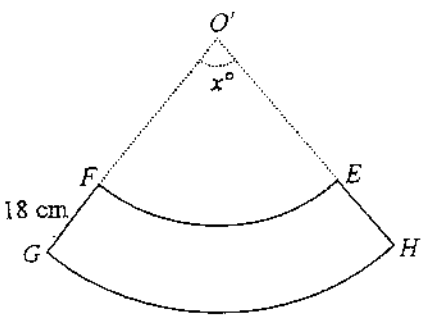
Solution	Marks	Remarks
8. (a) In $\triangle ABC$ and $\triangle CDA$, $\angle CAB = \angle ACD$ (alternate \angle s, $AB \parallel DC$) $\angle ACB = \angle CAD$ (alternate \angle s, $BC \parallel AD$) $AC = CA$ (common side) $\therefore \triangle ABC \cong \triangle CDA$ (ASA)		[(內)錯角, $AB \parallel DC$] [(內)錯角, $BC \parallel AD$] [公共邊]
Marking Scheme :		
Case 1 Any correct proof with correct reasons.	2	
Case 2 Any correct proof without reasons.	1	
(b) $\triangle ABD \cong \triangle CDB$ $\triangle ABE \cong \triangle CDE$ $\triangle AED \cong \triangle CEB$		
Marking Scheme :		
Case 1 There are exactly three pairs of triangles and all of them are correct.	2	
Case 2 Any one pair is correct.	1	
	-----(4)	
9. (a) The shortest distance $= 100 \sin 60^\circ$ $= 50\sqrt{3}$ ≈ 86.60254038 $\approx 87 \text{ km}$	1M	
	1A	u-1 for missing unit
(b) The distance travelled by S between 1:00 a.m. and when it is nearest to L $= 100 \cos 60^\circ$ $= 50 \text{ km}$	1M	accept $\frac{87}{\tan 60^\circ}$
The distance travelled by S between 1:00 a.m. and when it is nearest to L $= \sqrt{100^2 - (50\sqrt{3})^2}$ $= \sqrt{2500}$ $= 50 \text{ km}$	1M	for $\sqrt{100^2 - (a)^2}$
The time taken $= \frac{50}{20}$ $= 2.5 \text{ hours}$	1M	
Therefore, S will be nearest to L at 3:30 a.m.	1A	do not accept 2.5 hours after 1:00 a.m.
	-----(5)	

Solution	Marks	Remarks
10. (a) Let $V = aL^2 + bL$, where a and b are constants.	1A	
When $L = 10$, $V = 30$, so we have $100a + 10b = 30$ $10a + b = 3$ (1)	} 1M	for substitution (either one)
When $L = 15$, $V = 75$, so we have $225a + 15b = 75$ $15a + b = 5$ (2)		
Solving (1) and (2), we have $\begin{cases} a = \frac{2}{5} \\ b = -1 \end{cases}$	} 1A	for both correct
$\therefore V = \frac{2}{5}L^2 - L$		
(b) When $V \geq 30$, we have $\frac{2}{5}L^2 - L \geq 30$ (by(a)). Therefore, we have	1M	for putting the result of (a) into $V \geq 30$
$2L^2 - 5L - 150 \geq 0$	1M	in the form $k_1L^2 + k_2L + k_3 \geq 0$
$(2L + 15)(L - 10) \geq 0$		
$L \geq 10$ or $L \leq -7.5$	1A	
Since $5 \leq L \leq 25$, we have $10 \leq L \leq 25$.	1A	accept ' $L \geq 10$ and $L \leq 25$ ' but do not accept graphical solution

Solution	Marks	Remarks
11. (a) (i) The mode = 10	1A	
(ii) The median $= \frac{11+12}{2}$ = 11.5	1A	
(iii) The mean $= \frac{10+10+11+12+13+16}{6}$ = 12	1A	
(iv) The range $= 16-10$ = 6	1A	
	-----(4)	
(b) (i) The median will be the least when the four unknown data are at most equal to 10. The least possible value of the median $= \frac{10+10}{2}$ = 10	1A	
The median will be the greatest when the four unknown data are at least equal to 16. The greatest possible value of the median $= \frac{13+16}{2}$ = 14.5	1A	
(ii) The required mean $= \frac{(12)(6)+(11)(4)}{6+4}$ = 11.6	1M 1A	for (11)(4) = sum of the four unknown data
	-----(4)	

Solution	Marks	Remarks
12. (a) The slope of BC $= \frac{3-0}{0-2}$ $= \frac{-3}{2}$	1A	accept -1.5 or $-1\frac{1}{2}$
-----(1)		
(b) The slope of AP $= \frac{-1}{-1.5}$ $= \frac{2}{3}$	1M	can be absorbed
The equation of AP is:		
$\frac{y-0}{x-(-1)} = \frac{2}{3}$	1M	for point-slope form
$2x - 3y + 2 = 0$	1A	accept $y = \frac{2x}{3} + \frac{2}{3}$
-----(3)		
(c) (i) Let the coordinates of H be $(0, h)$. Then, by (b), $2(0) - 3h + 2 = 0$	1M	for putting $x = 0$ into (b)
$h = \frac{2}{3}$	1A	
Thus, the coordinates of H are $(0, \frac{2}{3})$.		
(ii) The slope of $AC = \frac{3-0}{0-(-1)} = 3$	1A	
Suppose the altitude from B to AC cuts AC at Q .		
The slope of $BQ = \frac{-1}{3}$	1M	
The equation of BQ is: $\frac{y-0}{x-2} = \frac{-1}{3}$ $x + 3y - 2 = 0$		or, the slope of $BH = \frac{0-\frac{2}{3}}{2-0} = \frac{-1}{3}$
Note that $0 + (3)(\frac{2}{3}) - 2 = 2 - 2 = 0$		
Hence, the three altitudes pass through the same point H .	1	
Note that the slope of $BH = \frac{0-\frac{2}{3}}{2-0} = \frac{-1}{3}$ and the slope of $AC = \frac{3-0}{0-(-1)} = 3$ \therefore (the slope of BH) (the slope of AC) = $(\frac{-1}{3})(3) = -1$ $\therefore BH \perp AC$ Hence, the three altitudes pass through the same point H .	1M 1A 1	
-----(5)		

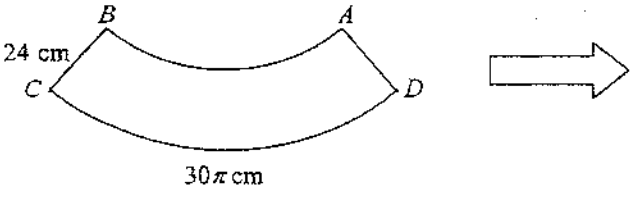

Solution	Marks	Remarks
13. (a) (i) $\frac{x}{360} = \frac{30\pi}{(2\pi)(56+24)}$ $x = 67.5$	1M 1A	for $\frac{x}{360} = \frac{30\pi}{2\pi r}$ u-1 for having unit
$30\pi = (56+24)\left(\frac{x\pi}{180}\right)$ $x = 67.5$	1M 1A	for $30\pi = r\left(\frac{x\pi}{180}\right)$ u-1 for having unit
(ii) The required area = area of sector ODC - area of sector OAB = $\left(\frac{67.5}{360}\right)\left((56+24)^2\pi\right) - \left(\frac{67.5}{360}\right)\left(56^2\pi\right)$ = $1200\pi - 588\pi$ = $612\pi \text{ cm}^2$	1M 1A	for either one u-1 for missing unit
The required area = area of sector ODC - area of sector OAB = $\frac{1}{2}(56+24)^2\left(\frac{67.5\pi}{180}\right) - \frac{1}{2}(56^2)\left(\frac{67.5\pi}{180}\right)$ = $1200\pi - 588\pi$ = $612\pi \text{ cm}^2$	1M 1A	for either one u-1 for missing unit
-----(4)		
(b) (i) The required area = $(612\pi)\left(\frac{18}{24}\right)^2$ = $\frac{1377}{4}\pi \text{ cm}^2$	1M 1A	for $\left(\frac{18}{24}\right)^2$ accept $344.25\pi \text{ cm}^2$ or $344\frac{1}{4}\pi \text{ cm}^2$ u-1 for missing unit



$\therefore \frac{FO'}{BO} = \frac{FG}{BC}$
 $\therefore \frac{FO'}{56} = \frac{18}{24}$
 Hence, $FO' = 42 \text{ cm}$

The required area
 = $\frac{1}{2}(42+18)^2\left(\frac{67.5\pi}{180}\right) - \frac{1}{2}(42^2)\left(\frac{67.5\pi}{180}\right)$
 = $\frac{1377}{4}\pi \text{ cm}^2$

	1M	
	1A	accept $344.25\pi \text{ cm}^2$ or $344\frac{1}{4}\pi \text{ cm}^2$ u-1 for missing unit

Solution	Marks	Remarks
<p>(ii) $2\pi r = \left(\frac{18}{24}\right)(30\pi)$</p> <p>$2\pi r = 22.5\pi$</p> <p>$r = \frac{45}{4}$</p>	<p>1M+1M</p> <p>1A</p>	<p>1M for $\left(\frac{18}{24}\right)(30\pi) +$</p> <p>1M for equating $2\pi r$</p> <p>accept 11.25 r.t. 11.3</p>
<div style="display: flex; align-items: center; justify-content: center;">  </div> <p>$\therefore 2\pi s = 30\pi$</p> <p>$\therefore s = 15$</p> <p>$\therefore r = \left(\frac{FG}{BC}\right)s$</p> <p>$\therefore r = \left(\frac{18}{24}\right)(15)$</p> <p>Thus, $r = \frac{45}{4}$</p>	<p>1M</p> <p>1M</p> <p>1A</p>	<div style="text-align: center;">  <p>s cm</p> </div> <p>for equating $2\pi s$</p> <p>accept 11.25 r.t. 11.3</p>

(5)

Solution	Marks	Remarks
<p>14. (a) By cosine formula, we have</p> $\cos \angle OAC = \frac{3^2 + 6^2 - 4^2}{(2)(3)(6)}$ $\angle OAC \approx 36.33605751^\circ$ $\angle OAC \approx 36.3^\circ$	<p>1A</p> <p>1A</p> <p>(2)</p>	<p></p> <p>u-1 for missing unit</p>
<p>(b) (i) $\tan 40^\circ = \frac{BC}{4}$</p> $BC = 4 \tan 40^\circ$ $BC \approx 3.356398525$ $BC \approx 3.36 \text{ m}$ $\tan 30^\circ = \frac{4 \tan 40^\circ}{CD}$ $CD \approx 5.813452775$ $CD \approx 5.81 \text{ m}$	<p>1A</p> <p>1M</p> <p>1A</p>	<p>for either one correct</p> <p>accept $\tan 30^\circ \approx \frac{3.36}{CD}$</p> <p>u-1 for missing unit r.t. 5.81</p>
<p>(ii) By cosine formula, we have</p> $\cos \angle CAD = \frac{6^2 + 8^2 - CD^2}{(2)(8)(6)}$ $\cos \angle CAD \approx 0.083086497$ $\angle CAD \approx 46.39976045^\circ$ $\angle CAD \approx 46.4^\circ$	<p>1M</p> <p>1A</p>	<p>with CD substituted</p> <p>u-1 for missing unit r.t. 46.4°</p>
<p>(iii) By sine formula, we have</p> $\frac{CE}{\sin \angle EAC} = \frac{6}{\sin \theta} \quad \text{and} \quad \frac{ED}{\sin \angle EAD} = \frac{8}{\sin(180^\circ - \theta)}$ <p>So, $\frac{6 \sin 36.33605751^\circ}{\sin \theta} + \frac{8 \sin 10.06370296^\circ}{\sin(180^\circ - \theta)} \approx CD$</p> $\frac{3.5554215}{\sin \theta} + \frac{1.397944043}{\sin \theta} \approx 5.813452775$ $\sin \theta \approx 0.85200065$ $\theta \approx 58.42994248^\circ$ $\theta \approx 58.4^\circ (\because \theta \text{ is acute})$	<p>1M</p> <p>1M</p> <p>1M</p> <p>1A</p>	<p>for either one with angle substituted</p> <p>with CD substituted</p> <p>for making $\sin \theta$ the subject</p> <p>u-1 for missing unit r.t. 58.4°</p>
<p>By cosine formula, we have</p> $\cos \angle ACD = \frac{6^2 + CD^2 - 8^2}{(2)(6)(CD)}$ $\cos \angle ACD \approx 0.083086497$ $\angle ACD \approx 85.234000001^\circ$ <p>$\therefore \angle EAC + \angle ACD + \theta = 180^\circ$ (\angle sum of Δ)</p> $36.33605751^\circ + 85.234000001^\circ + \theta = 180^\circ$ $\theta \approx 58.42994248^\circ$ <p>Thus, $\theta \approx 58.4^\circ$</p>	<p>2M</p> <p>1M</p> <p>1A</p> <p>(9)</p>	<p>with CD substituted</p> <p>u-1 for missing unit r.t. 58.4°</p>

Solution	Marks	Remarks						
<p>15. (a) (i) The required area = $\frac{1}{2}k(1-k)\sin 60^\circ$ $= \frac{\sqrt{3}}{4}k(1-k)\text{ m}^2$</p> <p>(ii) By cosine formula, we have $x^2 = k^2 + (1-k)^2 - 2k(1-k)\cos 60^\circ$ $x^2 = 3k^2 - 3k + 1$ $x = \sqrt{3k^2 - 3k + 1}$</p> <p>(iii) By symmetry, $A_1B_1 = B_1C_1 = C_1A_1 = x\text{ m}$. Thus, $A_1B_1C_1$ is an equilateral triangle.</p>	<p>1M</p> <p>1A</p> <p>1M</p> <p>1A</p> <p>1</p> <p>-----(5)</p>	<p>for $\frac{1}{2}ab\sin 60^\circ$</p> <p>u-1 for missing unit</p> <p>for $x^2 = a^2 + b^2 - 2ab\cos 60^\circ$</p>						
<p>(b) (i) $\therefore \frac{A_2B_1}{A_1B_0} = \frac{x(1-k)}{1-k} = x = \frac{xk}{k} = \frac{B_2B_1}{B_1B_0}$ $\angle A_2B_1B_2 = 60^\circ = \angle A_1B_0B_1$ $\therefore \Delta A_1B_0B_1 \sim \Delta A_2B_1B_2$ (ratio of 2 sides, inc. \angle)</p>		<p>[兩邊成比例且夾角相等]</p>						
<table border="1"> <tr> <td colspan="2">Marking Scheme :</td> </tr> <tr> <td>Case 1 Any correct proof with correct reasons.</td> <td>2</td> </tr> <tr> <td>Case 2 Any correct proof without reasons.</td> <td>1</td> </tr> </table>			Marking Scheme :		Case 1 Any correct proof with correct reasons.	2	Case 2 Any correct proof without reasons.	1
Marking Scheme :								
Case 1 Any correct proof with correct reasons.	2							
Case 2 Any correct proof without reasons.	1							
<p>(ii) $\therefore \Delta A_1B_0B_1 \sim \Delta A_2B_1B_2 \sim \Delta A_3B_2B_3 \sim \dots$ \therefore their areas form a geometric sequence with a common ratio x^2.</p> <p>So, the total area $= \frac{\sqrt{3}}{4}k(1-k) + \frac{\sqrt{3}}{4}k(1-k)x^2 + \frac{\sqrt{3}}{4}k(1-k)x^4 + \dots$ $= \frac{\sqrt{3}}{4}k(1-k)$ $= \frac{\sqrt{3}}{4}k(1-k)$ $= \frac{\sqrt{3}}{4}k(1-k)$ (by (a)(ii)) $= \frac{\sqrt{3}}{12}\text{ m}^2$</p>	<p>1A</p> <p>1M</p> <p>1M</p> <p>1A</p> <p>-----(6)</p>	<p>can be absorbed</p> <p>for (a)(i) $\frac{1}{1-r}$</p> <p>u-1 for missing unit</p>						

Solution	Marks	Remarks									
16. (a) The required probability = $\left(1 - \frac{1}{10}\right)\left(\frac{1}{2}\right)$ $= \frac{9}{20}$	1M 1A	for $\left(1 - \frac{1}{10}\right)P_1$, where $0 < P_1 < 1$ 0.45									
-----(2)											
(b) (i) The required probability = $\left(1 - \frac{2}{25}\right)\left(\frac{1}{2}\right)$ $= \frac{23}{50}$	1M 1A	for $\left(1 - \frac{2}{25}\right)P_2$, where $0 < P_2 < 1$ 0.46									
(ii) (1) The required probability = $\left(\frac{2}{3}\right)\left(\frac{9}{20}\right) + \left(\frac{1}{3}\right)\left(\frac{23}{50}\right)$ $= \frac{34}{75}$	1M+1M+1A 1A	1M for $\left(\frac{2}{3}\right)(a)$ + 1M for $\left(\frac{1}{3}\right)((b)(i))$ r.t. 0.453									
(2) <table border="1" style="margin-left: 20px;"> <thead> <tr> <th>Transportation</th> <th>Transportation Cost</th> <th>Transportation Cost + \$15 Lunch</th> </tr> </thead> <tbody> <tr> <td>Bus and Train</td> <td>\$12</td> <td>\$27</td> </tr> <tr> <td>Train and Train</td> <td>\$15</td> <td>\$30</td> </tr> </tbody> </table>	Transportation	Transportation Cost	Transportation Cost + \$15 Lunch	Bus and Train	\$12	\$27	Train and Train	\$15	\$30		
Transportation	Transportation Cost	Transportation Cost + \$15 Lunch									
Bus and Train	\$12	\$27									
Train and Train	\$15	\$30									
The required probability $= 1 - \frac{34}{75}$ $= \frac{41}{75}$	2M 1A	for $1 - (b)(ii)(1)$ r.t. 0.547									
The required probability = P(John will spend more than a total of \$30) = P(John will spend more than a total of \$22.5 for the morning trip and lunch) $= \left(\frac{2}{3}\right)\left(\frac{1}{10}\right) + \left(1 - \frac{1}{10}\right)\left(\frac{1}{2}\right) + \left(\frac{1}{3}\right)\left(\frac{2}{25}\right) + \left(1 - \frac{2}{25}\right)\left(\frac{1}{2}\right)$ $= \frac{1}{15} + \frac{3}{10} + \frac{2}{75} + \frac{23}{150}$ $= \frac{41}{75}$	1A+1A 1A	1A for either one correct + 1A for all correct r.t. 0.547									
The required probability = P(John will spend more than a total of \$30) = P(John will spend more than a total of \$22.5 for the morning trip and lunch) $= \left(\frac{2}{3}\right)\left(\frac{1}{10}\right)\left(\frac{1}{2}\right) + \left(\frac{2}{3}\right)\left(\frac{1}{10}\right)\left(\frac{1}{2}\right) + \left(\frac{2}{3}\right)\left(\frac{9}{10}\right)\left(\frac{1}{2}\right) +$ $\left(\frac{1}{3}\right)\left(\frac{2}{25}\right)\left(\frac{1}{2}\right) + \left(\frac{1}{3}\right)\left(\frac{2}{25}\right)\left(\frac{1}{2}\right) + \left(\frac{1}{3}\right)\left(\frac{23}{25}\right)\left(\frac{1}{2}\right)$ $= \frac{1}{30} + \frac{1}{30} + \frac{3}{10} + \frac{1}{75} + \frac{1}{75} + \frac{23}{150}$ $= \frac{41}{75}$	1A+1A 1A	1A for either one correct + 1A for all correct r.t. 0.547									
-----(9)											

Solution	Marks	Remarks
<p>17. (a) (i) In $\triangle NPM$ and $\triangle NKP$,</p> <p>$\angle NPM = \angle NKP$ (\angle in alt. segment)</p> <p>$\angle MNP = \angle PNK$ (common angle)</p> <p>$\angle NMP = \angle NPK$ (\angle sum of Δ)</p> <p>$\therefore \triangle NPM \sim \triangle NKP$ (AAA)</p> <p>So, $\frac{NP}{NK} = \frac{NM}{NP}$</p> <p>Thus, we can conclude that $NP^2 = NK \cdot NM$.</p>		<p>[交錯弓形的圓周角] · [弦切角定理]</p> <p>[公共角]</p> <p>[圓內角和]</p> <p>[等角] (AA) (equiangular)</p>
Marking Scheme :		
Case 1 Any correct proof with correct reasons.	3	
Case 2 Any correct proof without reasons.	2	
Case 3 Any one line except the first line and the conclusion.	1	
<p>(ii) $\therefore NP^2 = NK \cdot NM$ and $ON^2 = NK \cdot NM$ (by (a)(i))</p> <p>$\therefore NP^2 = ON^2$</p> <p>$\therefore NP = ON$</p> <p>$\therefore RS \parallel OP$</p> <p>$\therefore \triangle KRM \sim \triangle KON$ (AAA) and $\triangle KMS \sim \triangle KNP$ (AAA)</p> <p>$\therefore \frac{RM}{ON} = \frac{KM}{KN}$ and $\frac{MS}{NP} = \frac{KM}{KN}$</p> <p>$\therefore \frac{RM}{ON} = \frac{MS}{NP}$</p> <p>$\therefore RM = MS$</p>	<p>1</p> <p>1</p> <p>(5)</p>	
<p>(b) (i) $\therefore FM = 2a$</p> <p>$MG = 2(p - a)$</p> <p>$\therefore FG = 2a + 2(p - a)$</p> <p>$= 2p$</p>	<p>1A</p> <p>1A</p>	<p>for either one correct</p>
<p>\therefore x-coordinate of F</p> <p>$= -a$</p> <p>x-coordinate of G</p> <p>$= a + 2(p - a)$</p> <p>$= 2p - a$</p> <p>$\therefore FG = (2p - a) - (-a)$</p> <p>$= 2p$</p>	<p>1A</p> <p>1A</p>	<p>for either one correct</p>
<p>(ii) $F = (-a, b)$</p> <p>$\therefore FG = 2OP$ (by (b)(i)) and $FG \parallel OP$ (given)</p> <p>$\therefore O$ is the mid-point of F and Q.</p> <p>Thus, $Q = (a, -b)$</p>	<p>1A</p> <p>1A</p>	
<p>(iii) \therefore x-coordinate of $Q = a =$ x-coordinate of M</p> <p>$\therefore MQ \perp RS$</p> <p>$\therefore RM = MS$ (by (a)(ii))</p> <p>$\therefore \triangle QMR \cong \triangle QMS$ (SAS)</p> <p>Thus, $QR = QS$</p> <p>Hence, $\triangle QRS$ is an isosceles triangle.</p>	<p>1</p> <p>1</p> <p>(6)</p>	