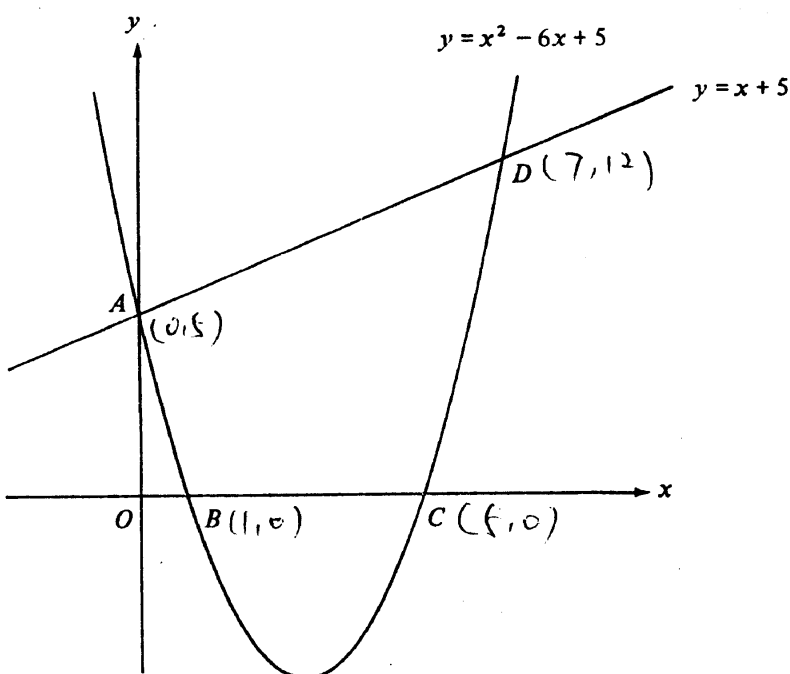


RESTRICTED 内部文件

Solutions	Marks	
<p>4. (a) $2a = 3b = 5c$</p> <p style="margin-left: 40px;">$\frac{2a}{30} = \frac{3b}{30} = \frac{5c}{30}$</p> <p style="margin-left: 40px;">$\therefore a : b : c = 15 : 10 : 6$</p>	<p>1M</p> <p>2A</p>	<p>Correct ratio not in this form, 1A only</p>
<p><u>Alternatively</u></p> <p style="margin-left: 40px;">$\frac{a}{b} = \frac{3}{2}, \quad \frac{b}{c} = \frac{5}{3}$</p> <p style="margin-left: 40px;">Writing $\frac{a}{b} = \frac{15}{10}, \quad \frac{b}{c} = \frac{10}{6}$</p> <p style="margin-left: 40px;">$\therefore a : b : c = 15 : 10 : 6$</p>	<p>1M</p> <p>2A</p>	<p>see above</p>
<p>(b) $a = 15k$</p> <p style="margin-left: 40px;">$b = 10k$</p> <p style="margin-left: 40px;">$c = 6k$</p> <p style="margin-left: 40px;">$a - b + c = (15 - 10 + 6)k$</p> <p style="margin-left: 80px;">$= 55$</p> <p style="margin-left: 40px;">$k = 5$</p> <p style="margin-left: 40px;">$c = 30$</p>	<p>1M</p> <p>1M</p> <p>1A</p> <hr style="width: 50%; margin: 0 auto;"/> <p>6</p>	<p>For either</p>
<p>5. $\sin^2\theta - 3\cos\theta - 1 = 0$</p> <p style="margin-left: 40px;">$1 - \cos^2\theta - 3\cos\theta - 1 = 0$</p> <p style="margin-left: 40px;">$\cos^2\theta + 3\cos\theta = 0$</p> <p style="margin-left: 40px;">$\cos\theta(\cos\theta + 3) = 0$</p> <p style="margin-left: 40px;">$\cos\theta = 0$ or $\cos\theta = -3$ (rejected)</p> <p style="margin-left: 40px;">$\therefore \theta = 90^\circ$ or 270° ($\frac{\pi}{2}$ or $\frac{3\pi}{2}$)</p>	<p>1M</p> <p>1A</p> <p>1A+1A</p> <p>1A+1A</p> <hr style="width: 50%; margin: 0 auto;"/> <p>6</p>	<p>$\sin^2\theta = 1 - \cos^2\theta$</p> <p>Accept $\cos\theta = 0$</p> <p>Withhold 1 mark for each extraneous answer</p>

RESTRICTED 内部文件

Solutions	Marks	
<p>6. (a) Putting $x = 0$, $y = 5$. $\therefore A = (0, 5)$</p> <p>Putting $y = 0$, $x^2 - 6x + 5 = 0$ $(x - 1)(x - 5) = 0$ $x = 1$ or 5</p> <p>$\therefore B = (1, 0)$</p> <p>$C = (5, 0)$</p>	1A 1A 1A	OR The coordinates of A are $x=0$, $y=5$
<p>(b) Putting $y = x + 5$ (or $x = y - 5$)</p> <p>$x + 5 = x^2 - 6x + 5$ ($y = (y - 5)^2 - 6(y - 5) + 5$) $x^2 - 7x = 0$ $x(x - 7) = 0$ $x = 0$ or 7</p> <p>At D, $x = 7$</p> <p>$\therefore y = 12$</p> <p>i.e. $D = (7, 12)$</p>	1A 1A	
	6	
<p>(a) $\alpha + \beta = -\frac{20}{10}$ ($= -2$)</p> <p>$4^\alpha \times 4^\beta = 4^{\alpha+\beta}$</p> <p>$= 4^{-2} \left(= \frac{1}{16} = 0.0625 \right)$</p>	1A 1A 1A	
<p>(b) $\alpha\beta = \frac{1}{10}$</p> <p>$\log_{10}\alpha + \log_{10}\beta = \log_{10}\alpha\beta$</p> <p>$= \log_{10}\frac{1}{10}$</p> <p>$= -1$</p>	1A 1A	
	6	

Solutions	Marks	
9. (a) $C = (2,1)$ $A = (2,0)$	1A 1A <hr/> 2	
(b) Putting $y = mx$ in S	1M	Let $\angle COA = \theta$
$x^2 + (mx)^2 - 4x - 2mx + 4 = 0$		$\tan \theta = \frac{1}{2}$ 1M
$(1 + m^2)x^2 - (4 + 2m)x + 4 = 0 \dots\dots\dots$	1A	$\angle BOA = 2\theta$ 1M
		$\therefore m = \tan 2\theta$ 1A
		$= \frac{2 \tan \theta}{1 - \tan^2 \theta}$ 1A
		$= \frac{2 \times \frac{1}{2}}{1 - \frac{1}{4}} = \frac{4}{3}$ 1A
For tangency, $(4 + 2m)^2 - 4(1 + m^2)(4) = 0$	1M	
$3m^2 - 4m = 0$	1A	
$m = \frac{4}{3} \text{ as } m \neq 0$	1A	
	<hr/> 5 <hr/>	
(c) (i) As OA, OB are tangents, $\angle OAC = 90^\circ$ and $\angle OBC = 90^\circ$ $\therefore \angle OAC + \angle OBC = 180^\circ$ So O, A, C, B are concyclic.	1 1	For either
(ii) As $\angle OAC = 90^\circ$, OC is a diameter of the required circle, whose centre = $(1, \frac{1}{2})$ and radius = $\frac{\sqrt{5}}{2}$.	1A+1A	
Equation of the circle is $(x - 1)^2 + (y - \frac{1}{2})^2 = \frac{5}{4}$ i.e. $x^2 + y^2 - 2x - y = 0$	1A	
	<hr/> 5 <hr/>	
Alternatively		
(1) Let the circle be $x^2 + y^2 + ax + by + c = 0$ Values of a, b, c obtained by substitution	1A+1A+1A	
(2) As OC is a diameter, the circle is $\frac{y - 0}{x - 0} \cdot \frac{y - 1}{x - 2} = -1$	2A	
i.e. $x^2 + y^2 - 2x - y = 0$	1A	

RESTRICTED 内部文件

Solutions	Marks	
<p>10. (a) (i) The probability that the candidate fails on the first attempt but passes on the second is $(1 - 0.7) \times 0.7$</p> <p style="padding-left: 20px;">$= 0.21$</p> <p>(ii) The probability of passing Part A in no more than 2 attempts is $0.7 + 0.21$</p> <p style="padding-left: 20px;">$= 0.91$</p> <p>(iii) The probability of passing Part B in no more than 2 attempts is $0.6 + 0.4 \times 0.6$</p> <p style="padding-left: 20px;">$= 0.84$</p> <p>\therefore the required probability = 0.91×0.84</p> <p style="padding-left: 40px;">$= 0.764$ (0.7644)</p>	<p>1A + 1M 1A 1M+1A 1A 1A 1A 1M 1A <hr style="width: 50%; margin: 0 auto;"/><u>10</u> 1M 1A <hr style="width: 50%; margin: 0 auto;"/><u>2</u></p>	<p>$1 - 0.7$</p> <p>$p \times 0.7$</p> <p>Alternatively 1A for any two: 0.6×0.7 $0.3 \times 0.6 \times 0.7$ $0.4 \times 0.6 \times 0.7$ $0.3 \times 0.4 \times 0.6 \times 0.7$ $P_1 + P_2 + P_3 + P_4 =$ 1M Ans. 2A</p>
<p>(b) No, expected = 0.764×10000</p> <p style="padding-left: 40px;">$= 7640$ (7644).....</p>	<p>1M 1A <hr style="width: 50%; margin: 0 auto;"/><u>2</u></p>	

11.

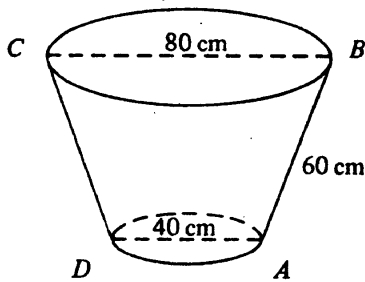


Figure 5a

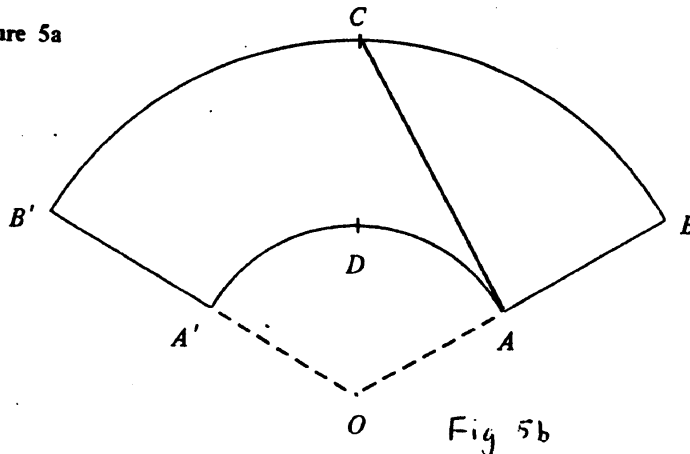
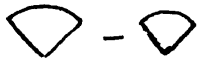


Fig 5b

RESTRICTED 内部文件

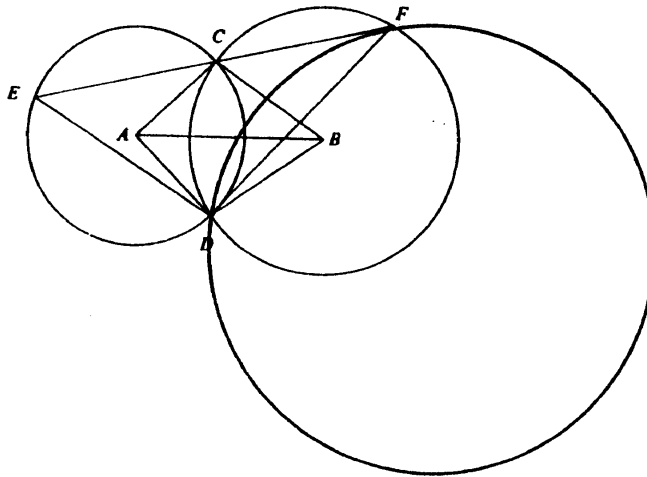
Solutions	Marks	
<p>11. (a) Let $\angle AOA' = \theta$</p> <p>$OA \times \theta = 40\pi$</p> <p>$OB \times \theta = 80\pi$</p> <p>$\frac{OA}{OB} = \frac{40\pi}{80\pi} \left(= \frac{1}{2} \right)$</p> <p>$\frac{OA}{OA + 60} = \frac{1}{2}$</p> <p>$OA = 60 \text{ cm}$</p> <p>$60\theta = 40\pi \text{ (or } 120\theta = 80\pi)$</p> <p>$\theta = \frac{2}{3}\pi \text{ (= } 120^\circ)$</p>	<p>1A</p> <p>1A</p> <p>1A</p> <p>1M</p> <p>1A</p> <hr style="width: 50%; margin: 0 auto;"/> <p>5</p>	<p>For either</p>
<p><u>Alternatively</u></p> <p>From Fig.5a, by similar triangles,</p> <p>$\frac{OA}{OB} = \frac{40}{80} \left(= \frac{1}{2} \right)$</p> <p>$\frac{OA}{OA + 60} = \frac{1}{2}$</p> <p>$\therefore OA = 60 \text{ cm}$</p> <p>Let $\angle AOA' = \theta$</p> <p>$60\theta = 40\pi \text{ (or } 120\theta = 80\pi)$</p> <p>$\theta = \frac{2}{3}\pi$</p>	<p>2A</p> <p>1A</p> <p>1M</p> <p>1A</p>	
<p>(b) Area of $ABB'A' = \frac{1}{3}\pi 120^2 - \frac{1}{3}\pi 60^2$</p> <p style="text-align: center;">$= 3600\pi \text{ cm}^2$</p>	<p>1M</p> <p>+ 1M</p> <p>1A</p> <hr style="width: 50%; margin: 0 auto;"/> <p>3</p>	<p>Area of sector</p> 
<p>(c) The shortest distance = distance between A and C in Figure 5b.</p> <p>$\angle AOC = \frac{120}{2} = 60^\circ$</p> <p>$AC^2 = OA^2 + OC^2 - 2(OA)(OC)\cos 60^\circ$</p> <p>$= 60^2 + 120^2 - 2(60)(120)\left(\frac{1}{2}\right)$</p> <p>$= 10800$</p> <p>$\therefore AC = 104 \text{ cm (103.923) } \dots\dots\dots$</p>	<p>1M</p> <p>1A</p> <p>1M</p> <p>1A</p> <hr style="width: 50%; margin: 0 auto;"/> <p>4</p>	<p>Attempt to find AC</p> <p>$\angle CAO = 90^\circ$ 1</p> <p>$\sin 60^\circ = \frac{AC}{OC}$</p> <p>$\therefore AC = 60\sqrt{3} \text{ cm } 1A$</p> <p>(= 104)</p>

RESTRICTED 内部文件

Solutions	Marks	
12. (a) $d_3 = 0.9 d_1$ $= 7.2$ $d_5 = d_3 \times 0.9 = 6.48$ $d_{2n-1} = 8(0.9)^{n-1}$	1A 1A 2A <hr style="width: 50%; margin: 0 auto;"/> 4	
(b) $d_6 = 10 \times 0.9^2 = 8.1$ $d_{2n} = 10 \times 0.9^{n-1}$	1A 1A <hr style="width: 50%; margin: 0 auto;"/> 2	
(c) (i) $d_1 + d_3 + d_5 + \dots + d_{2n-1}$ $= 8 + 8(0.9) + 8(0.9)^2 + \dots + 8(0.9)^{n-1}$ $= \frac{8[1 - (0.9)^n]}{1 - 0.9}$ $= 80(1 - 0.9^n)$	1M 1A 1A <hr style="width: 50%; margin: 0 auto;"/> 3	Attempting to sum as G.P.
(ii) $d_2 + d_4 + d_6 + \dots + d_{2n}$ $= 10 + 10(0.9) + 10(0.9)^2 + \dots + 10(0.9)^{n-1}$ $= \frac{10[1 - (0.9)^n]}{1 - 0.9}$ $= 100(1 - 0.9^n)$	1A <hr style="width: 50%; margin: 0 auto;"/> 3	
(d) $d_0 + d_1 + d_2 + d_3 + \dots$ $= 10 + (d_1 + d_3 + d_5 + \dots) + (d_2 + d_4 + d_6 + \dots)$ $= 10 + \frac{8}{1 - 0.9} + \frac{10}{1 - 0.9}$ $= 190$	1M 1M 1A <hr style="width: 50%; margin: 0 auto;"/> 3	Grouping even and odd terms Either infinite sum
<div style="display: flex; justify-content: space-around; align-items: center;"> <div style="text-align: center;">$d_0 = 10$</div> <div style="border: 1px solid black; padding: 10px; width: 80%; height: 150px; position: relative;"> <div style="position: absolute; top: 5%; left: 10%;">d_4</div> <div style="position: absolute; top: 15%; left: 10%;">d_5</div> <div style="position: absolute; top: 25%; left: 10%;">d_6</div> <div style="position: absolute; top: 10%; right: 10%;">d_3</div> <div style="position: absolute; top: 80%; left: 10%;">$d_1 = 8$</div> <div style="position: absolute; top: 80%; right: 10%;">$d_2 = 10$</div> <div style="position: absolute; top: 40%; left: 40%;"> ⋯ ⋮ </div> </div> </div>		

RESTRICTED 内部文件

Solutions	Marks	
13. (a) Consider $\triangle ABC$ and $\triangle ABD$.		
$AB = AB$ (common side)	1A	
$BC = BD$ (radii of the same circle)	1A	
$CA = DA$ (radii of the same circle)	1A	
$\therefore \triangle ABC \cong \triangle ABD$ (SSS)	3	
(b) (i) $\angle CAD = 2 \angle FED (= 110^\circ)$	1M	
$\angle CAB = \frac{1}{2} \angle CAD = \angle FED$		
$= 55^\circ$	1A	
$\angle ABC = 180 - 95 - 55$	1M	
$= 30^\circ$	1A	
$\therefore \angle EFD = \angle ABC$		
$= 30^\circ$	1A	
(ii)(1)		



A labelled diagram showing a circle through D touching CF at F .	1A	
(2) Through F draw a diameter FG . Join DG .		<u>OR</u>
$\angle DGF = 30^\circ$ (\angle in alt. segment)	1A	$\angle DGF = 30^\circ$ 1A
$\angle FDG = 90^\circ$ (\angle in a semi-circle)	1A	$\angle DFG = 60^\circ$ 1A
$\frac{DF}{FG} = \frac{1}{2}$ ($= \sin 30^\circ$)		$\therefore \angle FDG = 90^\circ$
i.e. $FG = 2DF$	1A	$FG = 2DF$ 1A
	9	

Alternatively

Through F and D, draw the radii FO and DO .
 As $OF \perp CF$, $\angle DFO = 90^\circ - 30^\circ = 60^\circ$.
 As FO and DO are radii of the same circle,
 $\angle FDO = 60^\circ$
 $\therefore \triangle DFO$ is equilateral
 The diameter = $2 \times FO = 2 \times DF$.

Solutions	Marks	
14. (a) Consider $\triangle AGH$.		
$GH = 1000 \sin \theta$ m	1A	
$AH = 1000 \cos \theta$ m	1A	
	<u>2</u>	
(b) $\angle HAB = 30^\circ$ (or $\angle AHB = 60^\circ$)	1A	
$BH = AH \sin 30^\circ$	1A	
$= 1000 \cos \theta \sin 30^\circ$	1A	$BH = GH$
$= 500 \cos \theta$ m	1A	$= 1000 \sin \theta$
Since $\angle GBH = 45^\circ$, $BH = GH$	1M	1M
$500 \cos \theta = 1000 \sin \theta$		
$\tan \theta = \frac{1}{2}$		
$\theta = 26.6^\circ$ (26.565)	1A	Accept
	<u>5</u>	$26^\circ 34' \sim 26^\circ 36'$
(c) $EF = AB = AH \cos 30^\circ$		
$= 1000 \cos 26.565^\circ \times \cos 30^\circ$		
$= 774.597 \text{ m} \approx 775 \text{ m}$	1A	Accept 774m
$BE = CE$		
$= DF$		
$= 800$		
$EH = 800 - 500 \cos 26.565^\circ$		
$= 352.786 \approx 353 \text{ m}$	1A	
$\tan \angle FHE = \frac{774.597}{352.786}$ (or $\frac{775}{353}$)	1M	
$\angle FHE \approx 65.5^\circ$ (or $\angle EFH = 24.5^\circ$)	1A	$65^\circ 29' \sim 65^\circ 30'$
G is $S65.5^\circ E$ of D (or 114°)	1A	$(24^\circ 29' \sim 24^\circ 30')$
	<u>5</u>	

